



**FREEHAND PERSPECTIVE  
AND SKETCHING**



# FREEHAND PERSPECTIVE AND SKETCHING

PRINCIPLES AND METHODS OF  
EXPRESSION IN THE PICTORIAL  
REPRESENTATION OF COMMON  
OBJECTS, INTERIORS, BUILDINGS  
AND LANDSCAPES

BY

DORA MIRIAM NORTON

INSTRUCTOR IN PERSPECTIVE, SKETCHING  
AND COLOR, PRATT INSTITUTE, BROOKLYN



BROOKLYN  
PUBLISHED BY THE AUTHOR

1909

ARCH.  
HC  
750  
.N88  
1909

**COPYRIGHT, 1908**

**BY DORA MIRIAM NORTON**

**THE UNIVERSITY PRESS, CAMBRIDGE, U. S. A.**


TO THE  
**MEMORY OF WALTER SMITH**

**FIRST DIRECTOR OF THE MASSACHUSETTS NORMAL ART SCHOOL  
INSPIRING CRITIC AND JUDICIOUS FRIEND**

**THIS BOOK IS DEDICATED**

**WITH THE WISH THAT IT MAY HELP OTHERS AS ITS  
AUTHOR HAS BEEN HELPED**

**D. M. N.**



## PREFACE

**T**HIS book presents essentially the course of study in Free-hand Perspective and Sketching as developed during its teaching at Pratt Institute since the founding of the institute in 1887. It consists of a series of illustrated exercises with explanatory text, so covering the subject that students who follow the course as directed acquire the power to draw with ease and intelligence, not only from objects, but from memory and from descriptions. The principles and methods thus set forth have been taught by the author for some years in the above school, and have been found practically effective in that direction.

As offered to the public this course is intended to form a textbook for high, normal, and technical schools and for colleges; also as a book of reference for supervisors and teachers of drawing, and for draughtsmen and artists whose training in perspective needs to be supplemented. Where a less extended course is desired, selections can be made from it at the discretion of the teacher. Moreover there are students so situated that personal art teaching is beyond their reach, though books could be had. But while perspective books, excellent in certain directions, have been published, it has been found difficult to direct inquirers to anything at once directly applicable to immediate use and comprehensive enough to give a working knowledge of the subject. For several years, therefore, the need which this book is intended to meet has been increasingly felt. In the hope that it may pass on to others the aid received in the past it is sent forth.

In making these illustrations the author has been aided largely by Mr. Ernest W. Watson, a graduate of the Massachusetts Normal Art School, and later a student and now an instructor in Pratt Institute. Of this efficient and valued assistance it is a pleasure to thus express a cordial appreciation.

D. M. N.

BROOKLYN, July 14, 1908.





# CONTENTS

	PAGE
INTRODUCTION . . . . .	xi
<b>CHAPTER</b>	
I. GENERAL DIRECTIONS . . . . .	1
II. PENCIL MEASUREMENT AND THE PICTURE PLANE . . . . .	4
III. THE ELLIPSE . . . . .	8
IV. A CYLINDER AND A CYLINDRICAL OBJECT . . . . .	12
V. AN OBJECT ABOVE THE EYE AND THE CONE PRINCIPLE . . . . .	18
VI. A CREAM JUG . . . . .	20
VII. A TIME STUDY . . . . .	24
VIII. A GROUP OF CYLINDRICAL OBJECTS . . . . .	26
IX. CYLINDRICAL OBJECTS GROUPED WITH FRUIT . . . . .	29
X. A GROUP OF OBJECTS FROM MEMORY OR INVENTION . . . . .	31
XI. THE CYLINDER CONE AND BALL GROUPED—A PROBLEM FOR ORIGINAL STUDY . . . . .	34
XII. THE STUDY OF STRAIGHT LINE OBJECTS . . . . .	36
XIII. DRAWING THE BOOK IN TWO POSITIONS . . . . .	43
XIV. THE BOOK WITH A CYLINDRICAL OBJECT . . . . .	45
XV. A PROBLEM FOR ORIGINAL STUDY—THE CYLINDER AND RECTANGULAR BLOCK . . . . .	48
XVI. THE FURTHER STUDY OF STRAIGHT-LINE OBJECTS—A CUBE AT ANGLES WITH THE PICTURE PLANE . . . . .	49
XVII. THE CUBE IN TWO DIFFERENT POSITIONS . . . . .	53
XVIII. A BOOK AT ANGLES TO THE PICTURE PLANE . . . . .	58
XIX. TWO BOOKS AT DIFFERENT ANGLES TO THE PICTURE PLANE . . . . .	61
XX. THE ACTUAL CENTER OF THE CIRCLE AND MEASUREMENT INTO THE PICTURE BY PARALLEL LINES . . . . .	63
XXI. BOOKS WITH A CYLINDRICAL OBJECT . . . . .	67
XXII. THE STUDY AND DRAWING OF A HOUSE . . . . .	69
XXIII. A BUILDING FROM THE PHOTOGRAPH OR A PRINT . . . . .	81
XXIV. TYPE FORMS HELPFUL IN UNDERSTANDING THE HOUSE—THE SQUARE FRAME . . . . .	85
XXV. THE SQUARE PYRAMID AND SQUARE PLINTH . . . . .	88
XXVI. A PROBLEM FOR ORIGINAL STUDY . . . . .	91

# CONTENTS

CHAPTER	PAGE
XXVII. CYLINDRICAL OBJECTS WHEN NOT VERTICAL . . . . .	92
XXVIII. A GROUP OF FLOWER POTS . . . . .	95
XXIX. THE CIRCULAR FRAME IN A SQUARE FRAME . . . . .	96
XXX. A ROUND WINDOW . . . . .	100
XXXI. THE CLOCK A PROBLEM . . . . .	102
XXXII. THE ARCH . . . . .	103
XXXIII. INTERIORS—A ROOM PARALLEL TO THE PICTURE PLANE . . . . .	105
XXXIV. INTERIORS CONTINUED—A ROOM AT ANGLES TO THE PICTURE PLANE	110
XXXV. FURTHER STUDIES OF INTERIORS . . . . .	114
XXXVI. A CHAIR . . . . .	118
XXXVII. THE HEXAGONAL PLINTH IN TWO POSITIONS . . . . .	121
XXXVIII. INTERIOR WITH A TILED FLOOR . . . . .	126
XXXIX. THE HEXAGONAL PRISM AND FRAME . . . . .	128
XL. THE TRIANGULAR PRISM AND FRAME—PROBLEM FOR ORIGINAL STUDY	131
XLI. THE STUDY OF PARALLEL PERSPECTIVE . . . . .	132
XLII. A STREET FROM THE PHOTOGRAPH . . . . .	137
XLIII. EXCEPTIONS TO THE USE OF THE FLAT PICTURE PLANE . . . . .	139
XLIV. SHADOWS . . . . .	143
XLV. OUT-OF-DOORS WORK . . . . .	154
 SOLUTIONS OF PROBLEMS . . . . .	 161
INDEX . . . . .	169

## INTRODUCTION

**F**REEHAND Perspective teaches those few principles or truths which govern the appearance of things to the eye, and the application of these principles to the varied conditions encountered in drawing. Strictly speaking, there are but two foundation truths in perspective, namely:

First. *Things appear smaller in proportion to their distance from the eye.* A house ten rods distant can be wholly seen through one pane of glass (Fig. 8, Ch. II).

Second. The eye can see surfaces in their true shape *only when placed at right angles to the direction in which the eye looks, or, generally speaking, parallel to the face.* When not so placed they appear lessened in one dimension, that is, either narrowed or shortened, in proportion as they are turned away from the face or tend to coincide with the direction of seeing. *This apparent change of shape is Foreshortening.* The cylinder top held at right angles to the direction of seeing appears as a circle (A in Fig. 1). When turned away from this direction (as at B), it appears narrowed, or foreshortened. So the pencil seen its full length at A in Fig. 2 appears foreshortened when held as in B. All the phenomena of free-hand perspective, however complicated and perplexing, may be simplified by referring to one

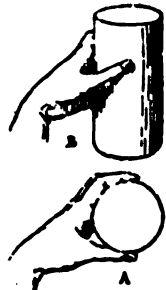


FIG. 1



FIG. 2

or both of these principles.

One great obstacle to the ready mastery of these principles is our knowledge of the actual shapes of objects. For

## FREEHAND PERSPECTIVE


instance, we *know* the top of a cylinder (B, Fig. 1) to be in fact a circle, and therefore we tend to mentally *see* a circle, though it is just as truly a fact that the top can only appear to the eye as a circle when the cylinder is held so as to lose sight of all other parts of it, as at A. Consequently, the first aim and benefit in studying perspective is *the learning to see*; that is, to know what is the image really presented to the eye. Therefore no step should ever be passed without clearly *seeing* the appearance under consideration. And in all drawings the final test must be the eye; for, unless the drawing *looks* right, it is not right. All rules and tests are only means to this end.

Furthermore, the right study of perspective, which is thinking and drawing in perfect coördination, enables the student to draw objects singly or combined or in unfamiliar positions, without having them in sight. Also he should be able to draw an object which he has never seen if a description of it can be supplied. That this last is quite possible any practical artist will agree. The writer recalls hearing a popular illustrator ask in a company of friends, "Does any one know what a cider press is like?" adding that he must put one in an illustration with no chance to see the thing itself. No doubt of the sufficiency of a description was expressed. In fact it must suffice—a not uncommon situation. Hence the necessity of memory work and dictation problems, such as form part of this course of study.

Finally, it is not intended that in later practical work drawings should be actually constructed by the explanatory methods here given. These exercises should be drawn as directed, since only by the actual experience of doing it can their principles be mastered, but a rigid clinging to these methods in practice would result in very little art. Freehand Sketching means *drawing by the trained eye and judgment*, only using constructive methods to test new or doubtful points. It is to make such sketching valuable by a foundation of definite knowledge that these methods

## INTRODUCTION

are given. The trained artist draws a vase in his flower study, or a round tower in a landscape with no distinct recalling of ellipse laws, feeling only joy in the living curves as they spring out under his hand. But he would labor long and wearily over their shaping had he not this foundation knowledge, which he uses almost unconsciously.



# Chapter I

## GENERAL DIRECTIONS

**MATERIALS.**—Any paper having a fine and fairly soft texture can be used. It should produce an even grain in both vertical and horizontal pencil strokes. Pencil exercises such as those reproduced in this book are usually drawn on paper of quarter imperial size (11" × 15"), on which at least an inch and a half of margin is allowed. This is a good size for the student's drawings, whether copied from these exercises or drawn from objects. Have two pencils, one fairly soft (as No. 2 Faber, SM Dixon, or 2 B Koh-i-noor), and a harder one; also a good eraser.

**Line Practice.**—Cut the pencil like the illustration (Fig. 3), and rub on practice paper<sup>1</sup> till a broad line,



FIG. 4



FIG. 3

firm at the edges and transparent (that is, with the grain of the paper slightly showing through it) can be made. Sit erect, with the paper directly in front, and have the desk top inclined, or use a drawing board (Fig. 4), that the paper may be as

nearly as possible parallel with the face. Hold the pencil almost flat, as in the illustration (Fig. 5), and as loosely as is consistent

<sup>1</sup> Save spoiled sheets for this. Practice paper should be like that on which drawings are made.



## FREEHAND PERSPECTIVE

with a steady control. For horizontal lines use position A, Fig. 5, moving the pencil from left to right; for vertical lines use position B, moving from the top downward. Practice vertical, horizontal, or oblique lines persistently; moving the hand freely from the shoulder, not resting it on the wrist or

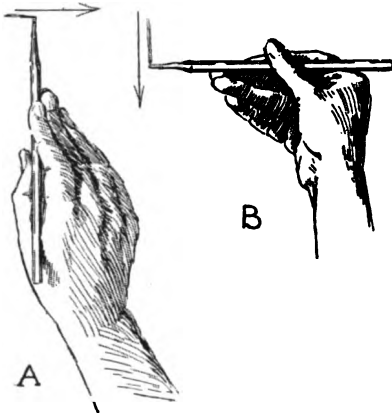


FIG. 5

elbow. If the muscles acquire an unpleasant tension, relax by dropping the hands at the sides and loosely shaking them. Unfamiliar or difficult exercises should be first carefully sketched with a thin, light line. If wrong, draw over without erasing until a satisfactory form is obtained. Erase the incorrect part, and render expressively (Ch. IV). But after the composition of the exercise is planned, such straight lines as margins, cylinder sides, and many ellipses may be drawn in full at once. And as the student gains in skill, more and more of the work should at the first touch be put on the paper as it is intended to remain. The aim is to acquire exact knowledge, that artistic interpretations may be expressed with ease and certainty.

**Models for Work.** — Objects in common use have been chosen for most of these exercises. Geometric solids are assigned only as needed for the clearer elucidation of perspective truths. Necessary models, as the cylinder, the cube, and others, should be made by the student as directed. For forms (as the hexagonal frame) too complicated to be easily made, the well-known wooden models have been used. But after thorough mastery of the simpler forms, most of the later lessons can be understood without models.

**Placing of Models.** — All objects for study should be placed so as to present their vertical surfaces in nearly their true shape to the student. Thus if the model is to be near, as on the table

## GENERAL DIRECTIONS

at which the student sits, it is better to raise it a few inches (Fig. 4). This will not be necessary if it can be placed four or five feet distant. If the study is seen too much from the top, the perspective will be unpleasantly violent, as in a photograph where the camera has been pointed too much downward.

**The Table Line.**—To indicate a supporting surface under the objects a horizontal line (A, B in Fig. 6) is used. It stands for the back edge of the table or other horizontal supporting surface, and is called the Table Line. It should be represented as further back than any portion of the study. As will be observed later, it need not be used if the supporting surface is otherwise suggested, as by a cast shadow (Fig. 34).



FIG. 6

**All Work Freehand.**—All work is to be done freehand, that is, with no ruling, and no measuring other than by the eye and pencil.

## Chapter II

### PENCIL MEASUREMENT AND THE PICTURE PLANE

**P**ENCIL Measurement. — Before studying the exercises which follow, the beginner should become familiar with Pencil Measurement. Place a book upright directly in front of the eye. With one eye shut and the arm at full length (to ensure a uniform distance from the eye) measure on the pencil held horizontally the apparent width of the book. Then turning the pencil, compare this distance with its height

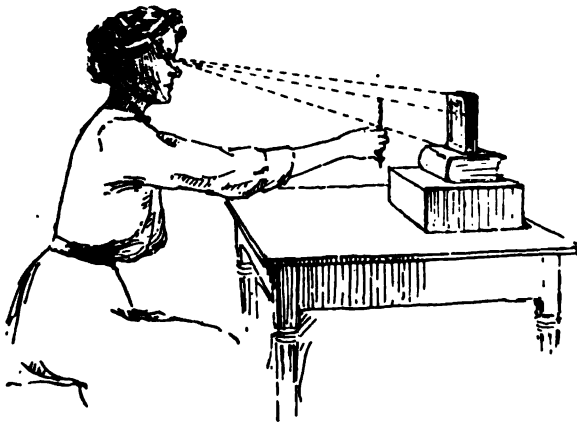


FIG. 7

(Fig. 7). (It is better to take the smaller distance first, and to measure it into the larger.) Compare the proportions so found with those obtained by actual measurement of the book. But always get the pencil measurement

first, for this compels the eye to do all that it can unaided before showing by actual measurement how much better it can learn to do.

Now turn the book away a little, and compare this new appearance of the width with the height (Fig. 11).

At this point the student must learn to *keep the pencil parallel with the face* in order that the pencil measurement may be reliable. For this, go to the window, and stand facing

## PENCIL MEASUREMENT, ETC.

the glass, so the face is parallel with it. Choose some object seen through the window, as another house, and resting the pencil against the glass measure its width and compare that with its height (Fig. 8).

Observe that if the outline of the house could be traced by the pencil on the glass it would form correctly the apparent shape of that house.

This leads us to see that *all perspective drawing may be regarded as placing on paper the equivalent of such a tracing on the glass.*

It will therefore be apparent at once that pencil measurement, to be correct, must be taken with the pencil held as if laid on such a pane of glass; or in other words, *on a plane parallel with and in front of the face.* This imaginary transparent plane is called the Picture Plane, and is a most important factor in all freehand drawing. Thus, by turning or revolving the pencil on the glass in front of the face, that is, by revolving the pencil in the picture

plane, *it can be made to cover the appearance of any possible line or direction.* For example, the sloping gable edge of the outside house, though retreating from the eye and therefore foreshortened, can be covered by the revolving pencil (Fig. 9), thus giving




FIG. 8



FIG. 9

## FREEHAND PERSPECTIVE

the appearance or picture of its direction. Its apparent or foreshortened length can also be taken on the pencil and compared with any other dimension, as the height of the nearest corner. The essential requirement is *that the pencil shall constantly lie flat on this pane of glass; that is, on the picture plane.*

We have therefore, in the use of pencil measurement on the picture plane, a ready and accurate means of ascertaining any direction or any proportionate dimension seen by the eye. It cannot give us *actual* sizes, as the length of the gable in feet; but it will tell us how long the slanting line representing the gable must be drawn *in proportion to other parts of the house.* In this case, for instance, the sloping edge appears three-fourths of the gable width. The difficulty in using this valuable aid with exactness lies in the beginner's trouble in keeping the pencil always in his invisible picture plane. To do this, he should always *mentally see* this plane, recalling that it is always parallel with the general position of the face—that is, vertical. And since the eyes look mostly straight out, or at right angles to the face, the picture plane is at right angles to what we may call the Central Direction of Seeing.

**The Central Direction of Seeing.**—This central direction of seeing must also now be imagined very definitely. It extends from the eye to the center of the objects observed. In the case of the house seen through the pane of glass, the central direction of seeing extends from the eye to the center of the house; while the face and the picture plane are parallel to each other and at right angles to it. The picture plane may then be thought of as a transparent vertical plane pierced in its middle by the direction of seeing.

We have said the central direction of seeing is at right angles to the face. Since the face is generally vertical, the direction of seeing is generally horizontal (A in Fig. 14, Ch. III). The commonest exception is that of being directed slightly downward (B in same Fig.). In this case it cannot be at right angles to the picture plane. It will, however, always *appear* at right angles to

## PENCIL MEASUREMENT, ETC.

it when looked at from above. That is, it is at right angles from side to side, and in a plan will always be shown at right angles, as in Fig. 8.

Return now to the seat (Fig. 7), and try pencil measurement on the turned book. Imagine as clearly as possible the transparent picture plane at arm's length, on which the pencil may be revolved, but through which it must never be thrust. Starting with the pencil erect (Fig. 10) drop it directly over to the left (Fig. 11), watching carefully to keep it from leaning back or forward. Let another person help by turning the book away while you measure it and at




FIG. 10




FIG. 11

the same time keep the pencil from following it backward as it is turned away. Thus as the book is turned, the pencil, if it remains on the picture plane, shows the book to appear narrower or be foreshortened. What is now sought for is that which the eye really sees as

the width, not what the mind *knows* it to be. It is of great importance to distinguish sharply between *actual facts* of form and size and the *perspective appearance of them as presented to the eye*.

An excellent object for practice is a door. Stand facing a closed door, and take its proportions by pencil measurement. Then let some one open it, and observe the apparent decrease in width.




FIG. 12

For further consideration of the picture plane see Chapters XXXV, XLI, and XLIII.

## Chapter III

### THE ELLIPSE

**H**AVING learned that the book cover and door appear foreshortened in proportion as they are near to coinciding with the direction in which they are seen, we naturally look for the same change in the circle. Roll a stiff piece of paper into a cylinder, the thickness of which shall be half its length. Fasten it with a pin or rubber band. Holding



B



A

FIG. 13

the cylinder vertically, as in A, Fig. 13, and with one eye closed, raise it slowly till on a level with the eye. The top now appears as a straight line (B, Fig. 13). It is so foreshortened that its surface is entirely lost to sight, leaving only its edge visible. Now, keeping the cylinder vertical, lower it till the eye sees into it perhaps half an inch. Observe carefully the shape formed by the top. Turn it so the top appears as a circle (A

in Fig. 14), then, holding it vertically again (as at B), compare mentally the apparent shapes as the top is placed in the two different positions.

Now (keeping it always vertical) raise and lower the cylinder slowly, and note how the form of the top changes, appearing

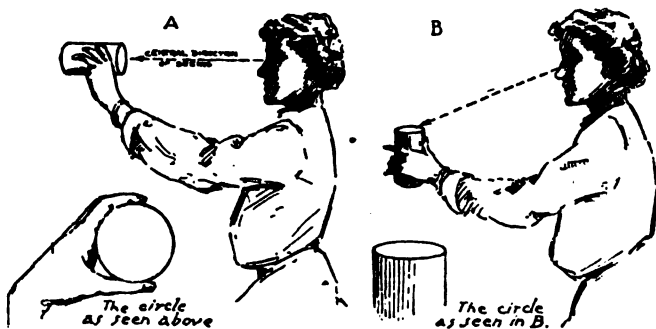


FIG. 14

## THE ELLIPSE

rounder as it is lowered. This peculiar shape, varying in roundness between the straight line and the circle, represents *the appearance of the circle seen obliquely*, and is the *Ellipse*, one of the most beautiful, spirited, and subtle of curves. While the circle is formed by a curve bending equally in all parts, the outline of the ellipse is constantly changing in the degree of its curvature. From the middle of each side (A, A in Fig. 15) this curvature increases smoothly to the ends (B, B). Thus the ellipse may be divided by lines through the middle of its sides and ends into four duplicate curves or quarters. These lines are known as the Long and Short Diameters. On these two lines the ellipse must be symmetrical, whatever the proportion of the diameters to each other; that is, whatever the roundness of the ellipse.

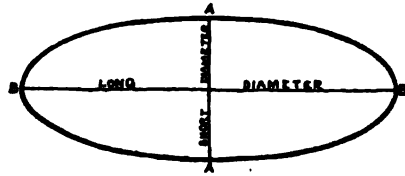


FIG. 15

A test useful to determine the correctness of a drawing of the ellipse is sighting with one eye along the long diameter. If the ellipse is perfect it will appear foreshortened to a circle having a diameter equal to the short diameter of the ellipse. But there is no test of the ellipse like the ellipse itself as seen in objects. The student should compare his drawing of ellipses with the rhythmically varying curves which compose ellipses as seen in real objects, correcting and comparing till the eye is satisfied. If this be faithfully done, the time will be short before ellipses, often deemed a bugbear of freehand drawing, become a pleasure instead of a penance.

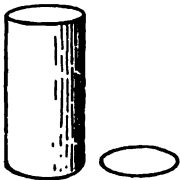


FIG. 16

Since the top ellipse appears rounder as it is dropped below the eye level, it must be concluded that could the bottom be fully seen it would appear as a rounder ellipse than that of the top. Place the cylinder on the table and trace around the bottom with a pencil. Move the cylinder to one side and compare the shape of this traced ellipse with that of the top ellipse (Fig. 16). Also compare both with that part of the cylinder bottom which can



## FREEHAND PERSPECTIVE

be seen. There is no difficulty in perceiving that the ellipses in a vertical cylinder below the eye are rounder as they are farther below the eye level.

Now, keeping the cylinder vertical, raise it slowly. When the bottom ellipse reaches the level of the eye, it appears as a straight line (A in Fig. 17), like the top ellipse when at the same height.





FIG. 17

When the cylinder is moved on above the eye, the bottom becomes an ellipse (B), which as we raise it farther above the eye level appears rounder. We perceive that it appears rounder or less foreshortened in proportion as it is farther from coinciding with the direction in which the eye looks to see it, as was the case with the book cover in Chapter II. Furthermore, if the cylinder be turned horizontally and held at the level of the eye with its length parallel to the picture plane, and one end be brought in front of the eye,

we shall again see this circular end as a straight line (B in Fig. 18), because it coincides with the direction of seeing. If the cylinder be moved horizontally to one side, still keeping its length parallel with the picture plane (A in Fig. 18), the ellipse appears to widen exactly as when the cylinder was held vertically and moved above or below the eye level. The circular top appears as a circle only when its surface is at right angles to the direction of seeing (A, Fig. 14). When oblique to this direction, as at B, it appears as an ellipse, or foreshortened circle. The ellipse is plainly, therefore, an illustration of the second great principle, that of Foreshortening.

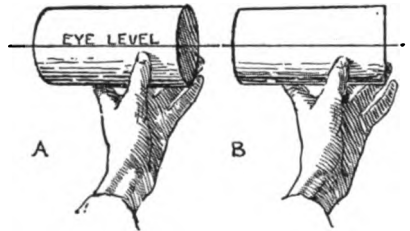


FIG. 18

The student should now practice drawing ellipses, both vertical and horizontal, until they can be formed with ease and exactness. Mark the extreme points (A, A, B, B, Fig. 15) first taking care to have B B exactly opposite the middle of A A. Hold the pencil

## THE ELLIPSE

for drawing ellipses as directed in Chapter I for straight lines, using a position of the hand that will bring the pencil at right angles to the long diameter. If the ellipse is horizontal, begin it a little to the left of the middle of the upper side, drawing to the right first. If vertical, begin below the middle of the left side, and draw up. Make the whole outline with one movement, first carrying the pencil evenly several times over the paper without touching it, to gain confidence and certainty of movement.

## Chapter IV

### A CYLINDER AND A CYLINDRICAL OBJECT

**T**HE student should draw this exercise, following carefully the directions given. After doing so he should draw a cylindrical object of his own choosing, putting in practice the principles taught in this chapter.




FIG. 19

**Planning the Drawing.** — The Design, or Composition, or Decorative Arrangement of the exercise, which is that kind of beauty secured by a harmonious and artistic relating of the work and its spaces, is to be considered first in all drawings, and should always be kept in mind. For this exercise (Fig. 19) we first consider how to place most effectively in a drawing these two separated

## CYLINDER AND CYLINDRICAL OBJECT

objects, a cylinder whose height is twice its width and some simple cylindrical object (in this case a rose jar). To this end after drawing the margin the extreme points in the boundaries of the objects are lightly indicated on the paper (Fig. 20), taking care that the spaces between them and the margin are such as to

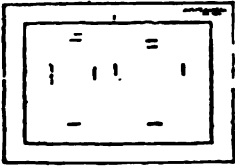


FIG. 20

give an agreeable and interesting division of the inclosed surface. The continuous table line behind them indicates that they stand on the same surface, and thus links them together. The size of the space between them, being no more than that between either and the side

margin, also helps unite them; and the position of the ornament on the jar, near the middle of the sheet, attracts the eye to the center in comparison with the whole.

**Drawing the Cylinder.** — For this the paper cylinder model used in Chapter III is placed as shown in the illustration (Fig. 19), that is, a little below the eye level, and at least six times its height from the eye. The apparent proportion of the top (that is, if the width of the ellipse appears to be one third, one fourth or some other part of its length) should be carefully judged by the eye and then tested by pencil measurement. Four points for this ellipse should then be lightly marked, and it should be drawn through these points as previously directed. The bottom ellipse is sketched directly under the upper and in the same way, remembering that it must be of the same length, but rounder. The back or invisible part of each ellipse is left light. The straight lines for the sides must be tangential to the ends of the ellipses, so they will join with perfect smoothness. If they do not thus join, the ellipse is the part most likely to be wrong.

Now is the time to put the drawing back by the paper model and compare the two. Look longest at the model, glancing briefly at the drawing; the aim being always to form in the mind a clear image of the model's true shape, and to correct the work by it. The student should ask himself if the cylinder in his drawing appears to press evenly on the ground like the model. The com-

## FREEHAND PERSPECTIVE

monest error is that of bending the outline of the partially visible ellipse too much at A in Fig. 21, and not increasing the curvature toward its ends (B, B), thus making the curve more circular than elliptical, and causing the cylinder in his drawing to look as if it would rock on its base, instead of resting firmly on every part of it. Sketching the ellipse entire (C, C) is an aid in such a case.

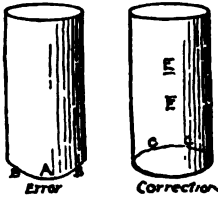


FIG. 21

Next a pencil line is drawn around the paper cylinder half way between the top and bottom. Points (E, E, Fig. 21) are then marked on the drawing, one half way between the fronts, and the other half way between the backs of the ellipses. These points should be tested after marking and made correct, but never measured till the eye has been made to do its utmost. Observe that these marks give a short diameter for the middle ellipse half way in size between those of the upper and lower ellipses.

In the same way the two other lines around the cylinder may be made on the model and represented in the drawing.

Now another paper cylinder, of the same length as the first but only two thirds its diameter, must be made, and placed within the first. Have the space between them even all the way around, so that the circular tops of the two cylinders form concentric circles. They appear as ellipses. Observing carefully the space between these ellipses, the student easily sees that it appears widest between the ends, and a little wider between the front sides than between the back sides. As we made the inner cylinder two thirds of the diameter of the outer, the horizontal space between the ends of the two ellipses will each be actually made one sixth of the length of the outer ellipse. They will also *appear* as sixths, because the ends of the ellipse are equally distant from the eye. The ends of the inner ellipse (C, C) are marked by light vertical lines. For its front and back we divide



FIG. 22

## CYLINDER AND CYLINDRICAL OBJECT

the width of the outer one also into sixths, but as these sixths are in perspective or at varying distances from the eye, they are *perspective* sixths. That is, *they appear successively smaller as they recede from the eye*. This perspective division is here made wholly by the eye (though later another method is given). The perspective middle (point G) is first marked on the short diameter, making the near half considerably larger than the far one. Each perspective half is then divided into perspective thirds, after which the six divisions are tested to see if they are successively smaller, as directed above. Draw the inner ellipse, making its ends tangential to the vertical lines (C, C), and exactly opposite the middle of its short diameter. It will now be found, if we have drawn the long diameters of these two ellipses where they must always be, *in the apparent middle from front to back*, that the long diameter of the inner one falls higher on the paper than that of the outer one. From this we conclude that neither long diameter represents the actual diameter of the circle. Fig. 23 shows the plan of a circle with its true diameter, A A. The eye at x sees B B, a line connecting two tangentials, as the longest line in that circle. It therefore becomes the long diameter of the ellipse which the eye in that position sees. Meanwhile the actual diameter appears both shorter and farther back than B B, because farther away. That part of the circumference back of B B, though actually larger, is so foreshortened as to appear exactly like the part in front, producing the symmetry which is the wonderful and unfailing characteristic of the ellipse.

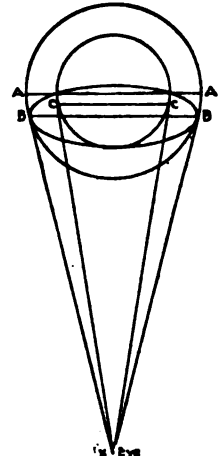


FIG. 23

Since the inner circle is smaller, the eye can see farther round it, as shown in Fig. 23. This furnishes another reason for its long diameter falling farther back, and agrees with the fact that the really even space between the two circles appears greatest in front.

**The Rose Jar.** — For the second object proceed as with the cylinder, drawing lightly all of the ellipses entire first. Should

## FREEHAND PERSPECTIVE

any fall at the same height as one on the cylinder, it must be made of the same roundness, since the two objects are shown by the table line to be on the same surface, and are equally near



FIG. 24

the eye. Compare the size of the ellipses with the extreme width of the space occupied on the paper by the jar. Compare also the lengths of the top and bottom ellipses, and the length of each with the extreme width of the jar. Observe that the sides of its short cylindrical neck slope outward slightly toward the body of the jar.

**The Shoulders and Base of the Jar.**—Before drawing the side outlines, hold the jar vertically at arm's length, and with the top on a level with the eye. Mark the point (A in

Fig. 24) where the body and neck boundaries meet. Holding this point, lower the object till the top appears as a fairly round ellipse. It will be plain that we now see a portion of surface beyond the end of the ellipse, and more than half way over its shoulder. The boundary line which marks the limit of our seeing has moved back on the shoulder, so that it passes out of sight behind the neck. A little experimenting shows that the surface visible beyond the end of the ellipse is in exact proportion to the roundness of the ellipse.

Now place a sheet of paper on the table, and first holding the jar so its base is on a level with the eye (Fig. 25), mark the extreme point of the base, B. Lower the jar slowly, till the bottom rests on the paper. Mark point B on the paper and then the points (C, C) where the side boundaries now appear to meet the bottom ellipse. Trace

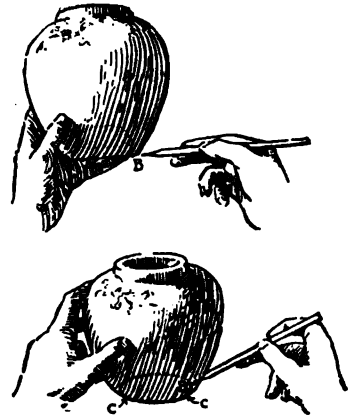


FIG. 25

around the bottom and lift aside the object. It will be found that the projecting mass of the jar, being nearer the eye than

## CYLINDER AND CYLINDRICAL OBJECT

the ellipse, had hidden from sight more than half of it. It is also evident that on the lower and receding part of the jar the boundary line advances, so that we see less than half of the surface, instead of more, as at the top. If we now trace on the jar its boundary line and turn it around, the tracing will be seen to cross the object obliquely (Fig. 26). With these facts in mind, complete the drawing of the rose jar.



FIG. 26

**Tangential Joinings.** — *All meetings of boundary lines with ellipses must be tangential.* That is, they must touch so that if smoothly continued they would not cut the ellipse.

**Artistic Rendering.** — The jar should be first drawn with thin light lines, corrected to accuracy, and afterward rendered with significance. For though outlines are entirely conventional, never being seen in nature, yet they may not only be made to mark off beautiful and interesting shapes, but by their character to suggest other truths and qualities for the enhancement of charm. Thus in the rose jar the front edge is shown to be nearer than the back by the heavier line, and the rounded thickness of the top is indicated by the absence of nearly all of the inner ellipse at the back and of the outer one at the front. The sides are drawn with a little lighter lines at the top, and though firm enough to clearly present the shape of the jar, are lighter than the front part of the top, because representing a part of the jar further from the eye.

The ornament may help to express the rounded form of the jar by its foreshortened shape as it nears the boundary, and by the greater clearness and emphasis of that portion of it most thrust forward. Its outlines, emphasized on one side, with the other side light or lost, and the detail shown in the side lines of the jar, indicate it to be in relief. The expression of color in places is used to strengthen the projection of the jar.

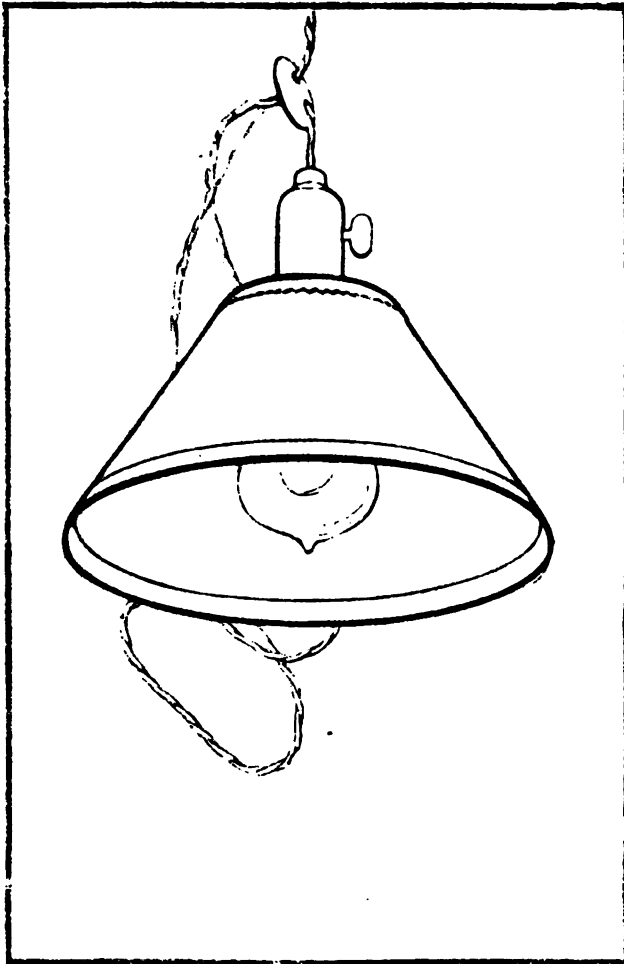
These remarks, however, must not be understood as rules. They are but suggestions for the incitement of the student to use his own artistic judgment.



## Chapter V

### AN OBJECT ABOVE THE EYE AND THE CONE PRINCIPLE

**T**HE electric lamp shade here shown (Fig. 27) is vertical and above the eye, and its ellipses therefore increase in roundness toward its top. The student should draw this



exercise, and make another study from some object similarly placed.

#### **Drawing the Object.**

— Proceed as in the previous exercise. Observe that the sloping side boundary lines of the shade join the ellipses in front of their ends. The flaring shade is like the lower half of the rose jar reversed. Its smaller part is farthest from the level of the eye, as was the base of the rose jar, and we therefore do not see half way round it. To make this clear, hold a cone<sup>1</sup> in various positions

FIG. 27

<sup>1</sup> One may be made from paper (Fig. 28).

## OBJECT ABOVE THE EYE, ETC.

(that is, above and below the eye), and with apex up and down (Fig. 29).

The button through which the cord is drawn forms an oblique ellipse. But by turning Fig. 27 so as to bring this ellipse horizontal, the button will be found symmetrical on its axis (see Ch. XXVII), and as it is arched or thickened in its middle, the space in front of the holes




FIG. 29

for the cord appears a good deal wider than that back of them. Each side of the button is a very flat modified cone. Notice in the outline of the cylinder the slight depression marking where the key enters its side.



FIG. 28

It may be now noted that *when the cone apex* (that is, its decrease of diameter) *is nearer the eye than its base, we see more than half way round it.* Conversely, *we see less than half way round when the apex is farther from the eye.* This characteristic of curved or sloping surfaces in cylindrical objects may be termed *the Cone Principle.* Broadly speaking, it is *the expression, by outline merely, of Relief, or Solidity, or Third Dimension.* The rose jar in Chapter IV, the cream jug in Chapter VI, and indeed all cylindrical objects with flaring or bulging sides, are examples. More advanced applications of this principle are found in the drawing of such natural objects as trees and mountains, also in drawing the human face and figure.

## Chapter VI

### A CREAM JUG

**T**HE Model.—Provide an object similar to the cream pitcher here shown (Fig. 30), from which the student's drawing should be made. If inexperienced he will be helped by first making a copy from this example.




FIG. 30

the handle directly in front, when this same center line (x in Fig. 32) will appear straight and vertical. Now, turn the jug slowly back, bringing

**The Handle.**—Place the jug a little below the eye (according to the directions in Ch. I). Draw the cylindrical body entire first as if it had neither handle nor spout, and with light lines (Fig. 31). Then hold the model with its center at the level of the eye and with the handle in profile (A in Fig. 32). Observe that a center line for the joining of the handle with the model would fall in the curved boundary line or profile of the jug. Turn it to bring

## A CREAM JUG

the handle again into the boundary line. It is apparent that as the handle revolves, its center line of joining changes in appearance from a straight line in front through a succession of curves that increase in roundness till at last it coincides again with the profile of the jug (C in Fig. 32). These curves are lines such as would be produced on the surface by cutting vertically through the jug center,



FIG. 31

as an apple is halved; and may be named Profile Lines or Profiles.

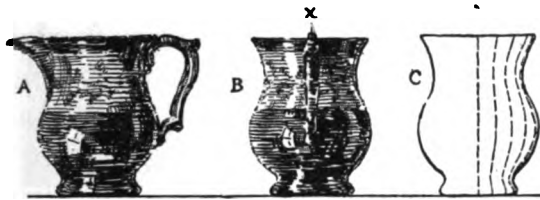


FIG. 32

Replace the model on the table and revolve the handle to the side again, when it will be seen that these profile

curves now begin and end on the top and bottom ellipses of the jug (Fig. 33). And the side boundary of the jug does not now coincide with the profile at the side, as it did (A in Fig. 32) when the jug was held at the eye level. This is because of the change in the position of the boundary. As the jug is placed below the eye the boundary advances from A to B, recedes from B to C, and advances again from C to D, in accordance with the cone principle (Ch. V).

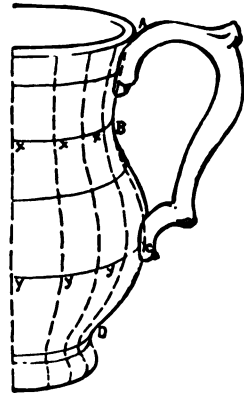


FIG. 33

In Fig. 34 is shown by a dotted tracing of this boundary how it actually differs from the profile curves in Fig. 33. In



FIG. 34

sketching a profile curve, therefore, allowance must be made, as shown in Fig. 33. Note how x, x, x, the points of the smallest diameter, fall in an ellipse at that height; also the points y, y, y, of the greatest diameter.

*One of these profile curves, shaped according to its nearness to the boundary of the object, should be sketched as a guide for the attachment of the handle.*

In the same way we observe *the shape of the handle itself to vary*

## FREEHAND PERSPECTIVE

according to position, *from a profile view at the side* (A in Fig. 32) *to a view of its outer surface* (B in Fig. 32).

**The Spout.**—Looking directly into the jug from above (Fig. 35), we note that the spout is directly opposite the handle, so that a horizontal line through the middle of both would pass through the center of the circular top. We therefore mark the perspective middle of the top ellipse (O in Fig. 36) (that is, making the nearest half larger), draw a line through it from the center of the handle top, and mark the end of the spout on this line. For the width of the spout, set off perspective distances from this line either way on the top edge of the pitcher, remembering that the half nearest the end of the ellipse is much the more foreshortened; and that the difference is greater the more the top is foreshortened. From these points to the tip of the spout straight lines may be sketched as guides for drawing the edges, which



FIG. 35

may be straight but usually curve both upward and sidewise. The profile or center line for the spout is sketched like that for the handle (A in Fig. 36).

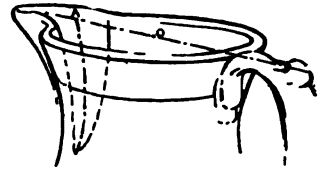


FIG. 36

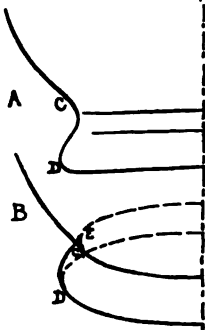


FIG. 37

**The Foot.**—The drawing of the foot also needs some explanation, though covered by the cone principle of Chapter V. In profile it would appear as at A in Fig. 37, with the circles as straight lines; and the student should raise his model to the eye level and observe it thus. On lowering the model these seeming straight lines appear as ellipses (B, Fig. 37), and the lower part of the side boundary lines of both the pitcher and its foot move forward of the ends of these ellipses till tangential joinings are made at C and D. The upper part of the boundary of the foot moves back, joining the upper ellipse at E. In consequence, this side outline of the foot (E D) is a little lengthened, making its curve less round than in profile.

## A CREAM JUG

The lower half of the jug, as we can now see, is a modified vertical cone with its apex down (A, Fig. 38). The foot is modified from two cones; one with the apex up, the other with the apex down (B, Fig. 38). See Chapters IV and V.

**The Ornament.** — The principle followed in suggesting the perspective of the ornament will be readily seen from the illustration (Fig. 39). The curved guide lines are parts of profiles similar to those for placing the handle and spout.



FIG. 39

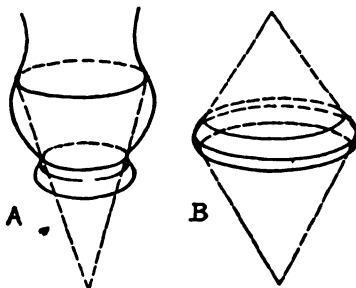


FIG. 38

The student will now begin to understand that it is possible to recognize and suggest the solid rounding surface of the object by every line and touch upon it. To this end that part of the ornament nearest the eye is more emphasized in the final drawing. And looking carefully at the object, we see that besides its foreshortening, that part of the ornament near the boundary is less distinct, and is often lost in the reflections from its surroundings.

## Chapter VII

### A TIME STUDY

**H**AVING carefully studied the principles of cylindrical objects, it is now best to take a specified time, as fifteen minutes, for the more free drawing of such an object, choosing a simple one at first. Proceed as before, except that most of the measuring and testing must be omitted. This leaves




FIG. 40. A TIME STUDY.

time to draw slowly and thoughtfully, making the unaided eye do all that is possible. Study the general shape, looking long at the object, and moving the pencil several times, without marking over the paper where the lines are to be drawn to acquire confidence and certainty of touch. Require yourself to work with

## A TIME STUDY

no erasing (except of such construction lines as may show when the drawing is done), and to stop when the time is up. It will be found a valuable exercise to draw in this way the same object several times. After one drawing is done, carefully examine and test it to find the errors, but do not correct them on that drawing. Instead, make those points right in your next attempt at the same object.

Observe in Fig. 39 how the effect of glass is given by a few lines selected from those many graceful curves of delicate dark and light which appear in the object; also the sketching of its high lights, or window reflections, and the wavy distortion of lines seen through it. The straight lines give a firmness to the composition which is needed, since the bowl consists wholly of curved lines.



## Chapter VIII

### A GROUP OF CYLINDRICAL OBJECTS

**F**IG. 44 is an exercise in the grouping of cylindrical objects agreeably and appropriately together. The student is advised to first draw this example, using carefully the explanations given. After that, he should arrange and draw another group of two cylindrical objects.

**Making the Composition.** — In composing this second group, experiments should be made with a number of objects, combining them in different ways. A Finder, which is a card having a small rectangular opening cut in it (Fig. 41), will greatly assist in judging the pictorial effect of a composition, especially in a rectangular margin.

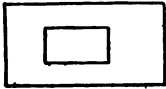


FIG. 41

The student should look through it at his arrangement with one eye, letting its edge take the place of a margin, and moving it back and forth till the place is found where it makes the group look best. Little trial or "thumb-nail" sketches (Figs. 42 and 43) should also be made to determine the best arrangement.



FIG. 42




FIG. 43

In Fig. 44, for example, we observe that the objects are such as might naturally be placed together, and are placed in positions that are not unusual. Next their shapes make a pleasant relief or contrast to each other without harsh or awkward opposition; one being tall and slender and the other lower and round. Yet the teapot is not so low nor wide but that it echoes in some degree the dominant height of the candlestick, thus aiding harmony. Its spout is allowed to

## A GROUP OF CYLINDRICAL OBJECTS

project across the candlestick, thus contributing to the unity of the composition. The leaning bowl, by passing behind both, also strengthens unity, and by its lighter and more interrupted lines furnishes a transition, or connection, between the nearer objects and the white paper. These results might be secured by other groupings. But had the candlestick been in front, for instance, its projection above and below the teapot would have been so nearly equal as to seem uninteresting (Fig. 42). Yet we could have remedied this somewhat by placing the candlestick a greater distance in advance, or raising the teapot handle. Or the cover could have been placed on the ground in front (Fig. 43) — indeed, many possibilities will be suggested by a little study.




FIG. 44

## FREEHAND PERSPECTIVE

**Drawing the Group.**— In drawing this exercise, observe that though the bottom ellipses of the two objects are at the same level the nearer appears slightly rounder (Solutions of Problems, Ch. XI). Care must be taken in placing these ellipses to allow for the bulging of the teapot sides. Remember that in proportion as the bottoms are drawn foreshortened so must all spaces on the table be regarded as foreshortened. Note also that all ellipses in the candlestick which are nearer the eye level than the top of the teapot will be less round than those of the teapot.

**The Teapot Ears.**— In placing these, an ellipse may be used as a guide (A in Fig. 45). The middle points of the two ears should



be on a line passing through the perspective (that is, actual) center (o) of this ellipse, as were the handle and nose of the pitcher in Chapter VI. The cover is arched (B in Fig. 45), so that it conceals the back of its elliptical edge. This arched shape is distinctly seen in the form of its top boundary and is a very different shape from the ellipse.



FIG. 45

But this arched boundary does not fall in the actual middle of the cover (since we are looking down on it), but a little beyond that. The knob is in the actual middle.

The rendering of two things is more complicated and interesting than that of one alone. As the candlestick is farther away than the teapot, its lines are made lighter, and in places are quite lost. The lines of the glass rim, or *bobèche* are thinner, more interrupted and more smoothly sweeping. The leaning bowl may be omitted at this time, if found difficult. The principles of its construction are given later (Ch. XXVII). If omitted it will be found necessary to make the farther lines of the candlestick lighter yet, to serve in place of the bowl as a transition.

## Chapter IX

### CYLINDRICAL OBJECTS GROUPED WITH FRUIT

**A**N example of grouping is here given in which part of the group is cut by the margin, while the apples illustrate the combination of natural forms with cylindrical objects. As in the preceding exercise, the student should compose



FIG. 46

a group corresponding to this exercise and draw it; and if inexperienced should draw this before making his original one.

**Study of the Group.** — In locating the pitcher on the paper, see that its base is far enough from the dish for the two objects to clear

## FREEHAND PERSPECTIVE

each other. Observe the generally elliptical shape of the curves in the glass pitcher; and how the edge of the plate is seen warped and interrupted through it. The plate is made subordinate, as

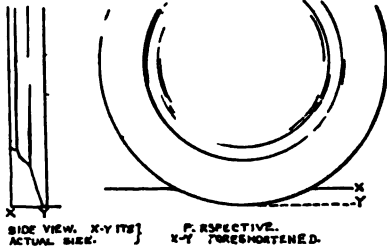


Fig. 47

forming part of the background for the other two objects. Its position, appearing in its actual shape as a simple circle, contributes to the desired effect of quietness or subordination, as does its being cut by the margin line, and its lighter and slightly interrupted lines.

Since it is standing vertically, it must be supported by a vertical surface behind it. Consequently the table line (Ch. I) must be placed only far enough on the paper above the lowest point of the plate edge to express the foreshortened necessary distance of this point from the wall behind it (Fig. 47).

## Chapter X

### A GROUP OF OBJECTS FROM MEMORY OR INVENTION

**T**HIS example illustrates the drawing of objects from invention or memory. The student may sketch this exercise as directed; then should invent or draw from memory one of his own arrangement, making small trial sketches as in Chapter VIII, and using the best of these in his




FIG. 48

final composition. Should his memory not be clear enough for this, it may be refreshed as often as necessary by study of the objects he chooses to draw, the only condition being that *the drawing be done without the object in view.*



## OBJECTS FROM MEMORY

**Chapter IV.** Note the foreshortening in its details, and how the lines of the fret express the curving form of the cover. It will be seen that the stripes on the object and some lines of the fret follow the profile lines mentioned in Chapter VI.

**The Fan.** — Like the plate in Chapter IX, the fan is purposely placed so that it is not foreshortened. Therefore the two points (G, G) at which it rests on the table appear, as they actually are, in a horizontal line. It also appears in its true shape, symmetrical on an axis passing through its handle (H, H). It is more easily drawn entire first, erasing later the part not needed.



## Chapter XI

### THE CYLINDER CONE AND BALL GROUPED —A PROBLEM FOR ORIGINAL STUDY

**G**ENERAL Conditions for Perspective Problems.—Problems are to the student both a test of his comprehension of the subject thus far, and an exercise by which the subject becomes firmly fixed in his mind. To this end the drawings must be made *without the models in sight*, though they should be studied, and if necessary even sketched in the required positions

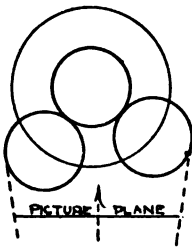


FIG. 50

before drawing. If the student is at loss to recall their appearance while engaged in work they may be studied as often as needed; provided only that neither the models nor sketches of them are before the student as the drawing is made. It cannot be expected that any object should be drawn until opportunity has been given for its thorough study; but on the other hand it is not mastered until it can be correctly drawn from unaided knowledge and memory. The stated dimensions are important, giving training in the expression of proportion, though drawings need not be full size.

Drawings should of course be made without assistance, and without referring to the explanations in the back of this book. When the student has under the required conditions made his drawing, he may then test his work by consulting the explanation.

**Conditions of this Problem.**—In this problem the cylinder and cone are to be 4" in diameter by 8" high, and the ball 4" in

## CYLINDER CONE AND BALL

diameter. The group is to be drawn as if three fourths of the cylinder height below the eye, and at least six times its height distant. The cylinder stands on one end and the cone on its base, touching the cylinder and a little in front of it at one side. The ball also touches the cylinder, and is a little more in front of it on the other side. The plan (Fig. 50) will make this clearer.

## Chapter XII

### THE STUDY OF STRAIGHT-LINE OBJECTS

#### A BOOK WITH BACK PARALLEL WITH THE FACE

**F**OR this study provide a book, two long pencils, and three yards of fine twine, also paper for sketching. Choose a book of interesting appearance; a somewhat worn, leather-bound book is best. Place it well back on the table in front of you and below the eye with its back next to and parallel with the picture plane, and its ends equally distant from you (Fig. 51).



FIG. 51

placed as directed, its back, being parallel with the picture plane, will be seen in its true shape if traced upon it. Lifting the cover till it is vertical (Fig. 52), we see that the cover also now appears in its actual form. But as we drop it slowly

**The Book Below the Eye.**  
—Two surfaces are visible, the back and one cover. Count the edges seen (seven), then decide how many of these are actually horizontal.<sup>1</sup>

If the book is




FIG. 52

<sup>1</sup> It may not at first be realized that the ends of the cover are horizontal, as well as its sides. But as they are contained in a horizontal surface (in this case the cover), they also must be horizontal. Their perspective appearance must be distinguished from their actual position.

## STRAIGHT-LINE OBJECTS

back till horizontal, we observe that the further edge seems to grow shorter because moving from the eye, and that the whole cover becomes foreshortened or narrowed from front to back,




FIG. 53

like the circular ends of the cylinder in Chapter IV. If (as with the house in Ch. II), a pane of glass were standing in place of the imaginary picture plane, a tracing of the cover on that would be a true perspective of it. *How to draw on the paper such a perspective is our problem.* Stand the pencils against the nearest corners of the cover

(Fig. 53); then closing one eye, and keeping the other exactly opposite the middle of the book, incline the pencils toward each other (being careful not to lean them back or forward) until they appear to lie just along the retreating ends of the cover (Fig. 54). Let another person hold a ruler against the pencils, moving it down until its edge seems to coincide with the further edge of the




FIG. 54




FIG. 55

cover (Fig. 55). Now the pencils and the ruler together picture *the apparent shape of the cover*, and we plainly see how *the apparent shortening of the back edge* (caused by its greater distance from us) *makes the ends appear to converge toward each other*. The question now is: Can the law of that conver-

gence be so determined that it may be applied in any drawing?

**The Converging Book Ends.**—Substitute for the pencils the string slipped under the cover to the back, and using one eye as before, bring the ends together so that the strings will appear to exactly coincide with the ends of the cover as did the pencils. (Be sure to keep the string vertically over the front edge of the book, not letting it fall back or forward.) The pencil may now

## FREEHAND PERSPECTIVE

be taken in the other hand, and slipped down on the string, to form again the shape of the foreshortened cover (A in Fig. 59).

Still holding the string as before, raise the book and string a few inches, keeping the book level and the string taut (A in

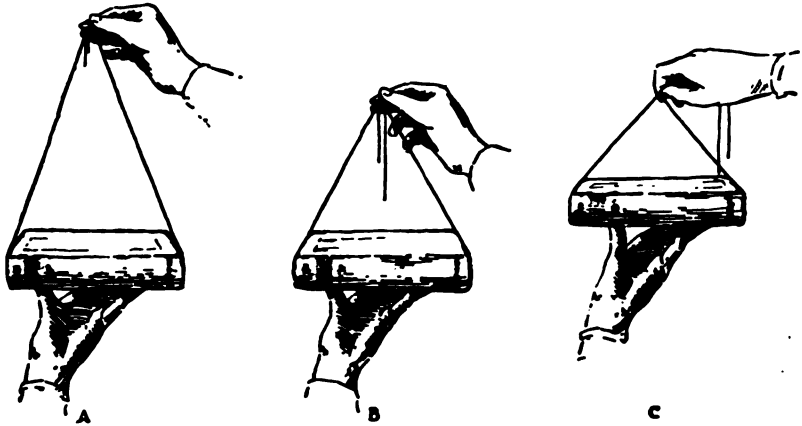


FIG. 56

Fig. 56). The string does not now cover the book ends, and the joining must be brought lower (as in B) that it may do so.




FIG. 57

If the book is raised more, the joining is yet nearer to the book, as in C; until when the book cover is at the level of the eye (Fig. 57) the string and the book cover both disappear in, or coincide with, the upper edge of the book.

Now, starting with the position last shown, (Fig. 57) hold the thumb and finger firmly at that place on the eye level (this can be done by noting a point behind it on the wall), and let the book drop slowly. Keep it exactly horizontal, and let the string slip through the stationary thumb and finger, so that their meeting point remains at the eye level. If this is carefully done, it will be seen that as the book descends, the string continues to cover the converging ends (as in C and B, Fig. 56). At the same time the cover appears to grow wider, and its ends more and more nearly vertical.

## STRAIGHT-LINE OBJECTS

These experiments should also be tried with the lower cover, holding the book above the eye (Fig. 58), and raising and lowering it.

From the foregoing study it is easily perceived that, *provided we keep the book horizontal, the point toward which its ends appear to converge remains always at the level of the eye.* We have therefore only to sketch the eye level at its right height compared with some measurement on the object and mark the point of convergence in the right place on it, to be able to use it for drawing these converging lines.

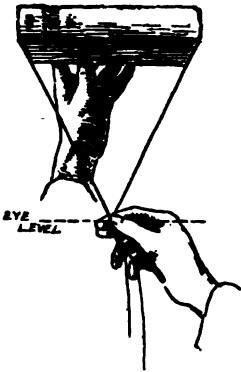


FIG. 58

We have also found that *the horizontal book covers* (like the cylinder top in Ch. IV) *appear foreshortened according as they approach the eye level, whether above or below it* (Figs. 56 and 58).

**Sketching the Book.** — The book may now be replaced as at first. Then, holding the strings, as before, take the pencil as in B, Fig.

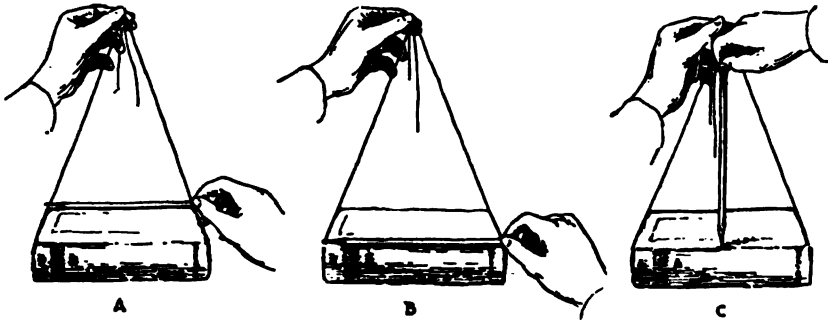


FIG. 59

59, that the thumb nail may be used as a sliding gauge. With it measure the length of the back of the book on its upper near edge and compare its length with the vertical distance from this edge to where the strings join (C in Fig. 59). (In this case it takes one and one fourth of the book length to reach the joining of the strings.) Now the back of the book may be sketched in, the point of convergence (the joining of the string) marked on

## FREEHAND PERSPECTIVE

the paper one and a half book lengths above its middle, and lines drawn from the upper corners of the back to this point. On these lines the ends of the cover are to be marked off. The perspective or apparent width of the cover may be found by measuring it with a pencil held vertically as in Fig. 60, and comparing this dimension with the length of the book. In this case the apparent width is one fourth of the book length.




FIG. 60

**The Level of the Eye.**— This will be found of the greatest importance in all drawings. It should be carefully marked in the drawing as soon as the position of the objects on the paper give a basis for locating it. At first, another person may assist (Fig. 61), but a little practice will enable the student to find it for himself. The top of a pencil, held vertically over the objects, will appear as a straight line when at the height of the eye (Fig. 62). Or if any part of the study is as high as the eye, the eye level will be where any horizontal surface or any receding horizontal lines appear as straight lines. See Fig. 63.




FIG. 61

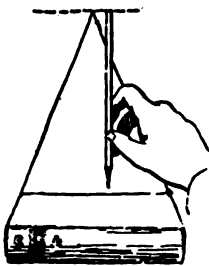


FIG. 62

**Parallel Lines.**— By holding one string down on the near end of a margin line on the book this line will be seen to converge to the same point with the two ends (Fig. 64). By placing a second book on and parallel to the first, we can show that *all lines parallel with the first two converging ones will appear to converge with them to the same point.* An important deduction from this is that *parallel lines appear to converge to the same point.*

It is also evident that since the whole book cover is foreshortened from front to back, the margins will be foreshortened

## STRAIGHT-LINE OBJECTS

in the same direction. And we find that the side margins are foreshortened in length, but not in width; while the front and back margins are foreshortened in width, and the back one more than the front. This follows the principle of the top of the hollow cylinder in Chapter IV.

**The Vanishing Point.**— We see that the book ends seem to converge in proportion as the back edge of the cover appears shorter.



FIG. 63

If a second book like this were placed back of, and touching it, its front edge would appear of the same length as the back of this, and its back edge shorter, while its ends would converge in a line with those of the first book (Fig. 65). This can be imagined as repeated infinitely, each book appearing smaller than the one before it,

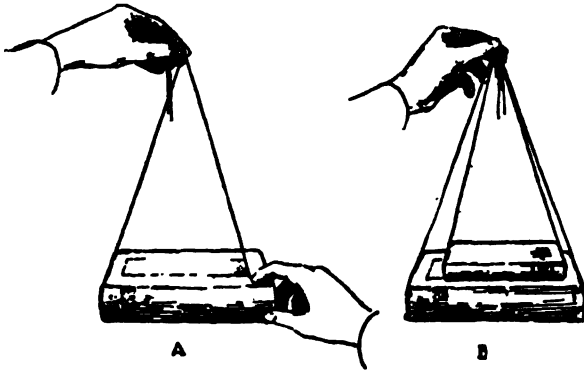


FIG. 64

and the cover ends all falling in the same converging lines, until a point would be all that could represent the last book.

The row of books might be said to *vanish in this point*, which is therefore called the *Vanishing Point of such lines as converge toward it*, as do the ends of the book cover. Vanishing Points, like the Level of the Eye, play a most important part in the study of perspective.




FIG. 65




FIG. 66

A familiar example of vanishing lines, as those which appear to vanish, or converge perspectively, are called, is found in a



## FREEHAND PERSPECTIVE

receding railroad track (Fig. 66). The ties appear shorter as they are successively farther from the eye; and the rails appear and converge, till the whole track, if it could be seen for a long enough distance, might seem to disappear, or vanish in a point.

## Chapter XIII

### DRAWING THE BOOK IN TWO POSITIONS

**T**HE student may copy this example, but in any case should place a book successively in these positions and draw from that; having it high enough or far enough from the eye, to see it in a normal position as explained on page 2. He should also make drawings from memory of a book in both positions, expressing them as artistically as possible.

In the first position on this sheet, the eye level falls off the paper; and may be marked for use on a piece of paper fastened to the drawing (Fig. 68). See that the table line is high enough on the paper to clear the lower back corners of the book.

It will be observed that the back of the book is not quite flat

but slightly curved — a modification of the cylinder. This will be understood by holding the cylinder horizontally (Fig. 69).




FIG. 67

## FREEHAND PERSPECTIVE

The curve opposite the eye is seen as a straight line, since it coincides with (or lies in a plane passing through) the direction of seeing. The farther these lines are from coinciding with this direction (in this case to right and left) the more apparent is their curvature.




FIG. 68

where the book rests on the horizontal table (Fig. 68), are in a straight line that is parallel to the picture plane, and therefore drawn in its true direction, which is horizontal. Observe the projection of the covers beyond the leaves, and that it extends backward at D and E. The thickness of the covers must be recognized, though the wearing off of the edges and corners may obliterate their sharpness. Since the right and left corners of the book are equally distant from the eye care must be taken that the covers are drawn of equal width. The clasps must be long enough to allow of their being fastened when the book is closed. Their ends are in a line converging to VP.




FIG. 69

The table line, being a subordinate element, should be so placed that most of its length is covered. Avoid anything which would tend to emphasize it, as making it coincide with the back corners of the book.

<sup>1</sup> Used as an abbreviation for the vanishing point.

## Chapter XIV

### THE BOOK WITH A CYLINDRICAL OBJECT

**T**HIS exercise (Fig. 70) combines a book in one of the two positions previously studied with a cylindrical object. The student may draw this example or not, according to his proficiency; but should compose and sketch a similar group, arranging and making trial sketches of several


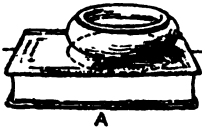


FIG. 70

compositions. Observe that the extreme points of the book must be equidistant from the eye, as in Chapters XII and XIII. But as soon as we place another object with the book, the two must be considered *together* as forming one group or picture.

## FREEHAND PERSPECTIVE

This brings us to reflect that whatever the number of objects we include in our picture, it is always drawn *with the eye directly opposite the picture as a whole*, so that the center of seeing is *in the middle of the group from side to side*. We also recall that the picture plane is *always at right angles* (viewed from above) *to the direction of seeing*. So, if the cylindrical object is placed on, or in front of the book (as in Figs. 70 and 71), the central direction of seeing the picture is not changed; and the picture plane continues parallel to one set of lines in the book as in the preceding exercise with the book alone. (See plan, Fig. 71.)



A

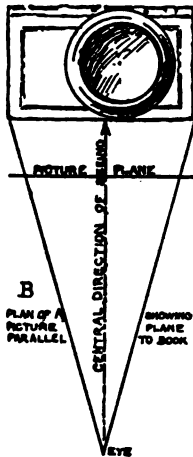


Fig. 71

If, on the other hand, the cylindrical object is placed at the side and the picture thus enlarged *in one direction only* (Fig. 72), the direction of seeing is immediately thereby moved to correspond, and the picture plane moves with it. The book will cease to be equidistant at its ends from the picture plane and cannot be drawn as previously studied. This subject is considered more fully in Chapters XXXIV and XLI.

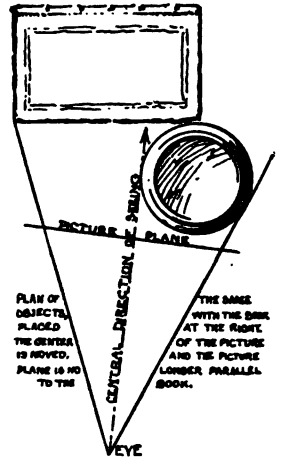


Fig. 72

It would of course be possible to add objects to the book equally at both sides (as in Fig. 73), but danger of stiffness in such an arrangement must then be remedied by some such device as the string of beads, making a more complicated study than is desirable at present.



Fig. 73

For this exercise, therefore, place the cylindrical object somewhere within the extreme points from side to side of the book.

It will be observed that a cylindrical object is always placed so

## THE BOOK WITH A CYLINDRICAL OBJECT

that a part of its base is seen, if only a very small part. For this reason, it is not put behind the book unless the foot can be left partly visible. The reason for this precaution is the uncertain effect produced by a study in which it is not observed.

## Chapter XV

### A PROBLEM FOR ORIGINAL STUDY — THE CYLINDER AND RECTANGULAR BLOCK

FOR general directions see Chapter XI.

**The Models.** — The rectangular block is 4" square by 8" long. It may be made of cardboard, cut as in the diagram (Fig. 74), and glued,<sup>1</sup> like the cube in Chapter XVI. Or two cubes, made as there directed, may be used in its place. The cylinder is 4" by 8", and has a circle about its middle.

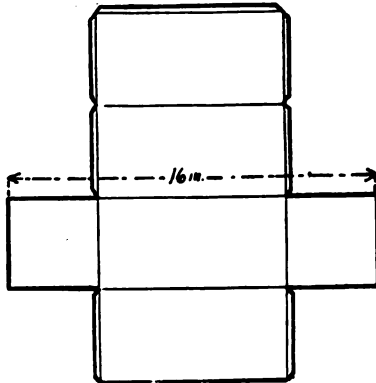


FIG. 74

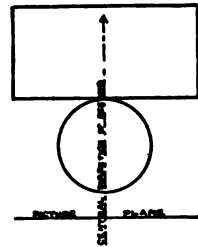


FIG. 75

**Positions.** — The block lies on one long face, its long edges parallel with the picture plane. The cylinder stands on one base in front of the block, touching it at its middle (Fig. 75). The models rest on a surface three times the height of the block below the eye, and are four feet distant.

<sup>1</sup> The light lines indicate where it is scored and bent for the edges of the block. The quarter-inch projections are laps for fastening.

## Chapter XVI

### THE FURTHER STUDY OF STRAIGHT-LINE OBJECTS—A CUBE AT ANGLES WITH THE PICTURE PLANE

**T**HE Model. — For this study make a cube, four inches on a side, from cardboard cut as in the illustration (A, Fig. 76). Pass a string under one edge and out of adjacent corners (B, Fig. 76) before glueing together.

**Study of the Subject.** — Turn the cube so the string comes from the upper front corners, and place it as the book was placed in Chapter XII (Fig. 77). Now, holding a front corner of the cube firmly, revolve the cube on that corner, bringing the side  $x$  into sight (Fig. 78). The moment the cube begins to revolve, the front,  $y$ , begins to be turned away, ceasing to be parallel with the picture plane, and tending toward coinciding with the direction of seeing. In proportion as it is turned away, its right edge (H) becomes shorter, so that its upper and lower edges (E and F) appear to converge. The cube may be revolved until these edges (and their parallel, D) in their turn converge directly in front (Fig. 79), as A and B did at first. Then the side  $x$ , becoming parallel with the picture plane, will in turn be seen in its true shape, while its top and bottom edges appear horizontal.

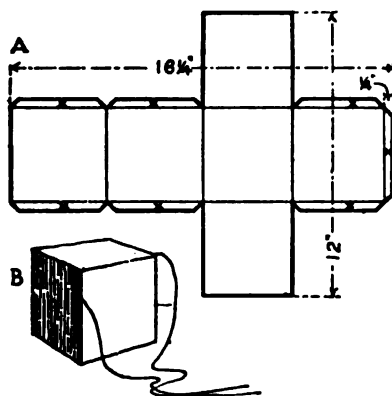


FIG. 76

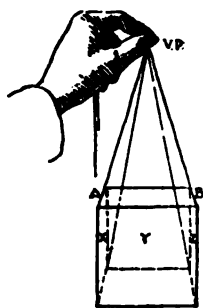


FIG. 77

at first. Then the side  $x$ , becoming parallel with the picture plane, will in turn be seen in its true shape, while its top and bottom edges appear horizontal.



## FREEHAND PERSPECTIVE

Now turn the cube slowly back to the position of Fig. 78, and with the strings find the converging point of A and B.

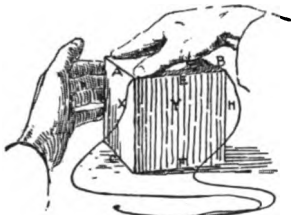


FIG. 78

Figure 80 shows the cube in this position, and the vanishing of A, B, and C by the use of three strings. The lines at right angles to them, which in Fig. 79 vanished directly in front, here (in Fig. 80) vanish so far to the right that the strings cannot reach their vanishing point.

If the cube is now revolved in the opposite direction, this vanishing point (which we may call VP<sup>2</sup>) again moves inward, as seen in Fig. 81.

It will be now readily seen that though any set of parallel horizontal lines (as A, B, and C) are directed more to the right or left, according as the cube is turned,

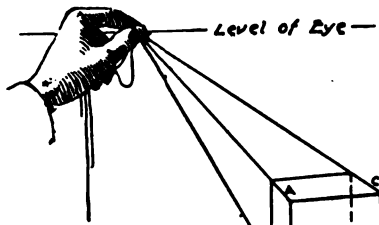


FIG. 80

they are never actually raised or lowered. Hence their vanishing point does not move up or down, but is always found on the eye level. We may therefore conclude that *receding horizontal lines always vanish in the eye level.*

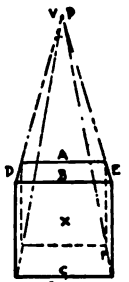


FIG. 79

We also confirm what was observed in Chapter XII, that *parallel lines vanish to the same point.*

Let us now study the effect on the shape of its faces of revolving the cube. In Figure 77 the front face, *y*, appears in its true shape, while lines at right angles to this face (as A and B) vanish directly in front, and the sides *x* and *y* are invisible. As the cube is revolved

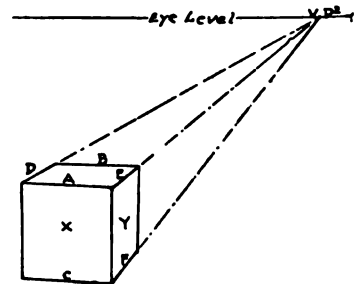


FIG. 81

(Fig. 78) so that *x* comes into sight, so *y* is turned away, or

<sup>1</sup> In distinction to that already found. Vanishing points are numbered in order of finding.

## STUDY OF STRAIGHT-LINE OBJECTS, ETC.

foreshortened. As  $x$  widens, and its horizontal edges (A and B) grow less steep, the other side narrows, and its horizontal edges (E and F) become more steep. *Steepness of the horizontal edges, therefore, goes with foreshortened surfaces.* Good judgment on this point is very important, as the cube is the basis for later estimates of foreshortened surfaces. For this reason much space has been given to its study. It should be drawn with great care till thoroughly mastered.

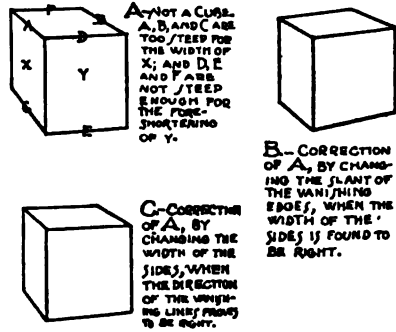


FIG. 82

**The Recession of Horizontal Surfaces Toward the Eye Level.** — It will be interesting here to place several cubes in a receding row, and see how the vanishing lines, being all included in one or the other of two sets, will vanish accordingly to one or the other of two vanishing points. Taking out every second cube (Fig. 83), we find the vanishing of those left to be unaltered. We also perceive that the table on which all rest seems to rise as it recedes, apparently tending to vanish or merge itself in the line marking the eye level.

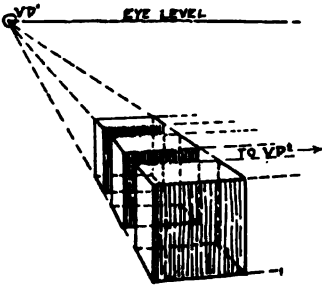


FIG. 83

Looking at the tops of the cubes, all situated in one horizontal plane, and recalling the horizontal surfaces in previous drawings (as the book covers and the cylinder ends) we conclude that *all horizontal surfaces appear to approach the level of the eye as they recede.* This is seen to be true whether they are below the eye or above it. The vertical distance between receding horizontal planes must appear less as it is farther from the eye, till at an infinite distance it would be entirely lost, and the parallel planes would vanish in a line (the eye level) as parallel lines vanish in a point.

## FREEHAND PERSPECTIVE

**The Eye Level.** — The eye level, or level of the eye, is not *actually* a line; but a height, or invisible horizontal plane, which may be said to extend indefinitely. Thus if the student's eye is five feet above the ground, his eye level passes through and includes every point at that height. But as each one's eye level is "edge to" him, it would (if visible) always appear *to him* as a line, hence it is always drawn as a line.

## Chapter XVII

### THE CUBE IN TWO DIFFERENT POSITIONS

**T**HIS exercise should first be drawn from the objects, and then from memory, according to the general directions for memory work (Ch. XI). Two drawings on one sheet, showing the cube in different positions, are to be made. They should be represented as of the same size, which may be

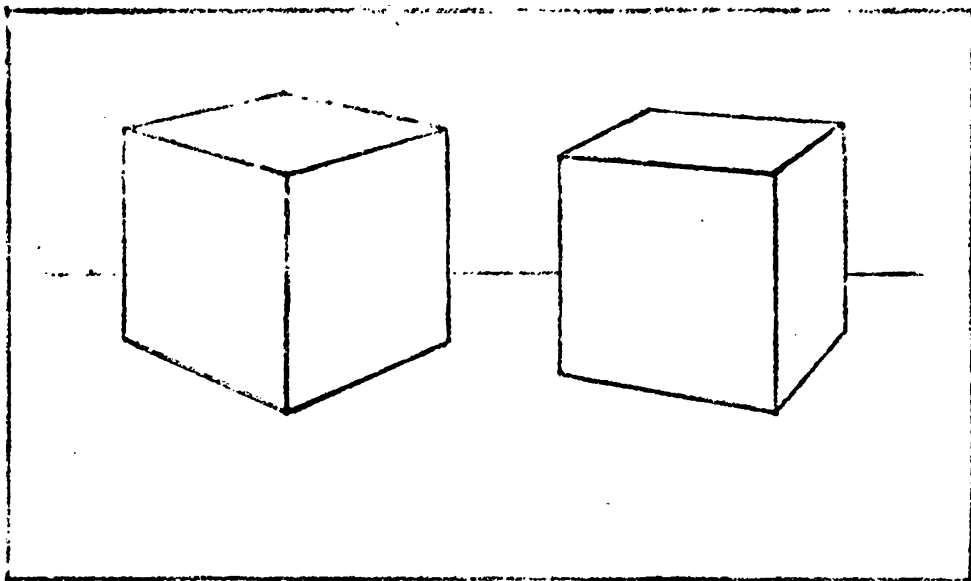


FIG. 84

done by making their nearest vertical edges of the same length and at the same height on the paper, and using the same eye level for both.

**Position of Models.**—For the first drawing, place the cardboard cube so that its front faces are equally turned away, or make angles of forty-five degrees with the picture plane (A in

## FREEHAND PERSPECTIVE

Fig. 85, also plan). Notice that its upper back corner will then appear exactly behind the upper front one, the vertical sides

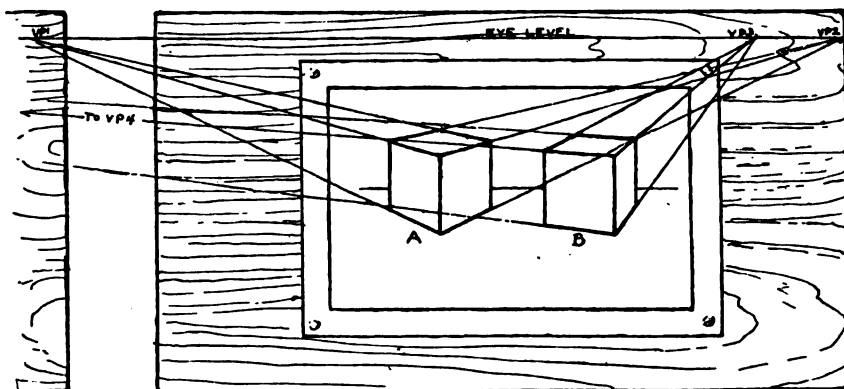


FIG. 85

of equal width and the side corners opposite each other and equidistant from the center. In the second position the cube is turned so its right face makes an angle of sixty degrees with the picture plane (B in Figs. 85 and 86).

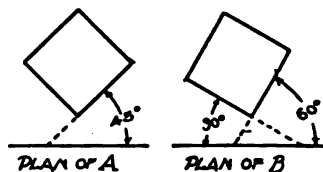


FIG. 86

**Making the Drawing.** — Fasten the paper in its place on the desk or have its position so marked that it can be accurately returned to the same place. Draw the margin lines and lightly mark the extreme points for the two cubes (Ch. IV). Note that

DIAGRAM  
SHOWING A  
CONVENIENT  
ORDER FOR  
DRAWING THE  
LINES OF THE  
CUBE, AND OF  
RECTANGULAR  
OBJECTS IN GENERAL.

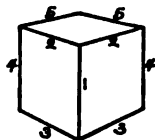


FIG. 87

in the first position (A, Fig. 85) the cube occupies slightly more space, both horizontally and vertically. Since the cube is a type solid the lines in its final rendering are simple and firm, only varying slightly in thickness to suggest distance. Begin the first cube with the easiest part, which is its nearest vertical edge. This is parallel with the picture plane, and so is drawn in its true position. As soon as this line is placed mark the eye level (in this case it falls off the paper) finding its height as directed for the book. The numbers on the diagram (Fig. 87)

## THE CUBE IN TWO DIFFERENT POSITIONS

give the order in which not only cubes, but rectangular objects generally, should be drawn. Get the direction of lines 2, 2 by pencil measurement (Ch. II) with especial care, as their meeting with the eye level determines the vanishing points. Hold the pencil vertically in front of, or even touching the nearest end of line 2 (Fig. 88). Then keeping




FIG. 89

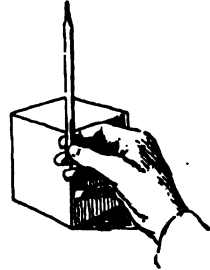




FIG. 88

it parallel with the picture plane (that is, *not* receding as the line does, but resting in an imaginary vertical plane) revolve it downward to the right until it seems to cover line 2 (Fig. 89). Holding it thus, with the other hand

slip the paper (on which the drawing has been started) up vertically behind it till the pencil touches the upper end of the vertical line already drawn,



A



B

FIG. 91

and lies on the paper, showing

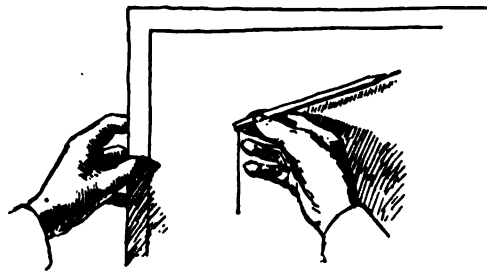


FIG. 90

the direction line 2 should take (Fig. 90).

(This puts the paper in the position of the picture plane.) Draw this first line 2, and mark its vanishing point on the eye level (VP1). The direction of the other line 2 could be found in the same way but as in this case they make equal angles with the picture plane, their vanishing points will be equidistant from the center,

and VP2 can therefore be so located, and the second line 2 drawn to it. Lines 3, 3 are then drawn (recalling that *parallel lines converge to the same vanishing point*).

For lines 4, 4 compare the apparent width of a near vertical face (A in Fig. 91) with the front vertical line (B in Fig. 91).

## FREEHAND PERSPECTIVE

(This front line, being seen in its actual position and unforeshortened, is the best for use as a unit of measurement.) Mark to right and left from line 1 in the drawing the proportionate distance so found (in this case two thirds of line 1) and draw lines 4, 4. From their upper extremities draw lines 5, 5 to their respective vanishing points.



FIG. 92

For the second drawing place the cube as directed, and proceed as with the first cube. In this case VP2 falls so far away that it cannot be shown in the illustration (B, Fig. 85). But we know that it must fall somewhere in the eye level. (It will be so found in the

illustration, if tested.) At this stage a string pinned to VP4 will aid in detecting errors of vanishing, and will also make real the fact that these lines must vanish *precisely to their own vanishing point*.

**A Valuable Testing Method.** — After this the following far more speedy and convenient method of testing should be acquired: With one eye closed hold the drawing close to the eye level, and turn it so that one set of vanishing lines are directed to the open eye (Fig. 92). Push the drawing back or forward as needed till the eye occupies the place of the vanishing point for the lines in question. Now sight back over this set of converging lines, when it will be found that any failing to properly vanish are quickly seen and easily noted for correction. A little expe-

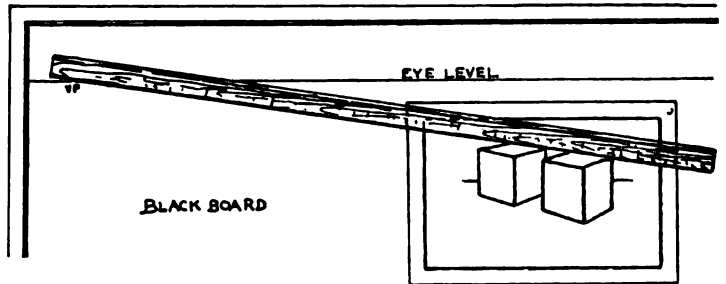


FIG. 93

## THE CUBE IN TWO DIFFERENT POSITIONS

rience is needed to do this successfully, but it is well worth the trouble.

**Testing Before a Class.** — An impressive method of demonstrating the vanishing of lines when teaching a class is the following. Draw a long horizontal line on the blackboard and mark it "Eye Level." Tack each pupil's drawing in turn on the blackboard so that the blackboard eye level coincides with the eye level of the pupil's drawing. With a long ruler follow out one of the vanishing lines (Fig. 93), and find its vanishing point on the blackboard eye level. Holding the ruler at this vanishing point as a pivot, swing it over the other lines of the set that should vanish to that point. The test is convincing, even to children; and helps greatly to form a standard of accuracy.

It should always be remembered, however, that such measuring is *only for testing*, never for *drawing* the lines.



## Chapter XVIII

### A BOOK AT ANGLES TO THE PICTURE PLANE

**T**HE student may copy this example but must in any case draw from a book similarly placed; and finally make a correct and spirited drawing of the same from memory.

The position of this book is like that of the last cube (Ch. XVII). In studying this position begin with the book directly in

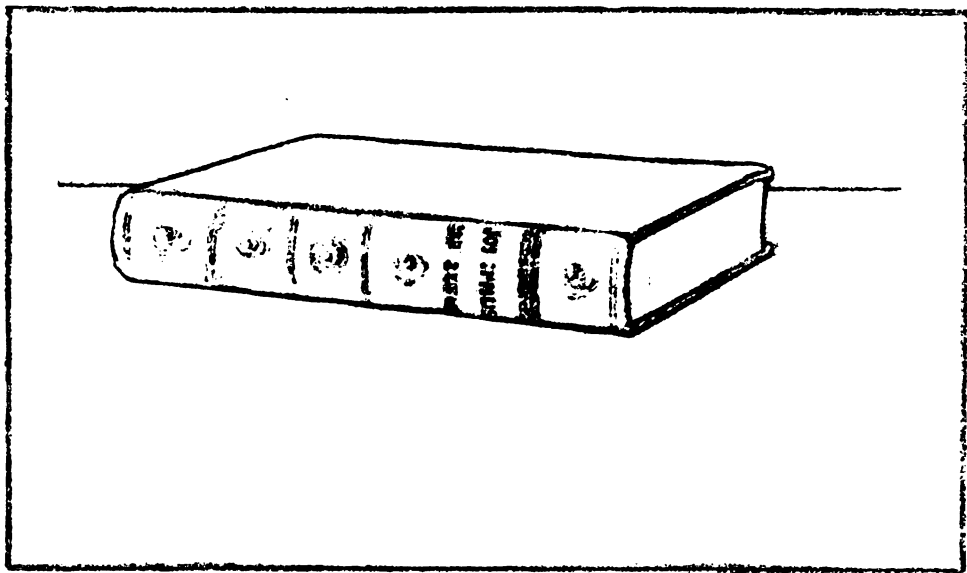


FIG. 94

front as in Chapter XII. Note the convergence of its ends; then turning it slowly into the required position for drawing (Figs. 94 and 95), observe how the ends change in their convergence and how their vanishing point moves to the right on the eye level as the book is turned. Look also at the long edges of the book and see how, at the first movement of revolving it, they

## A BOOK AT ANGLES TO PICTURE PLANE

cease to appear horizontal, and vanish toward a point which, though at first infinitely distant, must nevertheless fall on the eye level.

**Drawing the Book.** — Sketch the margin lines, and plan a good position of the book in relation to the inclosed space. Mark the height of the eye level as soon as a dimension (as  $xy$ , Fig. 95) by

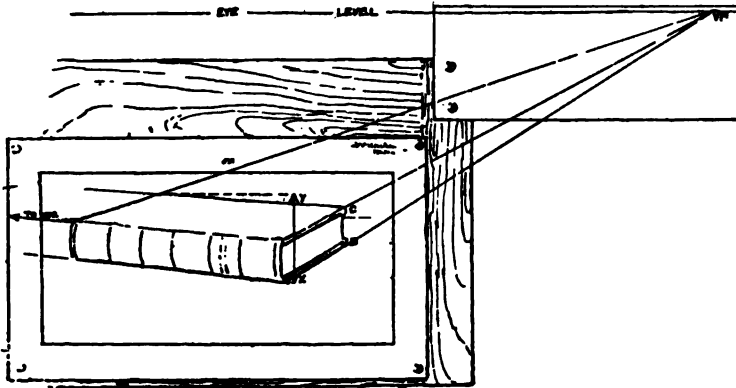


FIG. 95

which it can be estimated is decided on. Find the direction of the book edges (corresponding to lines 2, 2 in the cube in Ch. XVI) with especial care. Sketch in the book with delicate lines, proceeding in the order observed when drawing the cube, and correcting where necessary.

**Artistic Expression.** — Finally, the subject should be rendered artistically. To accomplish this, the line is adapted to the quality of that portion on which it is used. Certain features may be selected for use to augment interest; as the curving ridges, the ornament, and the title space on the back, or even the worn corners. But having expressed in these details the point intended (as a worn corner by the shape of its boundary line) take care to do no more. It is wearisome, for instance, to see lines on these corners to represent the separation into layers caused by wear. Lines also produce a dark color, while worn corners are generally light; and are also undesirable places for the use of dark spots.

## FREEHAND PERSPECTIVE

As the vertical edges of the cube are drawn vertical because parallel with the picture plane, so the corners of the book must be made vertical in the drawing, as they are in reality. For instance, points C and D being in a vertical line, must be so placed in the drawing. The same is true of the curves on the back of the book.

At this point the student readily sees that *all vertical lines* (since the picture plane is vertical) *will be parallel to the picture plane, and must invariably be drawn as they actually are, or vertical.*

## Chapter XIX

### TWO BOOKS AT DIFFERENT ANGLES TO THE PICTURE PLANE

**B**EGIN the study of this subject by placing the books as in Fig. 97. Observe that in this position there is but one vanishing point for the two objects, the ends of




FIG. 96

the books being all parallel, and their other horizontal edges parallel with the picture plane. Now turn the whole group, as in Fig. 98, and see that we have two vanishing points,

## FREEHAND PERSPECTIVE

one for the ends and the other for the long edges of the books.

Now revolve the upper book a little more (Fig. 99), so that its horizontal edges cease to be parallel to those of the other, and it will have its own points of convergence (VP3 and VP4). Its length appears lessened, and its ends longer, for this

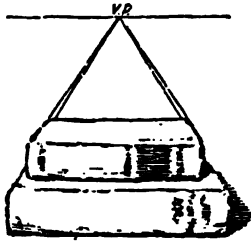


FIG. 97

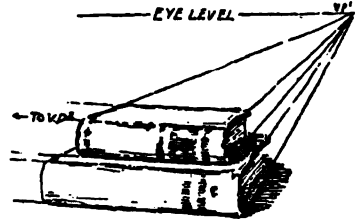


FIG. 98

change. The shortened edges vanish more steeply, and those which have become longer appear less steep. We find, as would be expected, that *when lines cease to be parallel, their vanishing points are different.*

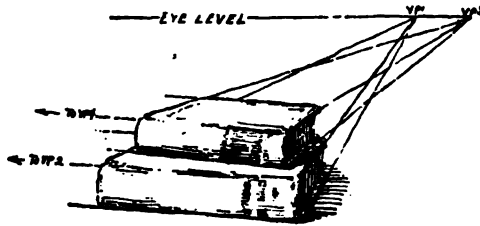


FIG. 99

## Chapter XX

### THE ACTUAL CENTER OF THE CIRCLE AND MEASUREMENT INTO THE PICTURE BY PARALLEL LINES

**P**RELIMINARY Study. — Does the eye see half way round the cylinder? The question is best answered by experiment.

Holding the cylinder vertically and rather near (to more easily see the facts), mark on it the points where the side boundaries appear to meet the top (A and B in Fig. 101). It will

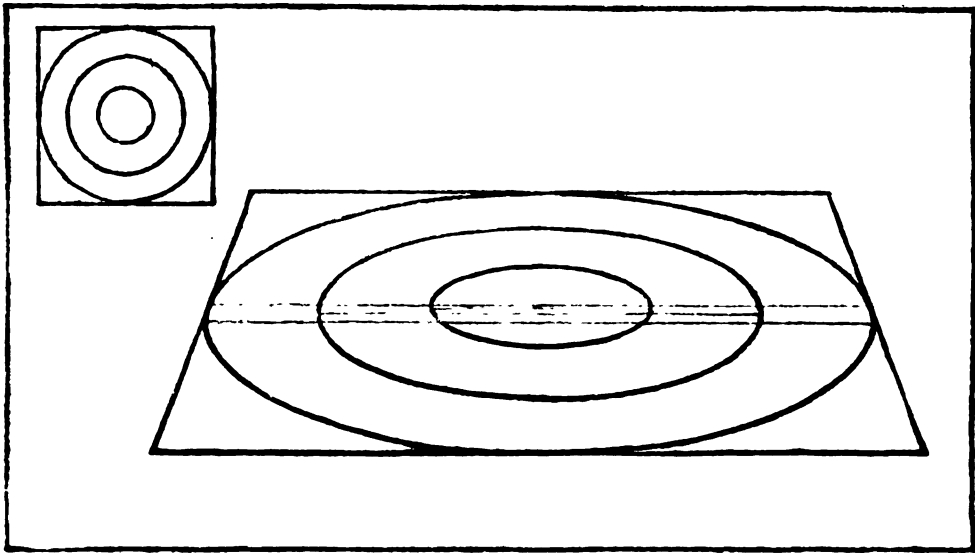



FIG. 100

be found that they are actually less than half way from the front to the back (Fig. 102). Yet the pencil has marked what the eye saw as the greatest dimension. As shown in Fig. 103. this apparent greatest dimension (A B) forms the long diameter of the ellipse

## FREEHAND PERSPECTIVE

in the perspective view. It is evident, therefore, that *the eye does not see half way round the cylinder*, and (as seen in Ch. IV) that the long diameter of the ellipse is not an *actual* diameter of the circle, while that portion of the circumference beyond the long diameter (A B) is actually more than half of the circle, the part in front of A B appearing equal to it only because nearer to the eye.



SHOWING APPARENT MIDDLE FROM  
FRONT TO BACK, OR LONG DIAMETER

FIG. 101

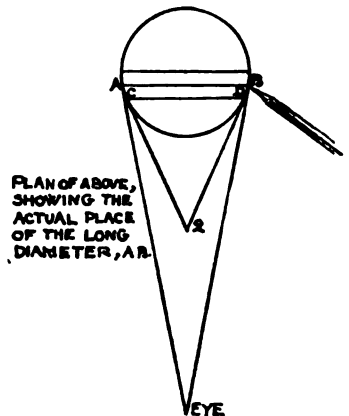
*The actual position of the apparent greatest dimension (the long diameter) changes with the position of the observer.*

The plan (Fig. 102) shows that C D would appear as the greatest dimension if the eye should be at 2. This also may be seen by experiment (as in Fig. 101).

**Planning the Exercise.** — In placing this exercise observe that the perspective of the concentric square and circles is made much larger than the geometric diagram, to show more clearly the perspective details.

**Drawing the Circles.** — When the square has been drawn in perspective (like the top of the cube in Fig. 77) its actual center (*o* in Fig. 103) is found at the crossing of its diagonals, as in the geometric diagram above. In the diagram the ends of its diameters mark the points (C, D, E, and F) where the circle touches the square, and they will do the same in the perspective.

The diameters pass through the true center and one is parallel to the picture plane. It can therefore be drawn in the perspective in its actual direction, giving two points (*c* and *d*). The other diameter, being parallel with the receding sides of the square, vanishes with them in the eye level directly in front (at VP1) giving points *e* and *f*. Now, though the actual



PLAN OF ABOVE,  
SHOWING THE  
ACTUAL PLACE  
OF THE LONG  
DIAMETER, A B.

FIG. 102

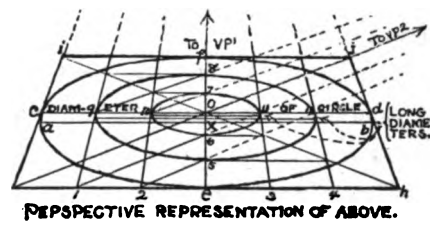
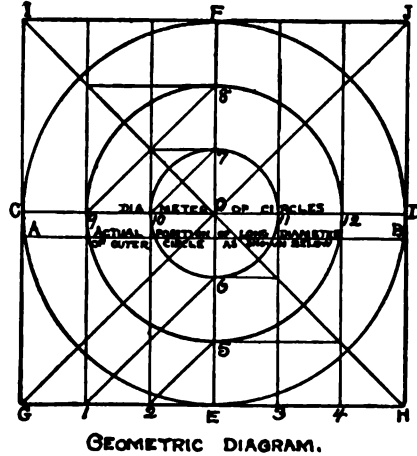
## ACTUAL CENTER OF CIRCLE, ETC.

diameter of the circle touches the square in  $c$  and  $d$ , the ellipse *appears* longest at a part nearer than  $c$  and  $d$ , which seems to be exactly half way between  $e$  and  $f$ . Through this half-way point ( $x$ ) the long diameter can be drawn; making it longer than  $c-d$ , and yet not quite touching the square. The ellipse is then easily sketched through these six points ( $a$ ,  $b$ ,  $c$ ,  $d$ ,  $e$ , and  $f$ ), making it symmetrical on  $a-b$  and  $e-f$ .

For the other ellipses the points where they cross the actual diameter of the circle ( $c-d$ ) are marked by lines from 1, 2, 3, and 4 which vanish in VP1, giving four points (9, 10, 11 and 12), two for each of the smaller ellipses.

**Measuring Distances into the Picture.** — For the front and back points of these ellipses, line  $ef$  must be divided into six *perspectively* equal parts, as  $EF$  in the diagram is divided into six *actually*

equal parts. This can be done, and in practice usually is done, by the eye (as for the cylinder in Ch. IV), noting that the true center ( $o$ ), already known, is one point of division. But the use of the diagonal for such distances is simple and often a convenience. Thus it is easy to see that in the diagram the vertical lines from 1, 2, 3, and 4 cut the diagonals proportionately to the divisions on  $GH^1$  in this case into six equal parts. These divisions can in turn be transferred to  $EF$  by horizontal lines from the points on the diagonal  $HI$ , giving 5, 6, 7, and 8, the four



<sup>1</sup> Students of geometry will recognize in this the problem of dividing a line proportionately by means of parallel lines crossing a triangle.

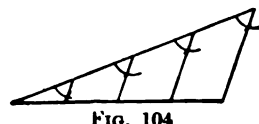


Fig. 104



## FREEHAND PERSPECTIVE

points needed. In the perspective the method is the same, using lines *perspectively* parallel to *e-f*—that is, the lines already drawn from 1, 2, 3, and 4 to VP1. This use of the diagonal occurs further on, as for the steps in Chapter XXII.

**A Second Method.**—The vanishing point of the diagonal can also be used to obtain these points. Thus the diagram shows that lines from 1, 2, 9, and 10 parallel with the diagonal GJ will mark on EF the same divisions. In the perspective these lines will appear *perspectively* parallel to the diagonal—that is, drawn to the same vanishing point. Since they are horizontal, that vanishing point will be on the eye level. Therefore the diagonal GJ can be carried out to the eye level to find its vanishing point (VP2) to which the parallel lines are drawn.

The principle to be remembered for use is: *Whatever measurements can be obtained geometrically by the use of actually parallel lines, can be obtained in perspective by the use of perspectively parallel lines.*

It must, however, be noted that these are only *relative* measurements. A first distance into the picture—the foreshortened width of the square in this case—is determined freehand by past experience (as with the cube). Mechanical perspective gives methods of obtaining this first distance, the position of the eye and the picture plane being given. It can also be obtained from a side view, by using the same data. Both these methods are too complicated for common use in freehand work. Such proportions are so easily estimated by recalling the cube that it is better to rely on a trained judgment for them.

## Chapter XXI

### BOOKS WITH A CYLINDRICAL OBJECT

**T**HE student should take this exercise as previous ones, copying first if he needs to do so, then composing and sketching a similar study, and finally making a drawing



FIG. 105

from memory. For both of the latter several different arrangements of objects, with trial sketches, should be made; and the best chosen to use in the final drawing.

The Finder (Ch. VIII) should be used to compare the effect of different compositions, also the effect of cutting out

## FREEHAND PERSPECTIVE

compositions from larger ones by different margins. Note that in Fig. 106, with a tall object, the books are turned so that their horizontal dimensions are not great enough to neutralize the dominant vertical effect. In Fig. 107, on the other hand, the long horizontal dimensions of the books and the low flat dish harmonize very well, and this arrangement




FIG. 106




FIG. 107

necessitates a marginal rectangle longer from side to side. The books and dish alone make a good simple arrangement, but the tray may be added if desired.




FIG. 108

## Chapter XXII

### THE STUDY AND DRAWING OF A HOUSE

**M**ODEL for the Study.— Make an equilateral triangular prism from cardboard cut as in the diagram (Fig. 110), and place it on the top of two cubes. Put a box or




FIG. 109

books on the table under this model, raising it so that the level of the eye will fall one-fourth way up on the cubes (Fig. 111). Place the model about sixteen inches from the eye, and turn it so its long edges will make angles of thirty degrees with the picture plane (Fig. 119). It may now be regarded as the type form of a house, seen (in proportion to its size) from an ordinary posi-

## FREEHAND PERSPECTIVE

tion for viewing a house. By aid of the imagination, it may be regarded as a house of two stories, with a front door in the middle of a side, the box top taking the place of the ground.

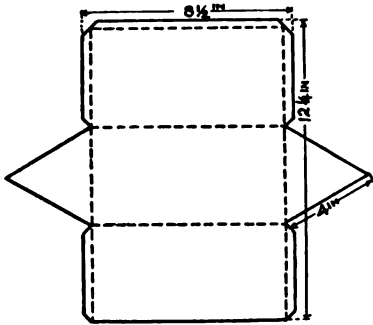


FIG. 110

level of the eye should be one-fourth way up the height of its rectangular part because the eyes of a person standing might be about five feet above the ground, and the height of a two-story house at its eaves about twenty feet. Mark the eye level on the paper therefore, one fourth of the height of the nearest edge from its bottom, and take the direction of lines A and B (Fig. 112)

to determine the two vanishing points, exactly as was done with lines 2, 2 in the cube (Ch. XVII) although, being above the eye, they appear to tend downward. Draw the two lower horizontal lines and the side vertical lines as those of the cube were drawn.

To construct the roof recall that the end of our model is an equilateral triangle (Fig. 113) with its apex over the center of the house end. Draw the diagonals of this square house end and carry up a vertical line of indefinite length from its center, on which the apex of the gable is to be marked. The actual roof height of our small model may be found by this diagram;

This exercise should be first drawn in thin, light lines, studying the diagrams, and following the directions. The construction lines should then be erased, and the drawing rendered as shown in Fig. 109.

**Drawing the Exercise.**— Begin with the nearest vertical edge of the house. The model was placed so that the

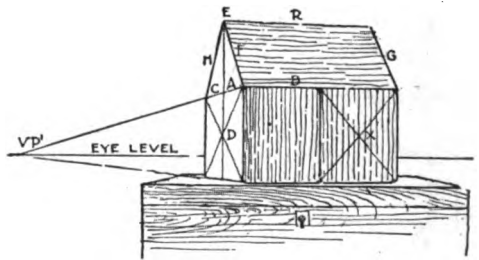


FIG. 111



## FREEHAND PERSPECTIVE

**Oblique Vanishing Lines.** — We have said little about the sloping end lines of the roof. But now, looking again at our model (Fig. 111), we see that the ridgepole, R, because it is farther away than the eaves, appears shorter, so that the slanting ends (F and G) of the front surface of the roof appear to converge upward. Turning to the drawing, we find in confirmation of this that (if the drawing has been carefully made) these lines do thus converge. Now let us search for the general truth governing that convergence. These slanting ends are not horizontal, so that we should not expect them to tend toward the eye level; and we observe that they do not. But they are actually parallel to each other and therefore must vanish or appear to converge to the same point. *How to find that point* is the question.

Put some books in the place of the house model, and arrange them so that their edges vanish like the house edges.

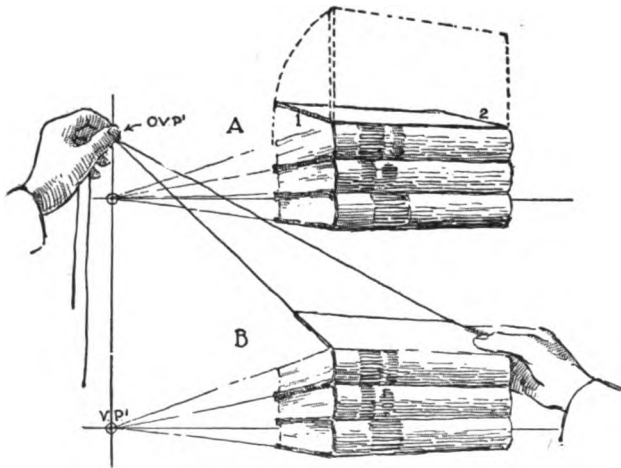


FIG. 114

the upper cover (A, Fig. 114), and observe that its ends 1 and 2, though still parallel with each other like the ends of the roof, have ceased to be parallel with the other book ends. They therefore no longer vanish toward VP1, but to a higher point. We have not, however, turned these

edges to right or left, but have simply lifted their farther ends or revolved them in parallel vertical planes. Therefore *their vanishing point cannot move to right or left; but as they are revolved, must appear to move directly upward, or in a vertical line passing through VP1.* This continues until the cover becomes

## THE STUDY AND DRAWING OF A HOUSE

vertical; when its ends appear in their true position and cease to vanish, like all vertical lines.

Place strings under the cover, as in Chapter XII. Holding the strings with the left hand as in the illustration (B in Fig. 114) raise the cover with the right (keeping the strings parallel to the picture plane). By this experiment their convergence toward a point in the vertical line from VP1 is more plainly shown. Since these slanting book ends are neither horizontal nor vertical but oblique to both directions, their vanishing point or that of any set of oblique lines, may be distinguished as an Oblique Vanishing Point, or OVP.

By revolving the upper cover farther, or opening the lower cover and using the string (A in Fig. 115), oblique vanishing points below the eye level may be determined. And the apparent direction of oblique lines can be found with the pencil exactly as that of any line (B in Fig. 115).

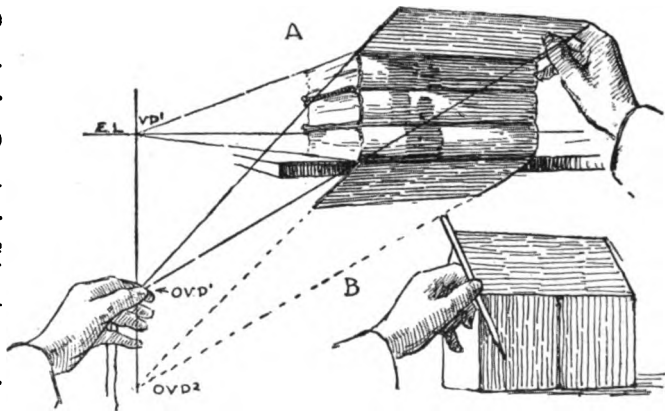


FIG. 115

### Vanishing Traces.

— By turning one of these illustrations around, to bring the eye level vertical, as in Fig. 116, it will be seen that the line containing OVP1 and OVP2 serves a purpose similar to that of the eye level. We note that *the surface formed by the visible ends of the books appears to recede, or vanishes, toward this line.* If a larger book be placed against the other ends, the surface of the larger book, being parallel to the visible ends of the other books, will be found to vanish toward the same line. It may be concluded that *all surfaces parallel to the book ends in this case will vanish in this line,*



## FREEHAND PERSPECTIVE

exactly as all horizontal surfaces appear to vanish toward the eye level. We may call this line a Vanishing Trace. The eye level is such a vanishing trace for all horizontal surfaces. See note, Chapter XI, in Solutions of Problems.

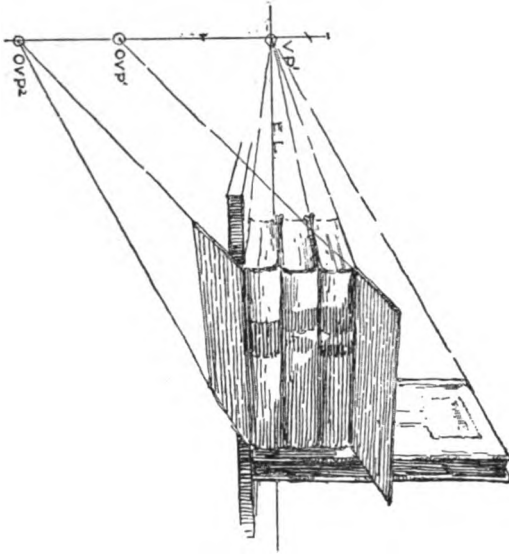


FIG. 116

First replacing the house model as in Fig. 111, we now turn to the drawing and test these oblique lines (F and G in Fig. 112). If correctly drawn they will be found to converge toward a point (OVP1) directly above VP1. At once use is made of this point for drawing the ends of the roof projection (suggested in the model by pinning cardboard as in Fig. 117). These edges are parallel

with the corresponding roof edges, like the book margins; so their width can be set off on the upper line of the house (B, Figs. 112 and 117) to right and left, (points x and y) remembering that the nearer distance appears a little greater. Through these points draw lines vanishing to OVP1. A similar projection is measured downward on a continuation of the oblique gable edge F beyond its lower end (z); and through this point a line parallel to B (that is, vanishing with it in VP2) forms the eaves. (The estimation of these last measurements by the eye forms an important part of the student's training and should be carefully thought out. Thus the eaves projection from line B forward is more foreshortened than the gable projection from F to the left; and distances should be set off accordingly.)

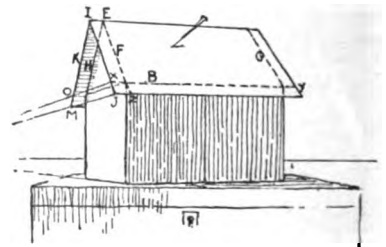


FIG. 117

# THE STUDY AND DRAWING OF A HOUSE

The lower oblique vanishing point (OVP2) is used for the projections on the back slope of the roof. Continue the back oblique roof edge (line H) to meet the vanishing trace through VP1, giving OVP2. Draw line K from the near end (I) of the ridgepole to OVP2, and cut it by a line from the nearest eaves corner to VP1. Where this line cuts the oblique edge K will be the eaves corner (M) for the far side of the roof; and a line from it to VP2 forms the eaves on that side.

There is another way of getting the projections on the further slope of the roof, which is useful in case OVP2 falls too far away to be conveniently used. Turning the model we see that the invisible line (L in back view, Fig. 118), if carried to the edge, ends in O, horizontally opposite x (end view). A line from x through O would therefore vanish in VP1.

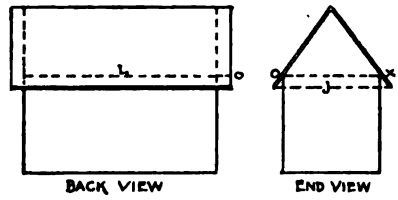


FIG. 118

Hence, to obtain O, line L is carried forward indefinitely, and cut by a line from x to VP1. The desired edge is then drawn from point I through O indefinitely, and cut by a line from J to VP1, giving the corner, M.

**The "L" Part of the House.**—The plan (Fig. 119) shows its position. Its width is marked off on the farther (invisible) end of the house, and it is drawn as was the main part of the house. Note the less steep slope of the porch roof (Fig. 112), so that its oblique lines are not parallel with those of the other roofs but have another vanishing point, OVP3, lower in the same vertical line.

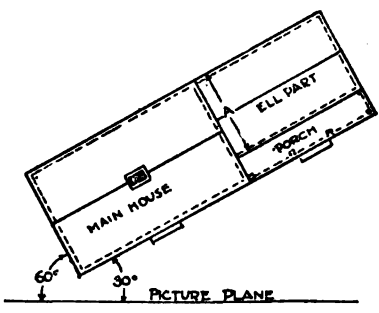


FIG. 119

**Windows and Doors.**—The windows and doors may be marked on the model (Fig. 120). It will be easily seen that their top and bottom edges are all parallel to the horizontal lines of the

## FREEHAND PERSPECTIVE

side on which they are located and therefore vanish to the same point. Mark their heights on the nearest vertical edge of the house, and draw lines (as P, in Fig. 112), thence to the vanishing points.

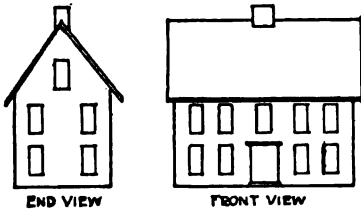


FIG. 120

On these lines their perspective widths are to be set off. Begin with the door. Find the middle of the house front by its diagonals, and make the near half of the door a little wider than the far one. Check this by seeing that the remaining

distances (from the door to the front corners of the house) are also *perspectively* equal, that is, the near one larger. Mark the sides of the windows in the same way. Remember that since the space between the near window and the near corner is considerably nearer to us than that between the far window and the far corner, more difference should be made in their size than between the halves of the door.

The width of the windows on the end of the house should be to that of the front ones as the right face of the second cube in Chapter XVII (Fig. 84) is to the right one. The height of the windows in the "L" is made the same perspectively by carrying their measurements from the right front corner of the main house on lines vanishing to VP1. These lines lie on the invisible end of the main house, and from where they reach the "L" are continued along its front by lines running to VP2.

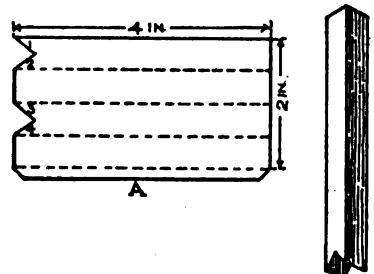


FIG. 121

**The Chimney.** — To better visualize this part of the house, cut and fold cardboard as in Fig. 121. Get the slope of lines 1, 2, 3, and 4 by laying the cardboard against the apex of the gable and marking around it. Stand this model on the roof in its middle, and after marking on the roof around it, cut out the space so marked and push the chimney down through the open-

## THE STUDY AND DRAWING OF A HOUSE

ing until it projects the proper distance above the roof. Lay a pencil on the roof against the chimney (Fig. 122), and move it to the left without changing its direction till it coincides with the gable edge. This shows the gable edge and the oblique line where the chimney passes through the roof to be actually parallel. This oblique line, therefore, has the same vanishing point as that of the gable line, which is OVP1. The top of the chimney front and the line below it (AB, Fig. 123) are parallel to the eaves and ridgepole. Turn the model (Fig. 120, end view) and see that the top edge of the chimney is parallel with the horizontal lines on the house end, which we have already drawn to

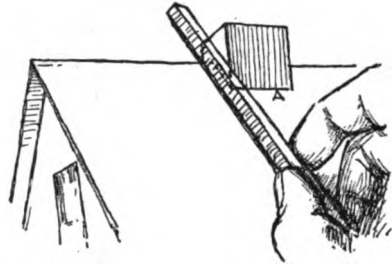


FIG. 122

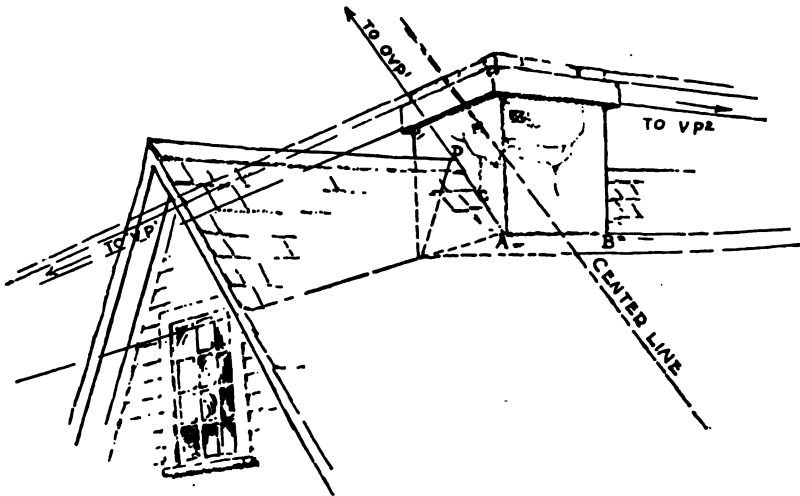


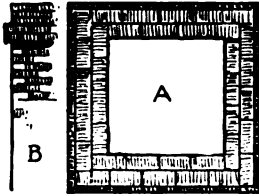
FIG. 123

VP1. A pencil held horizontally and moved slowly up in front of the model will help to see this as will marking the chimney in the model off into bricks (Fig. 124).

**Drawing the Chimney.**— Continue on the roof the center line used for the door (that is, vanish a line from its top to OVP1),

## FREEHAND PERSPECTIVE

and mark down from the ridgepole on this line half the thickness of the chimney (judged by the eye). Draw a line through this point toward VP2, and on it set off to right and left perspectively equal distances for the breadth of the chimney (AB). Draw



A- PLAN OF CHIMNEY.  
B- PROFILE SHOWING ORNAMENTAL BAND AT TOP.

FIG. 124

line C to OVP1. Where it crosses the ridgepole (D) is the middle of the chimney from front to back. Make the far half of the chimney proportionately as much smaller than the near half as the far half of the house end is smaller than its near half.

The projecting band at the top of the chimney is shown in plan and profile in Fig. 124. Its perspective is drawn as are projecting book covers. Be careful to represent the backward projection on the farther side.

**The Steps.**— For these the detail drawing (Fig. 125) is first made. The height under the threshold of the door is a little less than two feet, or about one third of the height of the eye—enough for three steps. Divide the vertical line under the near edge of the door therefore into three equal parts, and draw lines of indefinite length to VP1 through the four points of division. On the lower line, B, mark off the proper distance (as four feet), which

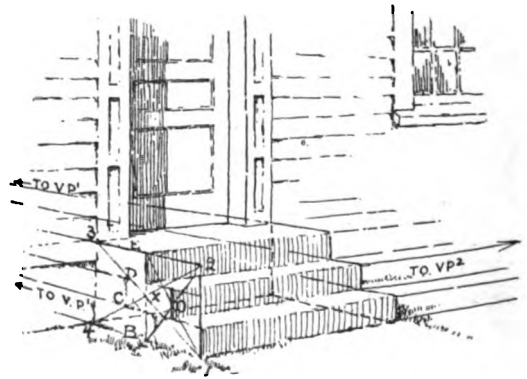


FIG. 125

may be estimated by comparison with the windows on the end of the house (their width being parallel with these lines, and usually about three feet). Divide this distance into perspective halves. A vertical line from the near end of line B, cutting line E in Point 2, completes the rectangle, 1-2-3-4, the middle of which can be found by its diagonals, giving the perspective

# THE STUDY AND DRAWING OF A HOUSE

halves required. (See A, Fig. 126.) The further half is for the wide top step. The near half of the rectangle can be divided again in the same way for the two lower steps. Where the vertical line from the near end of B cuts line C is the upper near corner of the lower step. A vertical line through O will mark its width on C, and continued to cut D forms the nearest front corner of the second step.

Another method of sketching the steps is shown in Fig. 126. When the first step has been drawn its diagonal is continued through 6, cutting line D in 7, and forming the diagonal for the second step, which is completed by continuing line D to cut a vertical from 6 in 8. This can be continued for as many steps as needed. The diagonal can also be used as a test for steps drawn by the first method.

The long edges of the steps vanish in VP2, and are cut alternately by lines vanishing in VP1 and vertical lines.

**The Dormer Window.**— This is constructed in principle like the gable of the roof. The detail drawing (Fig. 127) should be carefully studied, and drawn separately if desired, before sketching the window on the house.

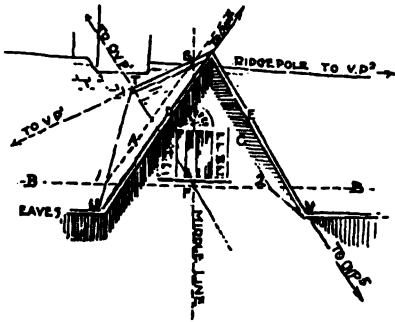


FIG. 127

On the center vertical line of the house front continued upward, mark the height of the dormer from line B. (In this case it is not so high as the main house.) Through this point (S) the dormer ridgepole is drawn to VP1, and cut by the oblique middle line on the roof (in point T). The width (1-2) of the dormer is then marked perspectively to right and left on line B. Through these points (1 and 2) the "valleys," or meeting lines of the dormer with the main roof, are drawn from the roof end (T) of the dormer ridgepole to the edge of the eaves (points

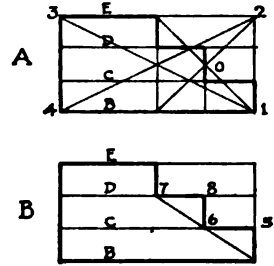


FIG. 126

## FREEHAND PERSPECTIVE

U and V). From these points the edges of the dormer roof projection run parallel respectively to A and C.

**Oblique Lines in the Dormer.**—These two lines A and C, though oblique to line B, are in the same vertical plane (as the gable lines F and H in the main house are in the same plane with line A in Figs. 111 and 112). Therefore draw a second vanishing trace for oblique lines vertically through VP2, and continue A upward until it cuts this trace in OVP4, to which draw the edge D. The other oblique edge (E) vanishes in the same vertical below VP2.

When experience has been acquired, such oblique lines can be satisfactorily drawn without actually finding their vanishing points. Such convergences are generally estimated in practical work. But estimates are much more valuable when made with a knowledge of methods by which they can be definitely determined.

## Chapter XXIII

### A BUILDING FROM THE PHOTOGRAPH OR A PRINT

**T**HE example given in Fig. 128 is from the old church of San' Apollinare in Classe, near Ravenna.

The beginner may draw this as a preparation for his




FIG. 128

next work, which should be the drawing of a building or part of one from a print of his own selection.

**Making a Selection.**—This choice should be carefully made, care being taken to secure unity, or an appearance of one whole



## FREEHAND PERSPECTIVE

thing having a center of interest and parts which are subordinated, or catch the eye less quickly. It should be well placed in its rectangle (Chs. VIII and XXI). For instance, the tall tower in Fig. 129 needs a margin that is longest vertically, and quite narrow, to produce a harmony of lines. The smaller buildings with it give variety, and by a contrast which is not too great emphasize its height, being subordinated that the tower may remain prominent in the composition.



FIG. 129

In Fig. 130, on the other hand, the long, low mass of farm buildings set well back into the picture re-



FIG. 130

quires a rectangle that is longer horizontally.

Some of the different selections that may be made from one print (Fig. 131) are shown in Fig. 132. The beginner can by such means obtain an example simple enough to be within his powers and often a better composition.




FIG. 131

**Drawing from the Print.**  
—As soon as the place of the building on the paper is fixed, *the level of the eye must be deter-*

*mined and marked, and the vanishing points of the principal sets*

## BUILDING FROM PHOTOGRAPH, ETC.

of horizontal lines *must be found on that*. It is of course easier for the beginner to use such vanishing points as are near enough to be marked. But the student must fully understand that a point too far away to be marked can be *mentally* located, and the lines drawn toward it with closely approximated accuracy. The essential thing is to *have the position of such a point clearly thought out*, — even, for instance, as specifically as that it is “the width of the board,” or “three times” that, distant. The power to do this accurately grows rapidly, and can be attained by students of moderate ability. It is one object of this study.




FIG. 132

**Rendering from the Print.** — As more complex sketches are made, certain parts may be expressed in color (that is, covered with a tone of pencil lines), as was done with the title space of the books in Chapter XIX. The doorway, windows, and shaded sides of the buildings in this exercise (Fig. 131), are examples of this. Such use of color is intended sometimes to attract the eye to the most important or interesting parts, or to bring out the beauty of such details as the majestic forms of the trees in A, Fig. 132.



FIG. 133

## FREEHAND PERSPECTIVE

**The Comparative Simplicity of Perspective.** — By experience in mentally grouping each new vanishing line with the set to which it belongs, the perspective of apparently difficult studies becomes simple. In Fig. 133 a seemingly complex group of buildings is shown to need but four vanishing points for nearly all of its lines.

## Chapter XXIV

### TYPE FORMS HELPFUL IN UNDERSTANDING THE HOUSE<sup>1</sup>—THE SQUARE FRAME

**T**HE Model. — The model for the square frame is six inches on a side, and one inch square in section. Looked at from the front, it appears as two concentric squares one inch apart (Fig. 135). It is placed with one set of long edges vertical, and the other horizontal and making angles of sixty degrees to the left with the picture plane (Fig. 136).

In considering its shape it may be first regarded as a Plinth, or one-inch rectangular slice from a six-inch cube, and therefore one sixth of the cube in thickness (Fig. 137).

<sup>1</sup> Some of the geometric solids here and later given may be omitted at the discretion of the teacher. Those selected for study should be such as to supply any deficiencies in the student's mastery of the subject.

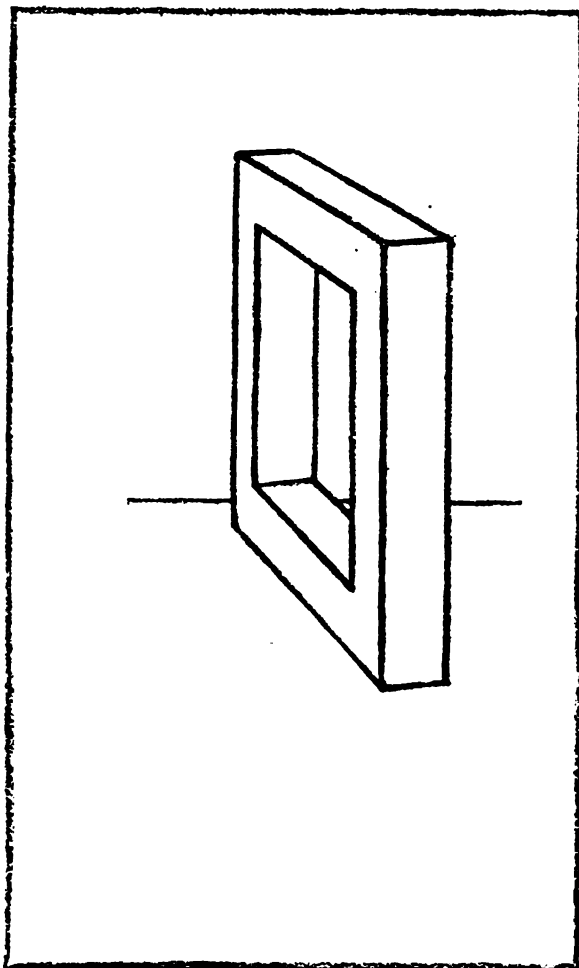
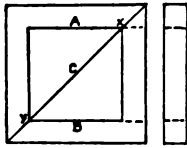


FIG. 134

## FREEHAND PERSPECTIVE

**Drawing the Model.** — The lines of this solid may be drawn and its proportions established in the same manner as those of

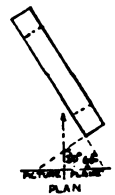


FRONT  
FIG. 135

the cube (p. 54). Remember to place the eye level at once after drawing the first vertical edge. Like the cube, these type forms should be lightly sketched first and later rendered with the firm, simple lines appropriate to them. Being more complicated than the cube, their visible edges

may, if necessary, be strengthened (that is, be drawn as they would finally appear) as soon as determined, to avoid confusion.

The inner square of the frame may next be marked out on the plinth (Fig. 137). To do this place points one sixth of the front vertical edge from each end, and from them vanish lines to VP1. In these lines the edges A and B of the inner square must lie. By the front view (Fig. 135), we perceive that the corners



PLAN  
FIG. 136

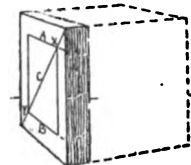


FIG. 137

of the inner square lie in the diagonals of the outer one. One diagonal, C, will mark two corners ( $x$  and  $y$ ) of the inner square. Its other two corners are found by drawing the vertical edges of the inner square, from corner  $x$  down to line B and from  $y$  up to A.

If this inner square were cut out, leaving a frame, parts of the inner thickness of the frame could then be seen. Of this inner thickness, line D (Fig. 138) lies in the back surface of the frame, parallel to B, and at actually the same height. Hence it can be started at a point ( $z$ ) on the right hand vertical edge of the frame, obtained by drawing line E from the near end of B to VP2. This may be called carrying line B "around the corner." From this point  $z$ , D is drawn to VP1. The lower inner edge (F) at the back is parallel to the outer thick-

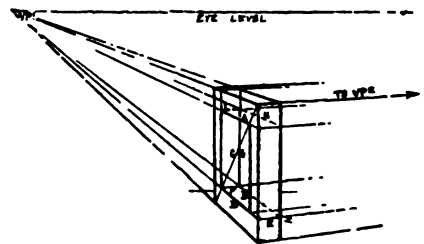


FIG. 138

## TYPE FORMS HELPFUL, ETC.

ness edges, and therefore can be drawn to VP2, cutting off line D. A vertical line from where D and F meet completes the inner thickness.

**Tests.**— The correctness of this drawing can be tested by adding the invisible portions, shown by dotted lines in Fig. 138. Thus if line A be carried around the corner, giving the invisible edge H, the inner invisible edge I should cut it in line G continued.

**The Application of Type Form Principles.**— The application of the foregoing work to the drawing of such parts of the house as windows and doors may be seen in Fig. 139, where the inner edges of door and window frames converge with the set of horizontal lines at right angles to the door. For instance, lines A and B converge with the dormer eaves and other lines tending to VP2, and line C vanishes with the set to VP1.



FIG. 139

## Chapter XXV

### THE SQUARE PYRAMID AND SQUARE PLINTH

**T**HE Models. — The plinth is two inches high and six inches square: the pyramid four inches square at base and eight inches high. The models can be made (Fig. 141). If

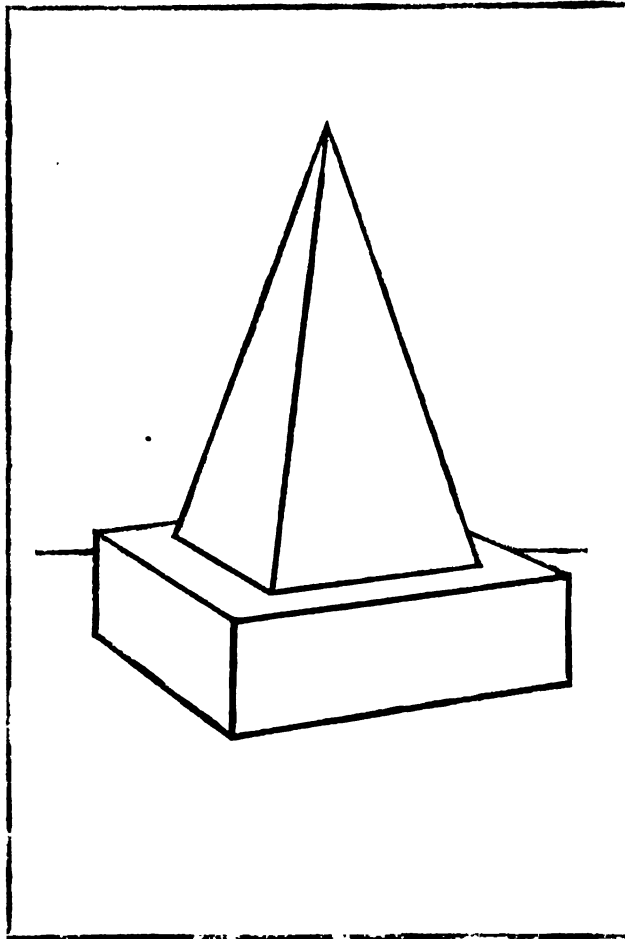


FIG. 140

made, note that in order to secure the required height in the completed pyramid, the length ( $xy$  in Fig. 141) of each triangular side piece of the pyramid pattern is measured from  $xy$  in Fig. 142, where the true length of a side face is shown. The face  $x-y-z$  in Fig. 142 leans back, making  $x-o$  foreshortened.

**Position.** — The plinth rests on one square face, with its sides at angles of thirty and sixty degrees with the picture plane (Fig. 142). The pyramid stands on the plinth,

# SQUARE PYRAMID AND SQUARE PLINTH

with its base parallel to and equidistant from the edges of the plinth top.

**Drawing the Models.** — Proceed with the plinth as with the cube, remembering that its height is but one third as much as the cube in proportion to its breadth.

For the pyramid base, mark on line AB (Fig. 143) one perspective sixth from each end. For these points (1

and 2) a diagonal of the side ABCD can be used (as in Ch. XX). The vertical edge, AC, being unforeshortened, can be divided into six equal parts. Lines from the upper and lower

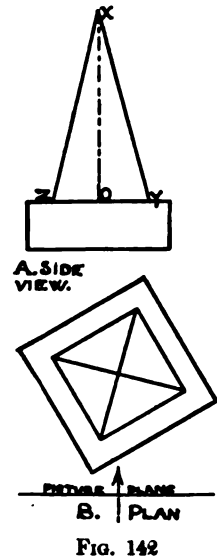


Fig. 142

division points to VP1 transfer these divisions proportionately to the diagonal, AD. From the diagonal they are transferred by vertical lines to the edge AB. (See also Fig. 144.)

Or a diameter through the center (O) will divide AB into perspective halves, when each half can be divided into thirds by the eye. One method can be used to prove the other.

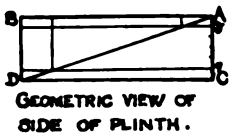


Fig. 144

From these two points (2 and 3) draw lines to VP2. Where they cut the diagonal, AE, will be two corners (4 and 5) of the

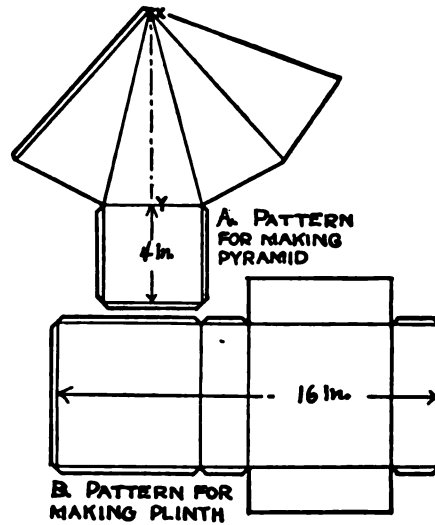


Fig. 141

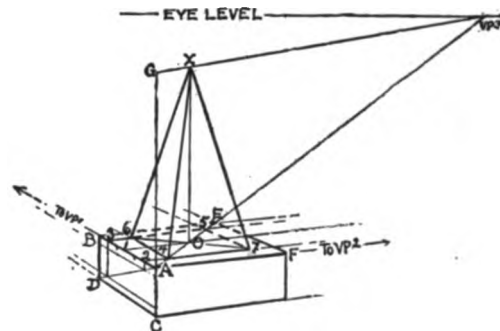


Fig. 143



## FREEHAND PERSPECTIVE

pyramid. Lines to VP1 through these points will give the two other corners (6 and 7), and complete the base of the pyramid.

The apex of the pyramid will be vertically over the center of its base, point O. On a vertical line from O must be measured the perspective height of the pyramid. Its actual height is four times that of the plinth. The nearest corner of the plinth is convenient to use, hence from A the vertical line is continued, and four times AC is measured on it, giving AG for the pyramid height as it would appear at that point. If now this height, AG, could be moved back on the diagonal AE to O it would appear to shorten as moved. Its top would describe an actually horizontal line above AE, that is, a line parallel to it, consequently vanishing to the same point. Therefore continue the diagonal AE to the eye level, giving VP3, and draw the parallel line from G to VP3, which will mark on the vertical from O the desired perspective height at *x*. Complete the pyramid by drawing its oblique edges to the corners of its base.

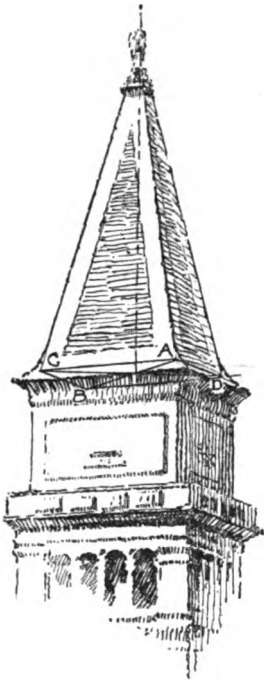


FIG. 145

**Applications.**—The difficulty of making a church spire or a tower (Fig. 145) “stand true” will be readily recognized. The use of the diagonals (AB and CD) will aid in placing its axis and apex.

## Chapter XXVI

### A PROBLEM FOR ORIGINAL STUDY

**T**HE Square Frame Leaning on the Rectangular Block. — These models have already been described in Chapter XV and Chapter XXIV, respectively.

**Position.** — The block rests on one long face, with its square ends making angles of sixty degrees with the picture frame.

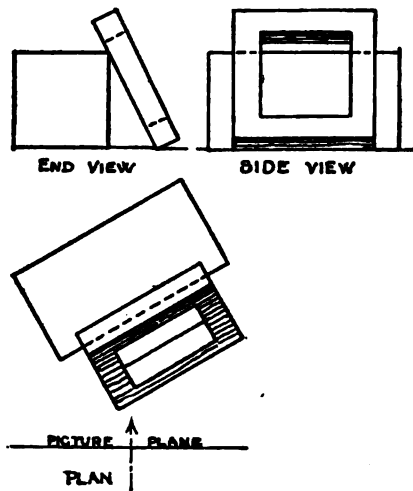


FIG. 146

The frame leans against the block, equidistant from its ends, and with a distance equal to half the width of the block between its lower edge and the block.

## Chapter XXVII

### CYLINDRICAL OBJECTS WHEN NOT VERTICAL

**A**LTHOUGH in Chapter III the cylinder held horizontally was mentioned, we have only *studied* cylindrical objects when vertical. In this position they have been found symmetrical, the ellipses and the axis (which is the middle from end to end) being at right angles to each other. To study

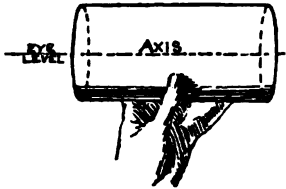


FIG. 147

them in other positions begin with the cylinder model held horizontally, with its middle on the eye level, and its ends equally distant (Fig. 147). It will be readily seen that the ends now appear at right angles to the axis, as when the object was vertical. Turning it a little so the right end can be seen (still keeping it horizontal and at the eye level), it will be observed that the apparent directions of the axis and ellipses are unchanged. (The axis being a horizontal line and at the eye level remains apparently horizontal, and the ellipses still appear vertical. The further ellipse has become a little shorter and rounder, and the side boundaries, like all parallel receding horizontal lines, appear to converge to the eye level.)

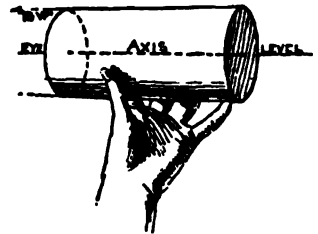


FIG. 148

Now lower the model, keeping it turned away, till it rests a foot below the eye on some horizontal support (as the box in Fig. 149).

The side boundaries and the axis, being below the eye, vanish upward to a point on the level of the eye. They will continue

## CYLINDRICAL OBJECTS NOT VERTICAL

to vanish to the eye level, whether below or above the eye (B in Fig. 149), as long as the cylinder is kept horizontal. The ellipses should now be examined to see if in this position they appear, as formerly, to be at right angles to the axis. Do this first with the head erect as usual, looking with care, and deciding mentally. Then try inclining the head (in this case of A, Fig. 149, to the right and downward) to bring the face in relation to the model as it would be if both were vertical. Two pencils held in the shape of a letter T, held in front of the cylinder (as in Fig.

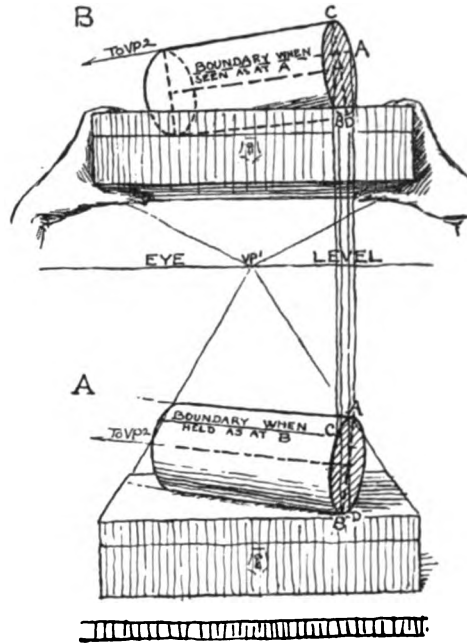


FIG. 149




FIG. 150

will help make sure that the axis of the cylinder and the long diameters of its ellipses unmistakably appear at right angles to each other. To understand how this can be the case, hold the cylinder again at the eye level, as in Fig. 151, and with a pencil mark on it the points (A and B) where the side boundaries meet the ends of the ellipse. Lower the cylinder again (Fig. 152) when it will be seen that these points are not now at the ends of the ellipse, and that the line AB is not now its long diameter. It has now a new long diameter, CD, at right

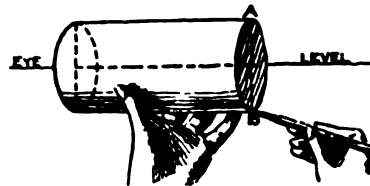


FIG. 151

angles to each other. To understand how this can be the case, hold the cylinder again at the eye level, as in Fig. 151, and with a pencil mark on it the points (A and B) where the side boundaries meet the ends of the ellipse. Lower the cylinder again (Fig. 152) when it will be seen that these points are not now at the ends of the ellipse, and that the line AB is not now its long diameter. It has now a new long diameter, CD, at right

## FREEHAND PERSPECTIVE

angles to the axis in its new apparent direction; and also new side boundary lines from C and D toward the vanishing point.

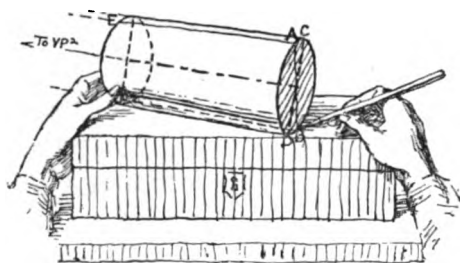


FIG. 152

jects, as a tumbler, or the flower pots in the next chapter. The leaning dish in Chapter VIII, and the tilted cover in Chapter X are examples. It will invariably be found that, *provided the circular details of a cylindrical*

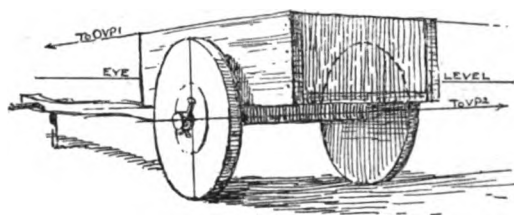


FIG. 153

*object are actually at right angles to its axis, they will appear so whatever the position of the object. Consequently, cylindrical objects always appear symmetrical.*



FIG. 154

**Tests.** — A drawing of such an object may be tested by turning it to bring the object in question vertical (Fig. 156, Ch. XXVIII), when errors in symmetry will be more apparent.

A wheeled vehicle (Fig. 153) is a common illustration of this principle; also a clock (Ch. XXXI) and the round arches in Chapter XXXII. Others will readily occur to the student. Flowers (Fig. 154) are striking examples; and many awkward drawings of flowers are so because drawn in ignorance of this beautiful and simple principle of the symmetry of the cylinder.

## Chapter XXVIII

### A GROUP OF FLOWER POTS


**A**S with previous examples, drawing this exercise is optional with the student, according to his proficiency. But he should compose a similar group, that is, having in it at



FIG. 155

least one cylindrical object not vertical. And he should take especial pains to secure the symmetry of such non-vertical objects.

The illustration (Fig. 156) shows how this symmetry may be tested by turning the group.



A.



B.  
SHOW  
FIG. A  
TURNED  
TO BRING  
LEANING  
SAUCER  
VERTICAL.

FIG. 156

## Chapter XXIX

### THE CIRCULAR FRAME IN A SQUARE FRAME

**T**HIS is an example of rectangular and cylindrical forms in the same object. The explanation should be carefully studied, and the exercise drawn unless the student is experienced.

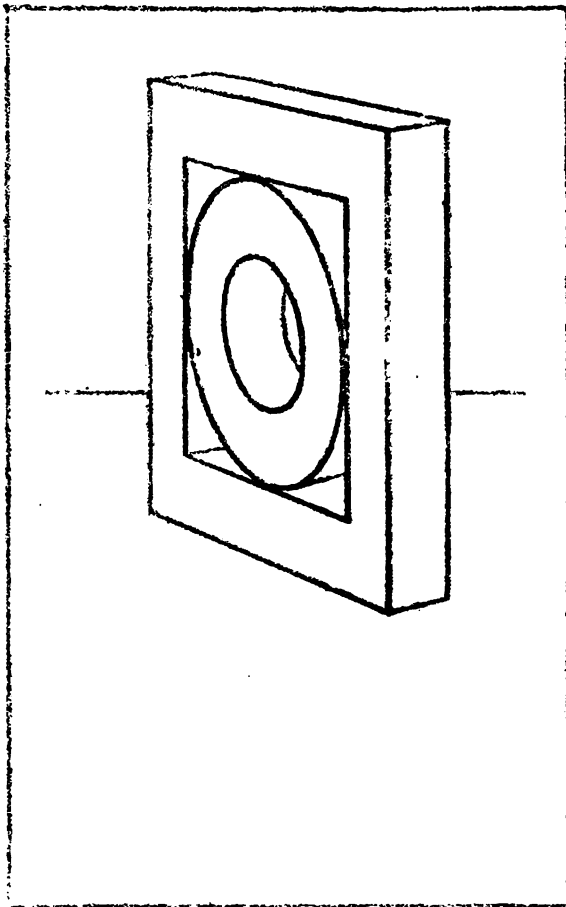
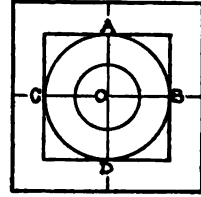


FIG. 157

**The Circular Frame.** — After the square frame (Ch. XXIV) is drawn, look at the model from the front (Fig. 158), and note that the outer surface of the ring touches the square frame *at four points only*—where the diameters of the square cross it (A, B, C, and D). These diameters, being parallel respectively to the sides of the square, are represented in the perspective by a vertical line, and a line vanishing in VP1, both passing through the true center O, at crossing of the diagonals. Through these four points the outer edge of the circular frame must pass.

## CIRCULAR FRAME IN A SQUARE FRAME

Disregarding at first the opening in it, the circular frame may be temporarily thought of as a slice from the cylinder, one inch thick, and therefore a very short cylinder, with an axis only one inch long. As placed within the square frame (Figs. 157 and 159) its axis and side boundaries are parallel with the short edges of the square, and its actual centre and that of the latter coincide.



FRONT VIEW.

FIG. 158

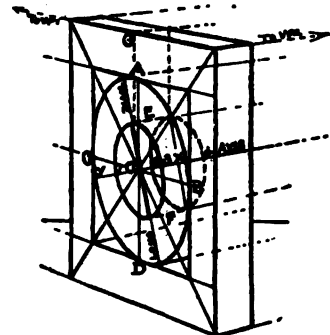


FIG. 159

Hence we may draw its axis from this center (O) to VP2. Its circular outer edge will be seen as an ellipse at right angles to this axis, and passing through the four points A, B, C, and D, previously found. As the short diameters of such ellipses always appear to lie in a line with the axis of the object (Fig. 160), the axis line will give the apparent direction of the short diameter of the ellipse. (Here the beginner is advised to turn the paper round, bringing the axis as a vertical line, the better to secure the symmetry of the cylindrical part

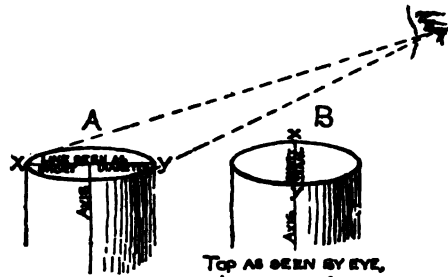


FIG. 160

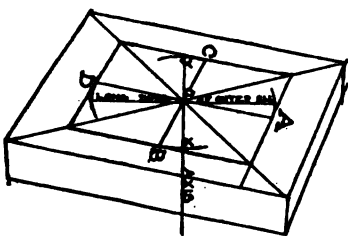


FIG. 161

of the model. See Fig. 161.)

To obtain the length of this short diameter, slightly curved lines, perpendicular to the short diameter, are sketched from B to the right and from C to the left, giving  $x$  and  $y$  for the extreme front and back of the ellipse.

Now (since an ellipse is always symmetrical) the longest dimension or long diameter of this ellipse is *not* on the vertical line through A and D (Fig. 159), but is on a line at



## FREEHAND PERSPECTIVE

right angles to  $x y$ , and *through its apparent middle from front to back*; making one end fall in front of D, and the other back of A. It will also be a little in front of O, the true center of the circle, and a little longer than A D, but not touching the frame. Mark lightly and accurately this apparent middle and sketch the long diameter through it. Mark the ellipse ends by sketching rounded curves, from A back and from D forward, making them symmetrical on the long diameter, and equidistant from the axis. Complete the ellipse by connecting these ends and sides, correcting if necessary, till the ellipse is perfect.

For the inner ellipse proceed as with the top of the cylinder in Chapter IV, remembering to make its proportions as shown in Fig. 158, also that the perspective halves of the short diameter are already found by the true center, O. The side boundary lines of the circular frame may now be drawn to VP2, when there will remain only its inner thickness to draw. The edge of this is an inner circle on the back of the frame, actually like the inner one in front. Draw lines (E and F) from the ends of the front inner ellipse to VP2. These may be called side boundary lines of the cylindrical opening; and their convergence measures the smaller length of the desired back ellipse, which lies with its ends in these lines as does the front one. To find these ends it is necessary to obtain the apparent thickness of the frame at that distance into the picture. From where E begins (on the front inner ellipse) carry a vertical line to the upper near edge of the square frame. From this point G, vanish a line in VP2, and drop a vertical from where it crosses the back edge of the frame to line E again. This measures on E the perspective thickness desired, and gives a point for the new ellipse, which corresponds to the end of the front inner ellipse. Set off the same distance on F for the other end of the new ellipse. Sketch the ellipse, remembering that the thickness at the back (1-2) is a little less, and at the front (3-4) is a little more than at the ends.

# CIRCULAR FRAME IN A SQUARE FRAME

The round arch (Fig. 162, also Ch. XXXII) is an interesting application of this principle. Errors in drawing these and kindred forms (B in Fig. 162) so common with beginners are easily avoided when these principles are understood.

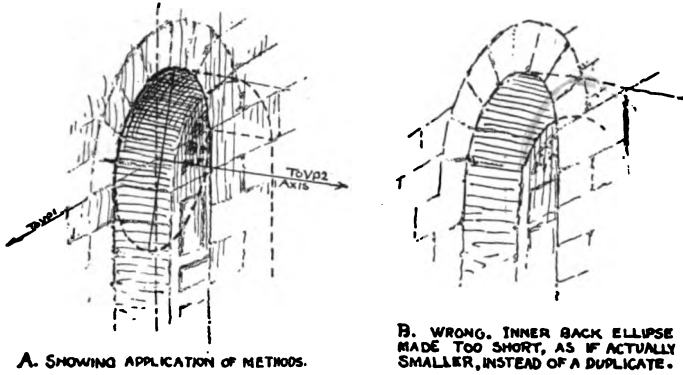


FIG. 162

## Chapter XXX

### A ROUND WINDOW

**T**HIS exercise (Fig. 163) and the methods of sketching it should be carefully studied, and if necessary it should be drawn. After this the student should sketch a

similar example from a building or photograph.

Having drawn the straight-line part of the exercise, the round window is next to be considered. This is actually a cylindrical opening in the wall. Being above the eye, the circles of the window appear as slanting ellipses like the cylinder ends in Fig. 149 (Ch. XXVII). To make sure that the slant of these ellipses shall agree with the straight-line part of the building, the axis of this cylindrical window is used. This axis is actually at right angles to the wall, and




FIG. 163

## A ROUND WINDOW

is therefore parallel to the lines already vanishing in VP1. Hence the apparent middle of the window ellipse (O in Fig. 164) is first located, and the axis is drawn through it to VP1, extending forward indefinitely. The long diameter (AB) is sketched at right angles to the axis, and the short diameter (CD) is set off on the axis line. The ellipse is then drawn through these four points. The inner ellipses of the window are

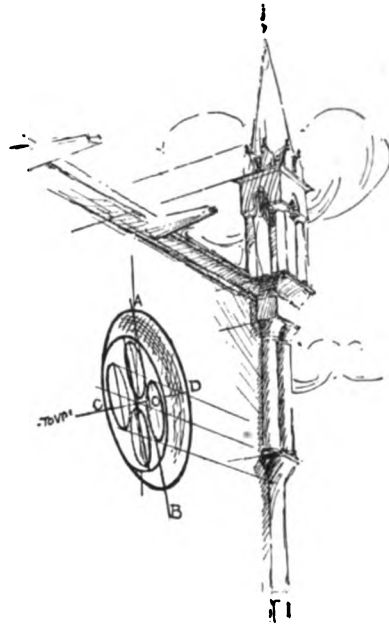
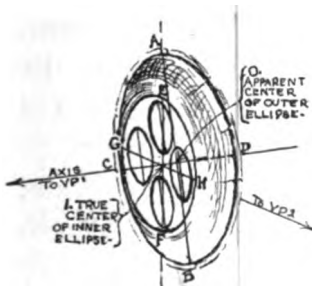


FIG. 164



A. FRONT VIEW



B. PERSPECTIVE

FIG. 165

shorter as well as farther back than the outer one.

For the partial ellipses of the

quatrefoil, the actual center of the inner ellipse (1 in Fig. 165) must be marked, and through it a vertical line (EF) and a horizontal one (GH, vanishing in VP2) drawn. The real centers of the quatrefoil circles fall each on one or the other of these lines. Their long diameters (a little in front of these real centers) are parallel

with the other long diameters of the window.

This quatrefoil is especially an example of objects which should in practice be sketched freehand first, and afterward tested by the constructive methods here given. (See Introduction.)

## Chapter XXXI

### THE CLOCK A PROBLEM

**T**HIS example (Fig. 166) is given as an aid in rendering, though it may be drawn first if desired.

**The Model.** — Any clock containing rectangular forms and the usual circular face will serve as the model. It should be placed above the eye.

**Conditions.** — Unlike problems in general, this drawing may be made from the object, but must be done without assistance. The aim is to test the student's ability to apply the principles taught in the last few chapters.




FIG. 166

## Chapter XXXII

### THE ARCH

**T**HESE arches from the cloister of St. Paul's Without the Gates, at Rome, also illustrate the symmetry of the cylinder, and can be drawn by the same method as




FIG. 167

the round window in the last chapter. (See Ch. XXX.) They are semi-cylinders and their openings are semicircles (Fig. 169). The semicircles are sketched on a horizontal line (A) which,

## FREEHAND PERSPECTIVE

being above the head in this instance, vanishes downward (Fig. 168). The true centers of the semicircles are on this line, and from these centers the axes are drawn, vanishing with other lines to VP1. The joints of the stones forming each arch, being lines really tending to meet in its true center, are so drawn in perspective.

Pointed arches, and other modified forms can be readily drawn on the same principles here used.

The student should draw this exercise unless experienced, when he should instead select a print of artistic interest, illustrating the same principle, and make from it a careful and expressive sketch. In either case, he should follow his first drawing with another involving the use of this principle, from a building.




FIG. 168

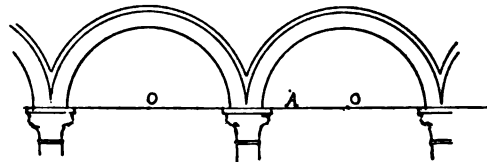


FIG. 169

## Chapter XXXIII

### INTERIORS—A ROOM PARALLEL TO THE PICTURE PLANE

**T**HE Cube as a Model. — With a penknife loosen one face of the cardboard cube, and turn it back or take it off. Place it within a foot of the eye, with the opening parallel to




FIG. 170

the picture plane, and the eye level a little less than two thirds of the way up. If desired, the windows, doors, rug, and pictures may be marked with a pencil on the inside of the cube. It now serves to illustrate the room shown in Figs. 170 and 172, as the cubes and prism illustrated a house in Chapter XXII. In this room the floor, ceiling, side walls, and all details on their surfaces



## FREEHAND PERSPECTIVE

(as the window, the side door, and the rug) are foreshortened; while the side edges converge to VP1 directly in front. The back wall and all surfaces parallel to it (as the end of the table and one side of the stool), being parallel to the picture plane, appear in their true shape.

**Directions.** — This example (Fig. 170) should be drawn by the student if a beginner. After this the end of a room, also with its farther wall parallel to the picture plane, should be drawn from memory or invention.<sup>1</sup> A hall, a kitchen, a street car, or a piazza will be recognized as especially adapted to such views.

**The Apparent Width of the Sides.** — To aid in estimating this, recall the appearance of the most foreshortened side of the cube in Chapter XVI. This estimate may then be tested by pencil measurement of the cube model.

**The Pictures.** — Although the picture on the right wall is inclined slightly forward, its sides are still parallel to the picture plane; and therefore appear in their true direction and shape. With the picture on the back it is not so. Its top is slightly nearer to us than its lower edge; and must therefore appear longer, making the sides appear to converge downward (though almost imperceptibly). To determine the direction of this convergence, revolve it forward on its lower edge in imagination until horizontal (Fig. 171). It will at once be seen that the sides (A and B) in this position are parallel with the lines already vanishing in

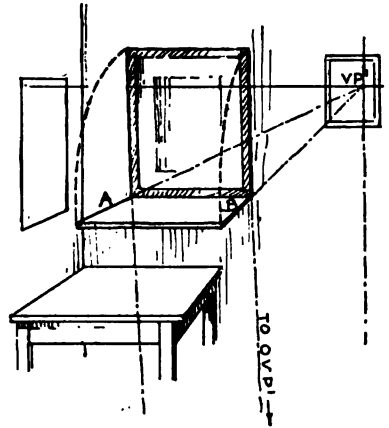


Fig. 171

<sup>1</sup> It may be asked why memory or inventive drawings should be advised before study from a room. But in this case we meet a subject of which all have something in memory; and drawing from memory when possible (when one has something remembered) is not only far pleasanter, but much less laborious. The object or place itself presents to a beginner a confusing mass of detail, much of it not needed for the drawing. The student must make later many drawings from the place to accumulate knowledge; but will always do his most free and individual work from this knowledge, not directly from the object.

## ROOM PARALLEL TO PICTURE PLANE

VP1. If now the picture should be slowly revolved upward, the converging point for the sides would descend as the picture rises. As the picture is not moved sidewise at all, this point of convergence (OVP1) can only move downward in a vertical line from VP1 like the roof ends in Chapter XXII. When the picture is returned to its original position, it varies but slightly from the vertical; consequently OVP1 is too far away to locate and the vanishing of its sides must be estimated. Make sure it is slight enough, and toward a point vertically under VP1.

**An Open Door.**—So far we have found but one vanishing point on the eye level. If we begin to open the farther door, its horizontal lines will instantly acquire a vanishing point, but at an infinite distance.

In proportion as the door swings toward being parallel with the sides of the room (that is, with the direction of seeing), this vanishing point will move inward. When the door becomes quite parallel with the walls of the room, this point will coincide with VP1. If the door is swung still farther back, this point moves on toward the left. The apparent width of the door thus opened may be measured by an ellipse on the floor (Fig. 172) representing the path of its near corner as it swings in a circle. The short diameter of this ellipse is proportioned to the foreshortening of the floor in which it lies. It can also be found by the use of lines parallel to the floor diagonal (Fig. 173). From this diagram it is seen that since the floor is a square, its diagonal measures equal distances in its sides. Any

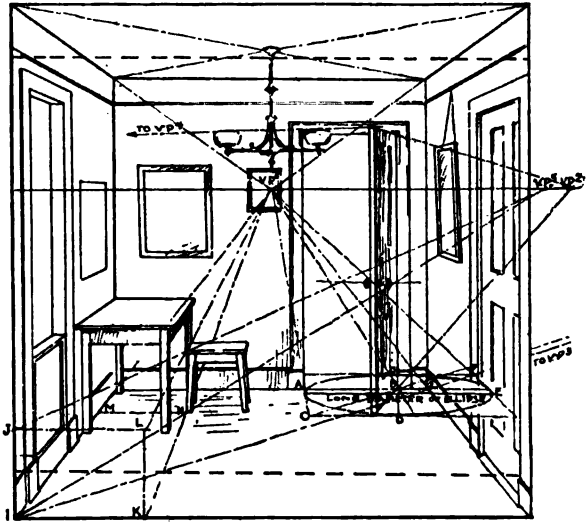


FIG. 172

## FREEHAND PERSPECTIVE

distances in these sides or in lines parallel to them can therefore be measured by lines parallel to the floor diagonal. In the perspective drawing (Fig. 172) these lines can be used there perspective-ly in precisely the same way.<sup>1</sup>

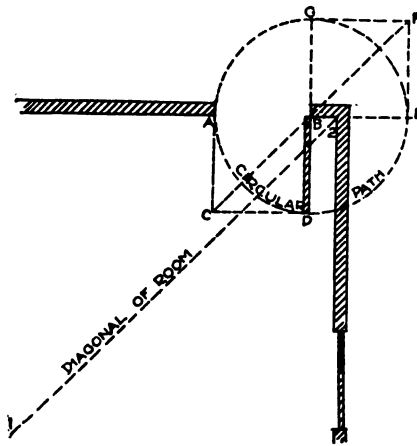


FIG. 173

It will also be noted that the thickness edges of the door, being horizontal and at right angles to its top and bottom, have their own vanishing point upon the eye level (VP4). Also the door knob is cylindrical, and its axis is parallel to these edges.

**The Stool.** — The proportion of the stool is found in the same manner as the height of the pyramid in Chapter XXV. The room may be considered as nine feet high, and the stool as approximately eighteen inches, or one sixth the height of the room. Mark any point (as H in Fig. 172) where it is desired to place it on the floor of the room. Its height cannot be compared directly with that of the room here, for we cannot determine where a vertical line from H will touch the ceiling. Therefore imagine the stool moved from point H in a straight line to any place on the front edge of the room, as I, where its height (IJ) can be measured by that of the room. If now it were moved back on this same line (IH), its top would move in a horizontal line directly over IH, that is, actually parallel to it, or vanishing in the same point on the eye level. Both lines (HI and one from J) may therefore be carried to this point VP5. The height of the stool, when placed at any point on the line from I to VP5 will be the vertical distance (as at H) between these lines.

The near side of this stool is now drawn in its true shape, and the parts at right angles to this side found by vanishing lines to VP1.

<sup>1</sup> The ellipse is made horizontal, as explained in Chapter XLIII.

## ROOM PARALLEL TO PICTURE PLANE

Finally, to improve the composition some of the ceiling and a little of the floor are cut off, as shown by the dotted lines in Fig. 172. This gives a more generally favorable shape (Fig. 170) to the inclosure, and keeps the oblique lines from running to its corners, which should always be avoided. (See p. 116.)<sup>1</sup>

<sup>1</sup> See Chapter XLII for further consideration of a room parallel with the picture plane.

## Chapter XXXIV

### INTERIORS CONTINUED—A ROOM AT ANGLES TO THE PICTURE PLANE

**T**HE Model.—The cube model may be prepared for illustrating this study by removing a side adjacent to the opening made for the previous study.




Fig. 174

**Position.**—The eye level and the distance from the eye are the same as in the last chapter. Place the model so that its receding faces make angles of thirty and sixty degrees with the picture plane. Both sides and the top and bottom are now foreshortened and their horizontal lines vanish respectively in VP1 and VP2 (Fig. 174).

**Selection of Subject, and Use of the Picture Plane.**—It will be seen that the room

in Fig. 174 is the same as in the previous chapter. The difference is in the selection of subject-space, and in the consequent

## ROOM AT ANGLES TO PICTURE PLANE

relation of the subject-matter within that space to the picture plane. Thus in A, the extreme points ( $x$  and  $y$ ) of the back wall of the room are equally distant from the picture plane as well as from the eye. Therefore we cannot, without absurdity, vanish the lines on this wall in either direction (A in Fig. 176), still less in both (B in Fig. 176). The only way to give a truthful impression of the back wall is to draw it in its true shape (C in Fig. 176), as was done in the last chapter.

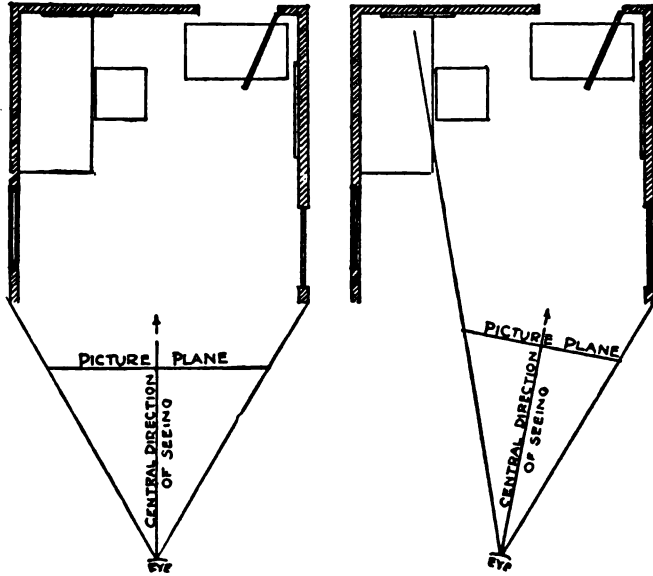


FIG. 175

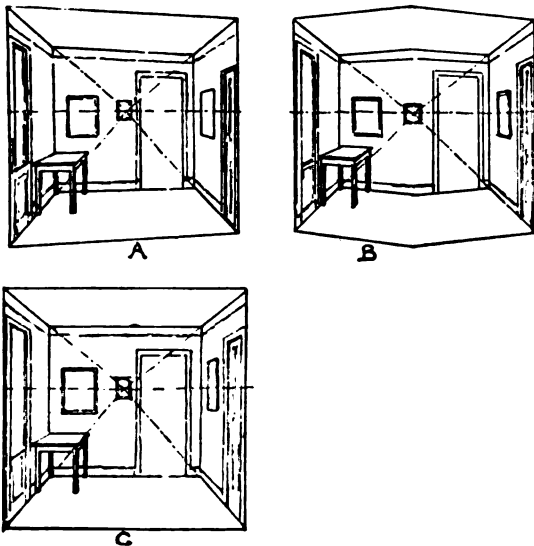


FIG. 176

But in the present exercise (Fig. 174) part of the room is left out. The central direction of seeing is therefore moved to the right, and with it the picture plane is turned (B, Fig. 175). Consequently the wall ( $e$ ) which was before parallel to the picture plane now recedes from it. Hence the height of the room at the corner, being farther into the pic-

## FREEHAND PERSPECTIVE

ture *and from the picture plane*, appears less than at the right and left; and all horizontal lines on both walls appear to converge.

In this drawing the rectangle incloses the parts of most interest and cuts off the awkward outer lines (Fig. 177). An

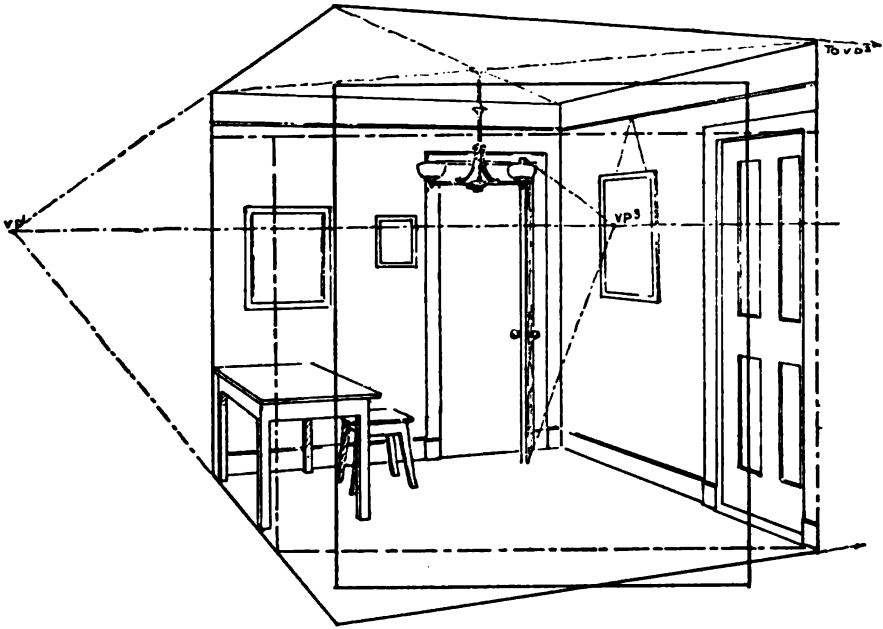


FIG. 177

alternate selection is indicated by dotted lines. This brings us to the consideration of a new point, namely:—

**What to Include in a Picture.**—This cannot be all that it is possible to see from any point, for the head can be turned to see all parts of the horizon circle. Such a view when painted forms a panorama, which is a continuous cylindrical picture surrounding the spectator.

It is evident that the legitimate picture must include, or cut out from what it is possible to see, only such a space as can be perceived by the eye in a single effort of seeing. It should leave out whatever cannot be seen without turning the head, or even noticeably moving the eyes. It is generally understood

## ROOM AT ANGLES TO PICTURE PLANE

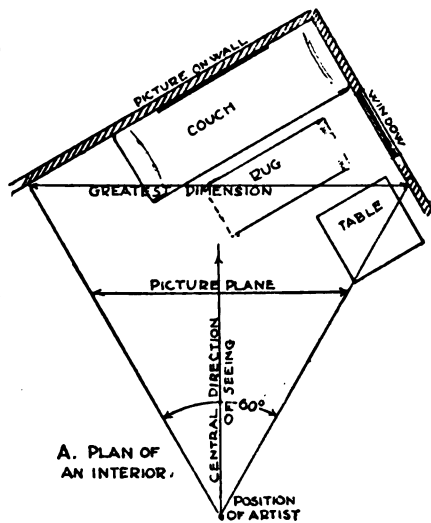
that sixty degrees of the horizon circle is the most that should be taken, and that usually thirty degrees is better. The rule is that the greatest dimension of the selected space (whether height or width) shall not exceed the artist's distance from that dimension.

It will be seen by the diagram (Fig. 178) that this is equivalent to not exceeding sixty degrees in the picture. It is also apparent that it does not prevent the inclusion of objects nearer than that greatest width if they come into the picture space, as the table and part of the rug in this illustration.

In conclusion it should be noted:

**First.** — *The picture plane is different for each new picture selection.*

**Second.** — *The picture angle should not be over sixty degrees, and is better less.*



B. THE PART SELECTED FOR A PICTURE.


FIG. 178



## Chapter XXXV

### FURTHER STUDIES OF INTERIORS

**T**HE student should copy carefully Fig. 179, always determining the level of the eye, and locating the vanishing points either actually or mentally. Note that the emphasis of contrast and interest is concentrated on the old-



## FURTHER STUDIES OF INTERIORS

fashioned desk while the details on the wall beyond it are very quiet. The settle comes forward more (that is, has more contrast and emphasis) than the wall, but less than the desk. The floor is purposely quiet in detail to aid in concentration of interest. The chair in the



FIG. 180




FIG. 181

extreme right of the fore-ground is subordinated also.

**Original Work.**—Following the above copy several interiors should be drawn from the place. The finder should be used, and thumb-nail sketches

(Figs. 180, 181, and 182) should be made to test the artistic value of the selection. Avoid equal angles in the principal sets of vanishing lines. If both should be drawn at forty-five degrees, or nearly that, the composition would have a stiff effect. The contrast between surfaces turned away much and others turned away little is generally pleasing. Should it




FIG. 182



FIG. 183

be impossible to avoid equal angles of vanishing, relieve the stiffness by using details (as the sofa and window in Fig. 183) that

are widely different in effect. The rug, being parallel with the sofa, assists further in overcoming the monotony. It is undesirable to show the floor and ceiling as occupying equal space in the picture; and it is

usually better not to show both floor and ceiling. (Compare Fig. 182 with the same subject in Fig. 184.) A subject may

## FREEHAND PERSPECTIVE

often be improved by cutting it with a different margin (Fig. 185).



FIG. 184

Care should be taken to place the principal oblique lines of the study in good relation to the margin or inclosing rectangle that they do not conspicuously point to the picture corners. The rectangle which bounds a composition is an orderly conventional shape, and hence unnoticeable, leaving the attention to be concentrated on the picture.

Lines to its corners direct the attention there, and defeat this end.

**Vignetting.** — It is not necessary that an inclosing margin should always be



FIG. 185




FIG. 186

used. The drawing may be vignettted, or blended off into the white paper (Fig. 186). This is less easy to do as the tendency of the irregular outer edge is to contrast sharply with the white paper, detracting from the effect of the more important central parts. The edge details therefore must be carefully "quieted," or rendered inconspicuous.

Interesting effects are often produced with a partial margin

## FURTHER STUDIES OF INTERIORS

line (Fig. 187). This is advisable if the center of interest is too near the edge of the paper to blend off well.

So many principles of perspective and of artistic rendering are included in the drawing of interiors that they form a most important division of the subject. In figure compositions they are constantly used, especially by the illustrator.



FIG. 187

## Chapter XXXVI

### A CHAIR

**T**HE chair in Fig. 188, like most chairs is different from the stool in our first interior study (Ch. XXXIII) in that the sides are not parallel to each other (see plan,




FIG. 188

Fig. 189). Also the seat is a trifle lower in the back, so that lines B, B (Fig. 190) slope downward toward the back. But the chair is symmetrical on its center line (front view, Fig. 189), therefore the horizontal lines in its front and back are parallel, having a common vanishing point on the eye level.

**Drawing the Chair.** — After having planned its place on the

## A CHAIR

paper and located the eye level, the next step is to converge the horizontal lines of the feet and side rung (C and D) to their vanishing point (VP1). Then sketch the line for the front of the seat, one for the top of the back, and line E on the ground to VP2.

The near side of the seat (lines B, B) is drawn next. Although not horizontal, the side is in the same plane with (directly over) the horizontal lines C and D, so that its point of convergence must be directly under theirs. The direction of the upper line B is therefore taken, and OVP1 is located where this direction crosses a vertical line from VP1.

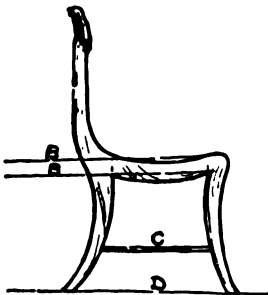


FIG. 190

On this line and the lower line B (vanishing in the same point) the curves of the side of the seat are drawn, after which the legs and back on that side should be sketched.

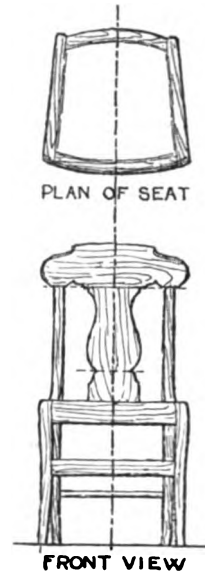


FIG. 189

The same method is pursued with the other side of the seat, but as it is a little more facing the beholder, the vanishing point for its horizontal lines is VP3, farther away on the eye level. As the seat is

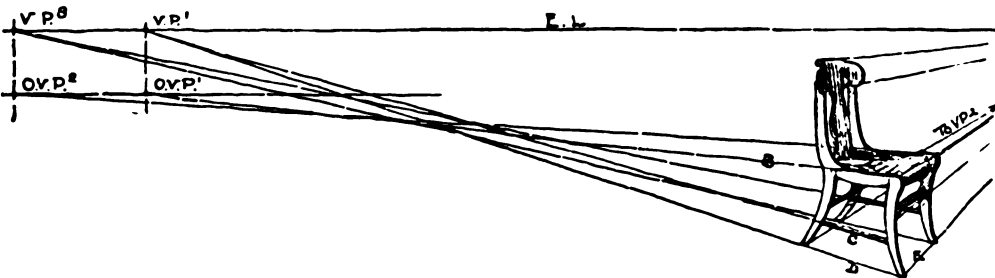


FIG. 191

evenly slanted, the other oblique vanishing point (OVP2) is on a level with OVP1.

All edges parallel to the front and back converge to VP2. The curving front of the seat, the front rung and the curves of

## FREEHAND PERSPECTIVE

the bars across the back are drawn so their ends rest on a line to VP2. Since the back is hollowed from side to side, more space will be visible between its vertical center and the far side than between that and the near side. Mark its principal points on lines to VP2, and draw the curve between them. The lines where the cylindrical rungs enter the legs are actually *modified* circles, hence they will be seen as shapes modified from the elliptical, and should be carefully considered and drawn.

Following this, the student should choose and draw at least one other piece of furniture. Selection should be made of something interesting in itself; that is, well designed and constructed, and agreeable in association. In chairs the old-fashioned rush or splint bottom ones, the wooden rockers of our grandmothers, the beautiful examples by Chippendale, Sheraton and others of the colonial period, and good examples of modern mission shapes may be mentioned as among those satisfactory for study. If one is fortunate enough to get a really fine old cradle, it is a most instructive subject, as is an antique desk or a tall clock.

The student who has faithfully done the work and study prescribed thus far will find himself possessed of a rapidly increasing power of judgment in applying the principles of perspective, and will be able to express that judgment with ease and certainty. The artistic quality of this expression should also have gained; though for this so much coördinate study and observation are needed, that its degree cannot so certainly be predicted.

## Chapter XXXVII

### THE HEXAGONAL PLINTH IN TWO POSITIONS

**T**HE student should draw this example from the objects, following the directions here given; and should then sketch them from memory, as by the general directions in Chapter XI.

**The Model.—**

This can be made from cardboard according to the diagram (Fig. 193). For the first position it should be placed about three feet from the eye and nine inches below it, and with two vertical faces parallel with the picture plane.

**The Geometric Hexagon.—**

This should be constructed first. Divide the line AB (Fig. 194) in halves, drawing

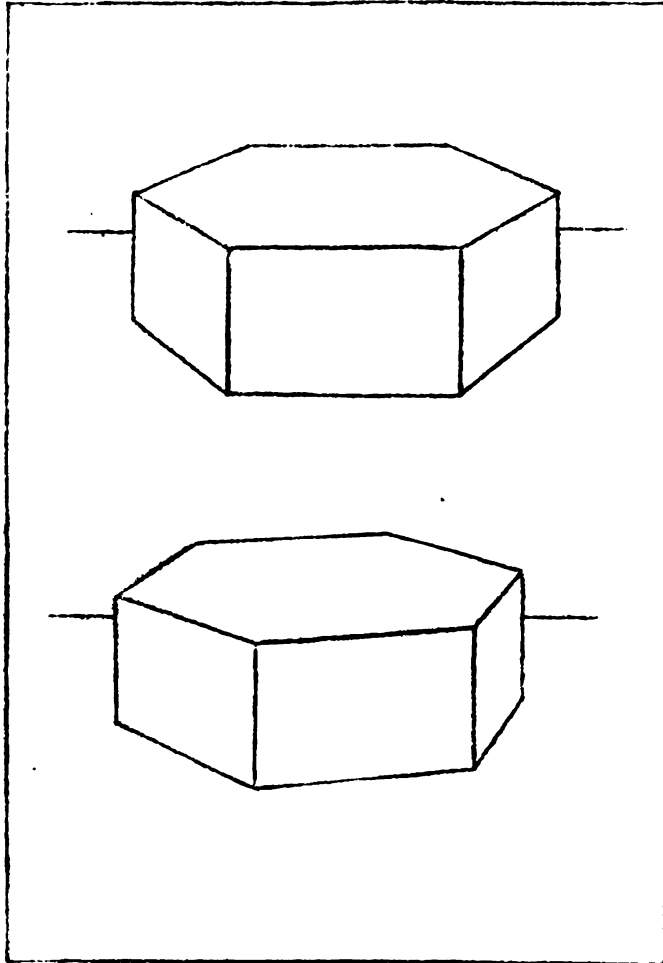


FIG. 192



## FREEHAND PERSPECTIVE

a perpendicular at the point of division. Measure the distance AB, taken on the pencil, from B against the perpendicular.

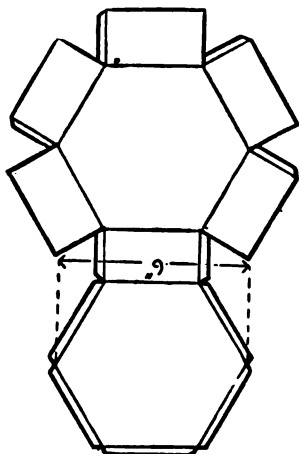


FIG. 193

Where it falls (at O) will be one corner of an equilateral triangle (AOB) which will form one sixth of the desired hexagon. Sketch vertical lines of indefinite length from A and B, and cut them by continuing the sides of the equilateral triangle (AO and BO) to D and C, then draw DC. The constructive rectangle ABCD, which we have now completed, will be always essential in

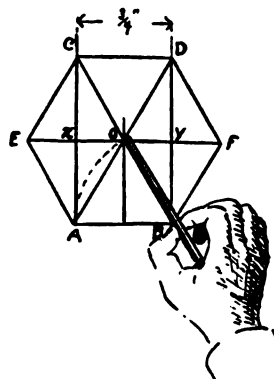


FIG. 194

drawing the perspective of the hexagon. Its diagonals (A and B) will form two diagonals of the hexagon, and its center (O) will be the center of the hexagon. The other diagonal, EF, is drawn through O parallel to the rectangle ends, half on each side of the center. Its length should be tested by that of the diagonals already found. The other four sides complete the geometric hexagon ABCDEF.

**Drawing the Hexagonal Top.** — The rectangle ABCD (Fig. 195) is drawn first. Although it is actually nearly twice as long as its width it will be found to appear less than half as long. The diagonals of the rectangle will in perspective, as in the geometric view, form two diagonals of the hexagon. The other diagonal, EF, is set off on a line of indefinite length through their crossing. Looking at the diagram, it is observed that the sides of the rectangle (AD and BC) and its middle (O) divide this diagonal (EF) into four equal parts at  $x$ , O and  $y$ . In the perspective drawing (Fig. 195) the two middle fourths ( $xO$  and  $Oy$ ) are seen to be already measured. Since these fourths are

## HEXAGONAL PLINTH IN TWO POSITIONS

all equally distant from the picture plane, they appear equal, and are so set off from  $x$  and  $y$ . The hexagonal top is completed by drawing its last four sides.

**The Thickness of the Plinth.** — The front face of this thickness, being parallel to the picture plane, is drawn in its true shape. The lower edges of the other two faces are parallel to the receding horizontal edges (AE and BF) above them, and will therefore vanish with these edges respectively to VP2 and VP3. Vertical lines downward from E and F will complete the plinth.

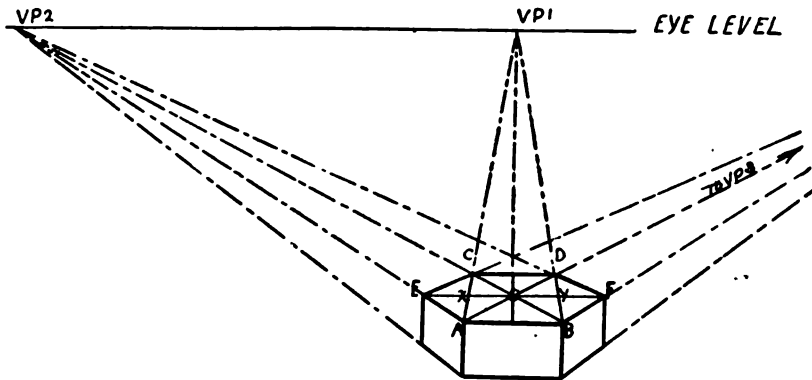


FIG. 195

**A Test for Vanishing Lines.** — The other two diagonals and the receding back edges of the hexagon are in reality each parallel to one or the other of the two sets of vanishing lines just drawn. Therefore when carried out to the eye level, they should meet respectively in VP1 and VP2 if the drawing is correct.

**The Hexagonal Plinth Slightly Turned.** — For this drawing turn the model so its front edge will make an angle of thirty degrees with the picture plane. Draw the constructive rectangle, ABCD, as before; taking with the pencil the direction of the front edge and of the imaginary left side (AC in Fig. 196)<sup>1</sup> of the rectangle. Take especial pains to have these lines correct in direction and

<sup>1</sup> Corresponding to the receding edges (2, 2) first drawn in sketching the cube.

## FREEHAND PERSPECTIVE

length, as an error here causes a particularly unpleasant representation. In vanishing the back edge with the front one be careful to keep it also tending upward.

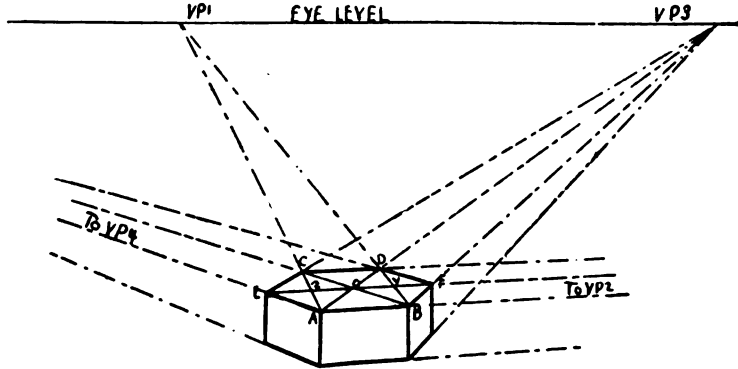
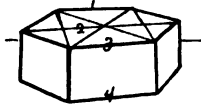
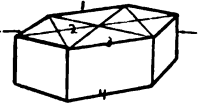


FIG. 196

The vanishing point (VP2) of these front and back edges is so far away that their convergence will naturally be only estimated. Hence the necessity of *locating definitely in mind what cannot be seen* — that is, the vanishing point, not only of these two lines, but of their parallels, the diagonal EF and the lower edge of the front face.



A. WRONG. LINES 1, 2, 3 AND 4 DO NOT CONVERGE TO THE EYE LEVEL.



B. WRONG. LINES 1, 2, 3 AND 4 ARE TOO STEEP. HEXAGON APPEARS TILTED.

FIG. 197

In this position the last diagonal, EF, is in perspective, and therefore its four actually equal divisions will appear decreasing in size, or *perspectively* equal. Consequently, if the work so far done is correct it will be found that the space  $xO$  is (almost imperceptibly) greater than  $Oy$ , because a little nearer. Hence  $Ex$  should be set off a little larger than  $xO$ , and  $yF$  a little smaller than  $Oy$ . Similar cases, as the cylinder top in Chapter IV, and the concentric circles in Chapter XX are readily recalled.

**Testing the Drawing.** — The test used for the other drawing of the plinth is equally effective here. It is more needed here,

## HEXAGONAL PLINTH IN TWO POSITIONS

since the vanishing point for one set of lines has not been actually found. But if these lines have been carefully thought out as to direction, the errors will be found encouragingly slight.

The test of placing the eye at the vanishing point (Ch. XVII), to sight back along the lines which should converge to them, is especially applicable here.

## Chapter XXXVIII

### INTERIOR WITH A TILED FLOOR

**T**HE plan of this floor is shown in Fig. 197. As drawn in the example, the foreshortening of the tiles is proportioned to that of parallel surfaces, such as the receding "treads" or tops of the steps.



FIG. 198

From the vanishing of their edges, we may judge these treads to be foreshortened about one half. Consequently lines parallel to the staircase edges (vanishing in VP1) must be foreshortened as much.

The tile adjacent to the lowest step is the best to begin with (since it is the same distance into the picture), and as with the previous hexagons the rectangle ABCD is drawn first. And since much depends on the correctness of this first rectangle, it is worth while to

## INTERIOR WITH A TILED FLOOR

take especial pains with it. Observe that as the tiles are here placed, it is the width (AD) of this rectangle which is parallel with the receding staircase edges. Now if it is desired to represent tiles of a certain size, a step is one of the best objects to use for comparison, as steps do not vary much from seven inches




FIG. 200

in height (Ch. XLV). Thus these tiles are three and a half inches on a side, making the rectangle width *actually* half the height of a seven-inch step. In the drawing this width, being foreshortened as much as the steps, appears one fourth as wide as the height of the step. The actual length of the rectangle is seen by the diagram to be one eighth less than twice its width; or (what is the same thing) one eighth less than the height of the step. Being slightly turned away, it will appear a little shorter in comparison than that. In this case it was made one sixth less than the height of the step.

It will be readily seen how if the rectangle proportions are right, the lines of this first hexagon, when carried out forward and back, will give points for the other tiles, making them fall harmoniously into their proper perspective.

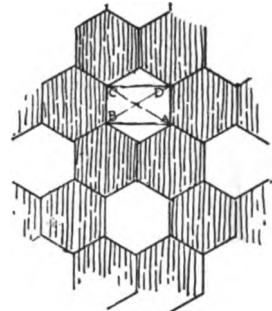


FIG. 199

END VIEW OF STEP

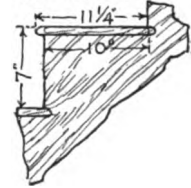


FIG. 201

## Chapter XXXIX

### THE HEXAGONAL PRISM AND FRAME

**T**HIS exercise may be drawn from the objects, if they are at hand. If they cannot readily be had, the drawing may be made from these directions, using the cardboard

plinth made for Chapter XXXVII. The objects should then be drawn from memory.

**The Prism.** — Being the simpler to draw, this object should be taken first, though it should be placed at the bottom of the sheet, on account of its greater horizontal dimensions.

This model is eight inches long, and the diameter of its hexagonal bases is four inches. It is placed so that the bases make angles of sixty degrees with the picture plane. The

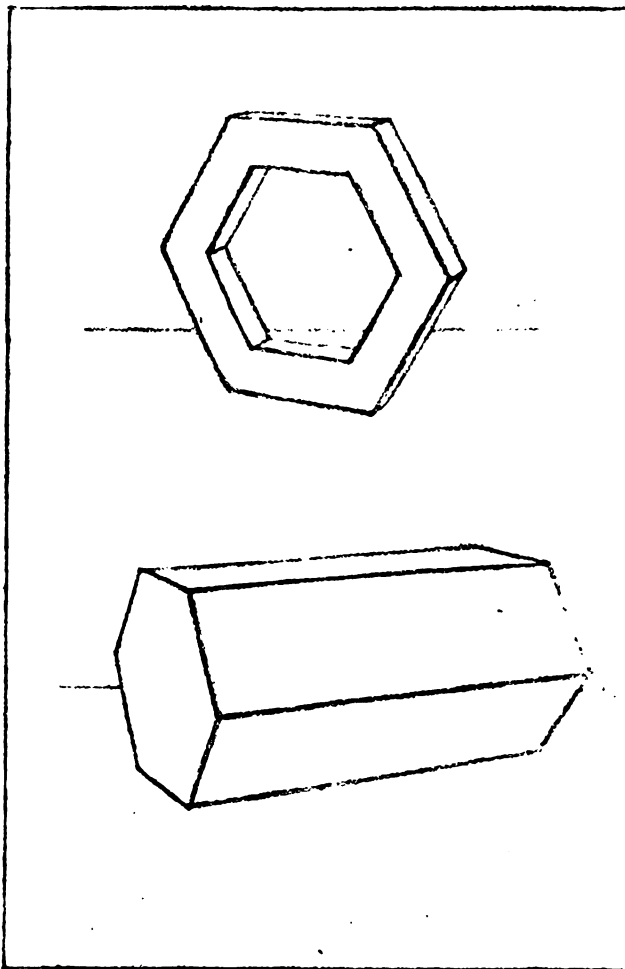


FIG. 202

# THE HEXAGONAL PRISM AND FRAME

dotted lines in Fig. 203 show how the cardboard plinth may be placed in the same position as a help in study.

**The Nearest Vertical Hexagonal Base.** — Sketch the constructive rectangle previously used, noting that its width is foreshortened as much as the most foreshortened side of the cube in Chapter XVII. Set off the third diagonal of the hexagon (**EF**) perspectively on a line vanishing to **VP1** through the rectangle center (as on page 124).

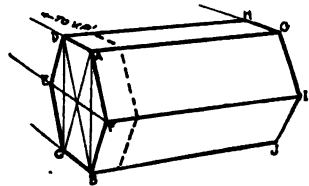
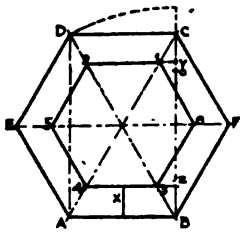


FIG. 203

**The Long Edges of the Prism.** — Take the direction of the nearest upper edge, giving **VP2**. Vanish the other long edges with it, and set off on the one first drawn its apparent length (**AG**). This can be easily estimated by recalling the cube. That is, its *actual* length as given is twice that of the diameter of its base (the near vertical line **AB**). **AG** will therefore be as long as two cubes placed side to side.<sup>1</sup>

**The Further Base.** — For the horizontal top edge of the further base draw a line parallel to the same line in the near one (that is, vanishing in **VP1**), which gives **GH**. For the corner corresponding to **B** in the near base drop a vertical from **G**, giving **J**. The upper oblique edge (**GI**) is parallel to **AF** in the near base, and their vanishing point is **OVP1**, vertically above **VP1**. Another oblique line, from the nearest point, **I**, to the lowest, **J**, completes the prism.



FACE VIEW OF FRAME



SECTION OF FRAME

FIG. 204

**The Hexagonal Frame.** — This model is three inches on a side, and is one inch square in section (Fig. 204). It stands on one rectangular face with its hexagonal faces at an angle of thirty degrees with the picture plane (Fig. 205). For the outer hexagon and the outer thickness proceed as in the prism.

<sup>1</sup> This method is given in a slightly different form under Solutions of Problems, Chapter XVI.





## Chapter XL

### THE TRIANGULAR PRISM AND FRAME — PROBLEM FOR ORIGINAL STUDY

**THE MODELS.** — The prism is eight inches long, and its triangular ends are four inches on a side. The frame is six inches on a side, and one inch square in section. See diagrams, Fig. 206.

**Positions.** — The objects are placed at the usual distance and height, and are drawn separated, as were the models in the last chapter. The prism rests on one long face, with its long edges making angles of thirty degrees with the picture plane. The frame rests on a rectangular face with its triangular faces at thirty degrees with the picture plane.

**Arrangement on the Sheet.** — Two drawings are to be placed on one sheet. The position of the paper (whether with its long edges horizontal or vertical) and the placing of the drawings on the sheet must be such as to produce the most agreeable and satisfactory effect.

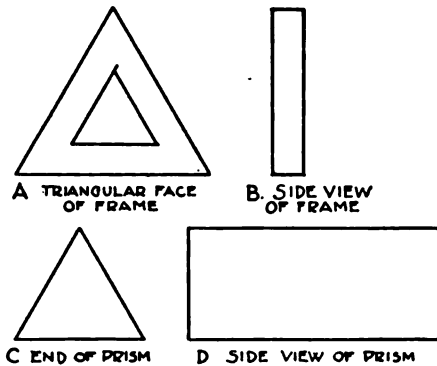
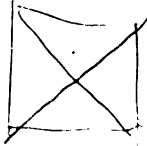


FIG. 206



## Chapter *XLI*

### THE STUDY OF PARALLEL PERSPECTIVE

**F**ROM Chapters XXXIV and XXXV it is seen that interiors follow the law of the cube. This, however, leads to what may seem an inconsistency. Why, it may be asked,

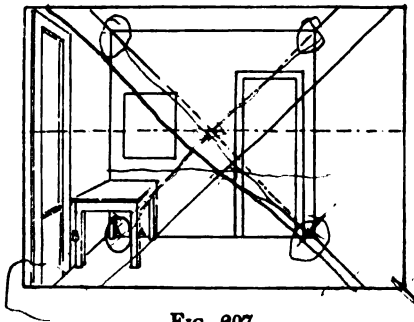


FIG. 207

does the table in Fig. 207 differ from the cube in Fig. 208? In the cube B was made shorter than A because farther into the picture. But in the table B was not drawn shorter than A.

The answer to this is that the table was not studied alone, as was the cube.

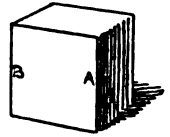
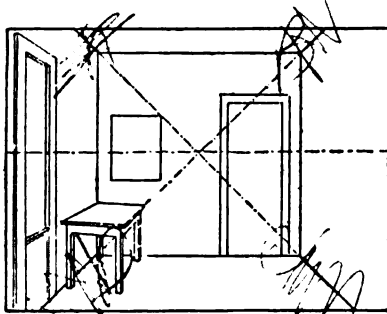


FIG. 208

It was part of a picture in which the dominant part (the back of the room) was parallel to the picture plane. Having drawn the side of the table parallel to the sides of the room, it is absurd (Fig. 209) to draw its end otherwise than parallel with the back of the room. Fig. 207 satisfies the eye and gives a true impression of the room and its contents. Could the room be erased, leaving the table alone, it would present the error shown in Fig. 210. Here it forms the whole picture and its picture plane makes



THE TABLE IS WRONG

FIG. 209

an angle with its ends (see plan in Fig. 210), hence it must be drawn as below.

## STUDY OF PARALLEL PERSPECTIVE

It is undeniable that in Fig. 207 B is farther *from the eye* than A. But since drawing that corner smaller produces the false impression seen in Fig. 209, we are guided by the distance of these points not from the eye, but *from the picture plane*. The picture plane simply forms the best means of attaining our fundamental object—a truthful representation. Hence the necessity of determining the limits of the picture (Fig. 211) and of clearly fixing in mind the central direction of seeing and the picture plane.

Under some conditions, surfaces may even be drawn in their true shape when not quite

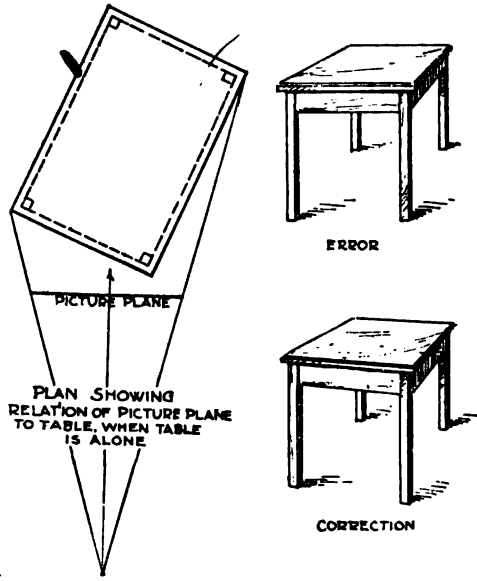


Fig. 210

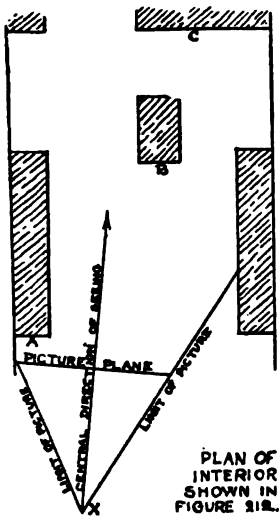


Fig. 211

parallel to the picture plane. In Fig. 211 none of the vertical surfaces, as A, B, and C, are exactly parallel with the picture plane. This is shown to the beholder at *x* by the convergence of the lines at right angles to these surfaces. They vanish a little out of the center of the picture as seen in Fig. 212. Yet if all these vertical surfaces are drawn in perspective (A in Fig. 212) the result is misleading or impossible, and the eye protests. But the drawing is perfectly satisfactory in B, Fig. 212.

A convincing illustration of dominant surfaces parallel to the picture plane is the familiar form of a bureau. With an unbroken top (A in Fig. 213) it is easily drawn like the book and cube. If now the middle drawer is cut out, the remaining

## FREEHAND PERSPECTIVE

small ones are seen to occupy positions similar to that of the table in Fig. 1.

**The Street.**—The street is another example of these conditions. Viewed from the middle of a crosswalk ( $x$  in plan,




FIG. 212

toward the exact middle of the picture does not fall outside of the house fronts. The beholder has passed on to  $y$ , and the conditions are then like those of the interior in Fig. 211.

But if instead of using both sides of the street for our picture, we choose one of the corners, the picture plane for this forms a different angle with the principal surfaces (Fig 214), and must be drawn as shown in Fig. 216.

It may therefore be concluded, that *in any picture having a dominant part parallel with the picture plane and consequently drawn in its true shape, all portions of that picture which are parallel with the picture plane must also be drawn in their true shape.*

(Fig. 214) the fronts of the houses present to the beholder a perspective like that of the interior in Fig. 207. They vanish to the center of the picture, and surfaces at right angles to them are drawn in their true shape. This is done even if the convergence is not

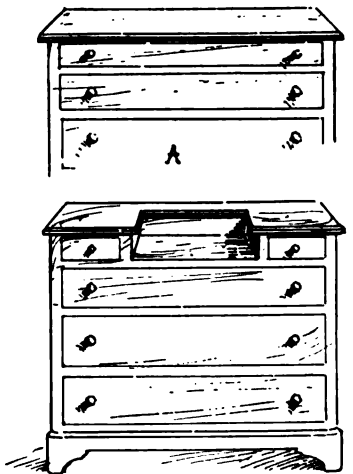


FIG. 213

(Fig. 215), provided it

## STUDY OF PARALLEL PERSPECTIVE

Also, even such dominant parts as are not quite parallel with the picture plane must be drawn in their true shape *in certain cases where drawing them in perspective produces false or misleading results.* Finally, it is of great importance to include in the picture *only what can easily be seen.*

Parallel perspective, as work under such conditions is called, involves no departure in principle from free-hand perspective in general. It is merely an adaptation of perspective methods to certain conditions in the subject.<sup>1</sup>

Space has been given here to a somewhat extended consideration of the subject,

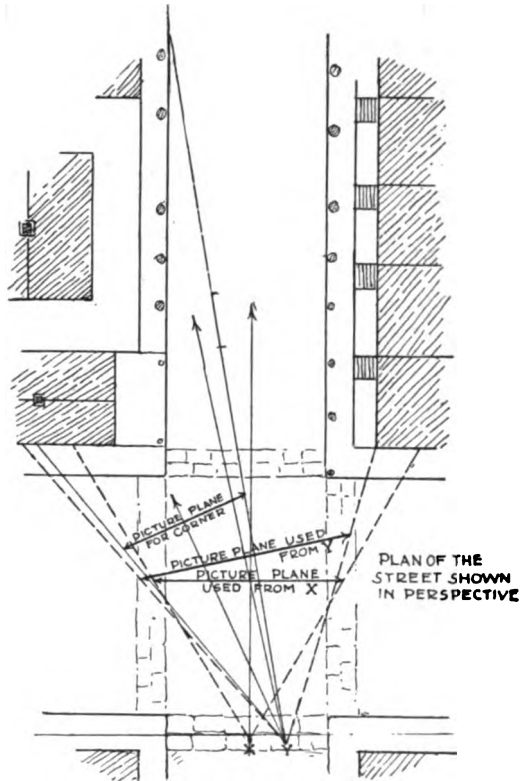


FIG. 214



VIEW OF STREET FROM Y.

FIG. 215

<sup>1</sup> The terms "parallel" and "angular" perspective, though used for lack of better ones, are therefore far from satisfactory.

## FREEHAND PERSPECTIVE

because the confusion concerning it that frequently exists is deemed unnecessary. It has been found that students may be easily led to distinguish when such conditions are present, after which there is no difficulty in dealing with them.



VIEW OF CORNER FROM Y

FIG. 216

## Chapter XLII

### A STREET FROM THE PHOTOGRAPH

**T**HIS exercise (Fig. 217) may be drawn first if judged best, noting carefully the changes made in rendering from the photograph shown in Fig. 218. The student should then select a print of a street and make a drawing from it. All sketches should be thoroughly thought out, having the level of the eye carefully placed, and all the vanishing points located, either actually or mentally. It will probably be necessary to correct some distortions of the camera (see Ch. XLIII).

This drawing should be followed by studies from the street and from memory. Notes and sketches made



FIG. 217



## A STREET FROM THE PHOTOGRAPH

by the student at the place chosen may be used to help this memory work.



FIG. 218

## Chapter XLIII

### EXCEPTIONS TO THE USE OF THE FLAT PICTURE PLANE

**I**T will be observed that in photographs the circular tops of columns near the edges of the picture often appear as slanting ellipses (Fig. 219). And all who have an acquaintance with mechanical perspective will recall that in certain problems the ellipses of cylinders do not work out at right angles to the axis (Fig. 220). While the eye sees objects pictured on the inside of the spherical eyeball, the camera forms its pictures, and mechanical perspective projects its problems on a flat surface. Therefore the camera cannot wholly reproduce objects as seen by the eye, and certain results obtained by mechanical perspective are untrue representations.<sup>1</sup>




FIG. 219

<sup>1</sup> The photographic error has been recognized, and a camera is now made in which a clockwork attachment brings each part of the plate in turn directly facing the part of the subject it is to receive, and gives horizontal ellipses to columns wherever placed in the picture.

## FREEHAND PERSPECTIVE

As for mechanical perspective, though useful in many cases, it has sometimes obscured the real aim of representative drawing.



CYLINDERS AS FOUND BY MECHANICAL PERSPECTIVE. SIDE CYLINDERS UNTRUE AS REPRESENTATIONS.

FIG. 220

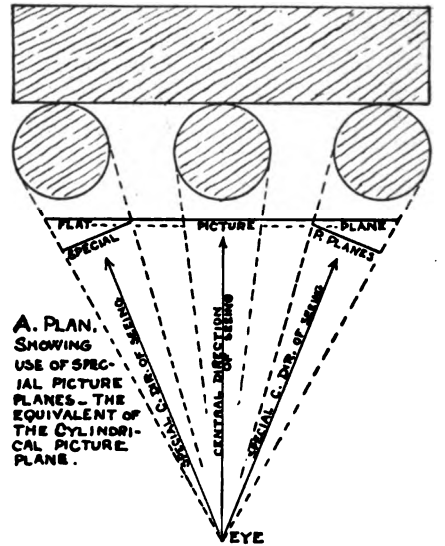
It has even been taught that the flat picture plane should be used for all representative work as in mechanical perspective, logically to the end, regardless of any protest of the eye as to its results. To this error it is sufficient reply to say that the aim of freehand perspective is *the drawing of objects as they appear*; and that the eye never sees a column as in Fig. 219, nor a cylinder as the outer ones in Fig. 220. When, therefore, the use of the flat picture plane produces an untrue drawing, it is evident that an exception must be made in that case.

### The Cylindrical Picture Plane.

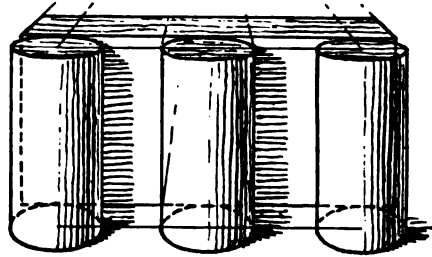
— Looking at Fig. 220, we find that the middle cylinder, which *does* appear right to the eye, extends equally each side of the central direction of seeing, so that the picture plane is parallel to the apparent breadth of the cylinder. By drawing the other cylinders as if each had such a central direction of seeing and such a picture plane of its own (A, Fig. 221) a result is obtained that appears true to the eye (B, Fig. 221).

In other words, *cylindrical objects, however placed, should be*

drawn as if each had such a central direction of seeing and such a picture plane of its own (A, Fig. 221) a result is obtained that appears true to the eye (B, Fig. 221).



A. PLAN. SHOWING USE OF SPECIAL PICTURE PLANES - THE EQUIVALENT OF THE CYLINDRICAL PICTURE PLANE.



B. APPEARANCE OF GROUP AT A, DRAWN BY USE OF SPECIAL - THAT IS, CYLINDRICAL, PLANES.

FIG. 221

## EXCEPTIONS TO FLAT PICTURE PLANE

*drawn as if for those objects alone, the picture plane was bent or rolled into a cylindrical picture plane.* But this does not apply to the straight-line portions of the picture (as the block in Figs. 220 and 221), nor to the placing of the cylindrical parts, nor to their height. These must be determined in the ordinary way, by using the flat picture plane. We only abandon the flat picture plane where we cannot otherwise produce a representation which the eye will accept as true.

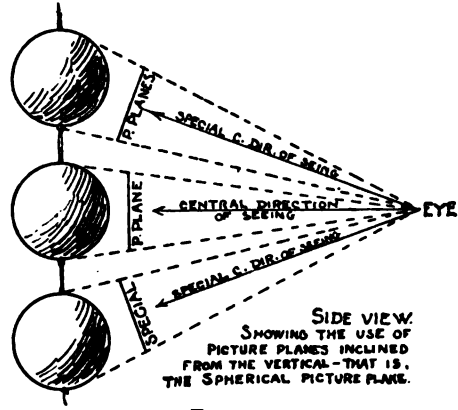


FIG. 222

**The Spherical Picture Plane.**—Another exception occurs in a vertical direction. Thus, the only outline that will truthfully represent a ball to the eye is a circle. To obtain that, we must regard its special central direction of seeing as directed to its middle, not only from side to side (as in case of the cylinder), but from top to bottom also. If the ball is above or below the eye therefore, its special picture plane is slanted accordingly (Fig. 222). In this case the picture plane (again for such objects alone) may be called a Spherical picture plane.



FIG. 223

An example of its application is the case of a model posed higher than the student who is drawing (Fig. 223). The head is foreshortened vertically, and the forehead appears smaller in proportion than the lower and nearer features. At the same time the

## FREEHAND PERSPECTIVE

window beyond that model is drawn on the usual flat picture plane; that is, with its vertical lines vertical, as always.

These distinctions will be found not only necessary, but natural and easy to make;<sup>1</sup> especially if care is taken to include in the picture space *only what the eye can see without noticeably moving the eyeballs* (Ch. XLI). The picture plane should be regarded as limited to what will cover this selected space, and we have no concern with what lies outside of that.

When working from a photograph therefore, as must often be done, such camera distortions as the columns in Fig. 219 should be corrected to agree with what is pictured by the eye. And in freehand work only such truths of mechanical perspective should be used as produce results which the eye confirms as true representations. Where the eye and a train of reasoning are in conflict, the reasoning should be scanned for errors. Unless a drawing *looks* right, it may safely be pronounced *not* right. It may look right, and still be wrong; but if the eye refuses to be satisfied, it is certainly wrong.

<sup>1</sup> So natural and easy, in fact, that space for this explanation is hardly needed, except to guard against false reasoning in the subject.

## Chapter XLIV

### SHADOWS

**W**HILE it is unnecessary for the mastery of freehand sketching to study this subject exhaustively, there are a few simple facts which have been found fundamentally useful in practice, and which may be easily understood.




FIG. 224

To that end the student should follow these explanations carefully, making experiments and sketches as needed. He should then compose and draw a group similar to Fig. 224, also should make other studies involving the use of the truths here developed.

Light may be regarded as composed of an infinite number of rays. From a lamp they extend outward in all directions,

## FREEHAND PERSPECTIVE

forming what may be called a sphere of light. The shadow of the apple on the right of the lamp in Fig. 225 extends toward the right;

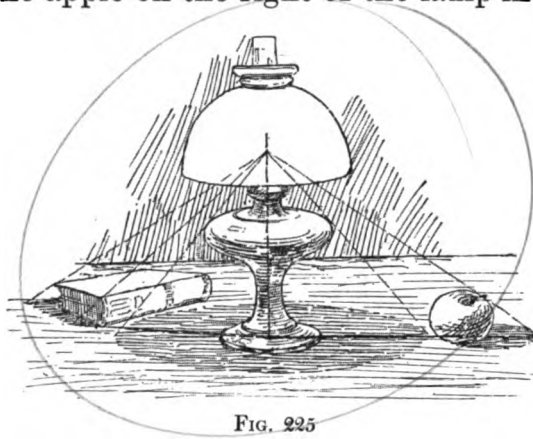


FIG. 225

that of the book on the left in an almost opposite direction. The sun, on the contrary, is so much larger than the earth, and its rays have traveled such an inconceivable distance, that to us they are parallel, as are the paths of falling raindrops. Fig. 226

illustrates this familiar truth. (This, of course, is also true of moonlight.) There are therefore *two classes of shadows*: those cast by the sun, and those produced by near light, as a lamp. Under those formed by the sun may be studied first:

### Small Objects in a Room. —

If a shadow box be placed near and a little back of the window,<sup>1</sup> as shown in Fig. 227, the shadow edge (A-b) cast by the vertical box edge AB will lie on the

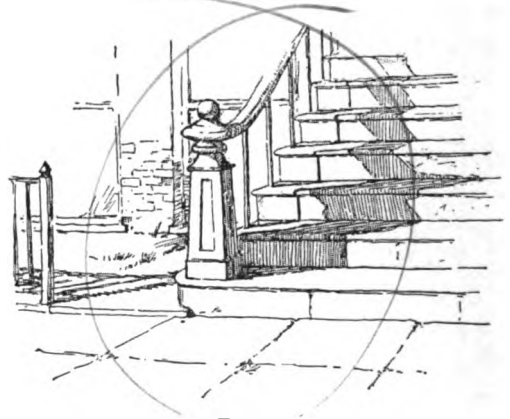


FIG. 226

floor of the box in a line actually parallel to that of the vertical hat-pin. The shadow of a vertical vase (Fig. 228) also casts a shadow in the same direction. (That is, the center line C of its shadow will be parallel with the shadow of AB, both where it falls on the box floor, and on the horizontal book cover.) The

<sup>1</sup> In this case the window is larger than the box; so that as far as the box is concerned the rays of light are parallel. As will be seen later in this chapter, the diffused light from a window causes radiating shadows in the room itself.

## SHADOWS

shadow ( $Fd$ ) of the vertical book corner ( $FD$ ) will be parallel with these lines. If we push the box back or forward they all change direction, becoming more nearly parallel with the picture plane as the box moves forward, and vanishing more steeply if we put it further back of the window. But they always remain actually parallel to each other.

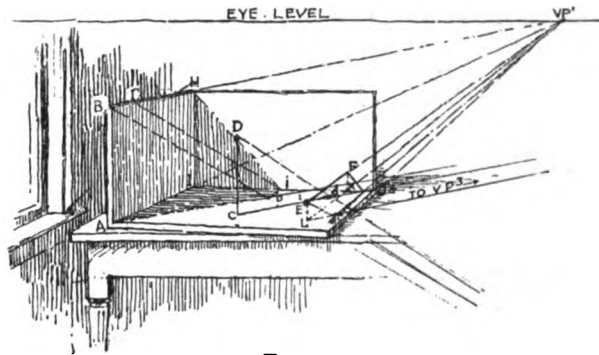


FIG. 227

In the same way we see in Fig. 227 that the shadow of the horizontal edge  $BH$  and of a horizontal hat-pin ( $EF$ ) are actually parallel to each other, both on the back and the floor of the box. Also in Fig. 228 the shadow ( $b-e$ ) falling on the horizontal book cover from the horizontal box edge ( $BE$ ) is parallel to the shadow ( $d-g$ ) falling on the horizontal box surface from the horizontal line  $DG$ .

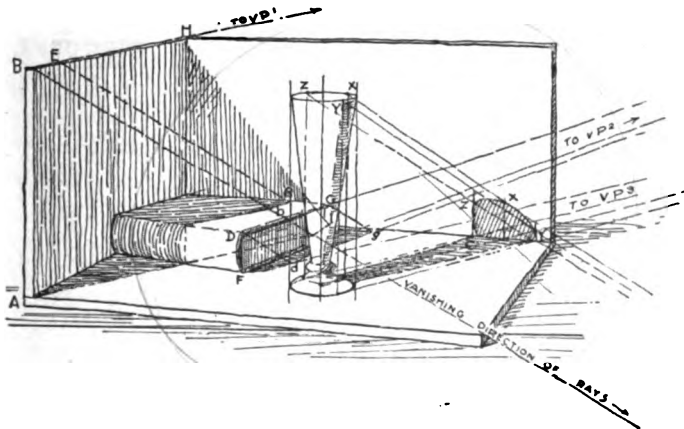


FIG. 228

horizontal book cover from the horizontal box edge ( $BE$ ) is parallel to the shadow ( $d-g$ ) falling on the horizontal box surface from the horizontal line  $DG$ .

Wemaythere-

fore say that *actually parallel lines or objects cast actually parallel shadows on the same or parallel surfaces.*

But in perspective, parallel lines vanish; and if they are horizontal lines they vanish to the level of the eye. We should therefore expect these parallel shadows to also vanish thus, and we find they do vanish, in the same manner as any lines or objects.



## FREEHAND PERSPECTIVE

We next observe (in Fig. 228) that the vertical vase casts a vertical shadow on the vertical back of the box. Then we recall that the horizontal edges BE and DG cast on horizontal surfaces horizontal shadow edges *b-e* and *d-g*. As these edges vanish, their shadows vanish with them to the same point, as any parallel lines would.

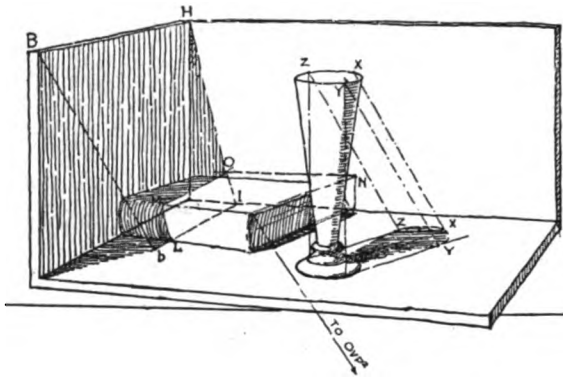


FIG. 229

It thus appears that *when the receiving surface is parallel to the object or line casting the shadow, the shadow will also be parallel to the object or line.*

*It thus appears that when the receiving surface is parallel to the object or line casting the shadow, the shadow will also be parallel to the object or line.*

*when the receiving surface is parallel to the object or line casting the shadow, the shadow will also be parallel to the object or line.*

This brings us to consider how to find the extent of shadows. If the shadow box is lowered from its usual place on the table to the floor, the shadows will be found shorter (Fig. 229). The light, falling more steeply, cuts off the shadows nearer the objects. When the box is lifted back to the table (Fig. 228) the shadows will be seen to lengthen.

With a light ruler or "straight-edge" (Fig. 230), take the actual direction from the hat-pin top (D) to its shadow (*d*) on the floor of the box. Keeping the ruler in the same actual direction, move it to the left till it grazes the top corner (B) of the box. It will be found also to mark the shadow (*b*) of point B.

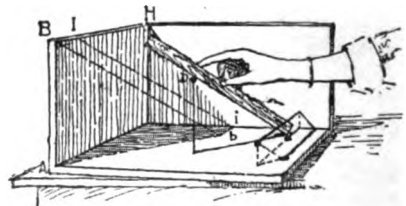


FIG. 230

With a light ruler or "straight-edge" (Fig. 230), take the actual direction from the hat-pin top (D) to its shadow (*d*) on the floor of the box. Keeping the ruler in the same actual direction, move it to the left till it grazes the top corner (B) of the box. It will be found also to mark the shadow (*b*) of point B.

The evident truth is that *the direction of the light-ray from any point in the object marks the same point in its shadow.* Therefore to find the shadow of any point, as of the other hat-pin head (E, Fig. 227) we have only to draw the light-ray from E to where it strikes the receiving surface.

But since in this case the window is nearer than the box, the

## SHADOWS

light-rays are receding slightly, hence must appear to converge a little, like any parallel receding lines. Therefore to draw them, we first find their vanishing point. Imagine one of these rays (as  $D-d$ , Fig. 227) dropped vertically to the floor of the box (as the gable edge in Ch. XXII was dropped). It would then lie in the horizontal shadow line ( $C-d$ ) directly under it, and would vanish in  $VP3$ . When lifted again to its former oblique position ( $D-d$ ) its vanishing point would have moved down in a vertical line from  $VP3$ , and become  $OVP1$ . All other light-rays in this illustration (as  $Bb$  and  $E-e$ ) appear to converge to this vanishing point.

*How to find where the light ray and the receiving surface meet is the next consideration.* In the

case of  $D-d$  we had a vertical line,  $CD$ , and from it a shadow, cut by the light-ray. From  $E$  we can imagine a vertical line, similar to  $CD$ , dropped to the floor of the box. (We can find where this

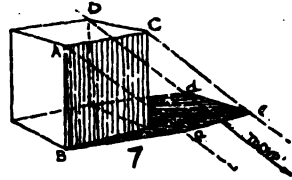


FIG. 231

vertical line will touch the floor by a vertical from  $F$  to the box edge ( $IJ$ ) at point  $K$ , and a vanishing line from  $VP1$  through that point ( $K$ ) to cut the vertical from  $E$  (in  $L$ ). From  $L$  a line actually parallel to the shadow  $C-d$  (vanishing in  $VP3$ ) cuts the light-ray in the desired point,  $e$ . This is essentially the way most shadow points are found: — *by a vertical line from the point on the object to the receiving surface, and from that a shadow line on the receiving surface to cut the light-ray.* In other words we *pass an imaginary vertical plane through the point and the light-ray.* Fig. 231 shows a simple application of these principles. When the cube has been drawn, the direction and length of the shadow edge  $Ba$  may be assumed (or taken if drawing from the object). This gives the direction of the light-ray  $A-a$ . The shadow  $a-c$  vanishes with  $AC$  till cut by the light-ray from  $C$ , and  $c-d$  vanishes with  $CD$ . These points can be tested by vanishing the light-rays from the other corners to  $OVP1$ , thus completing the vertical planes above mentioned.

The shadow of the left horizontal box edge ( $BH$ ) falls partly

## FREEHAND PERSPECTIVE

on the back of the box in a slanting line which may be thus determined. Take the book out (Fig. 227), when it will be seen that the near part of the shadow, beginning at *b*, vanishes on the floor of the box to VP1 till it reaches the box edge in point *i*. From this point to the box corner lies H-*i*, the line in question. Many shadow lines can be found thus, — *by locating any two points in the line.*

Looking again at the shadow of the vase on the back of the box, we observe that the shadow of its horizontal circular top fall-

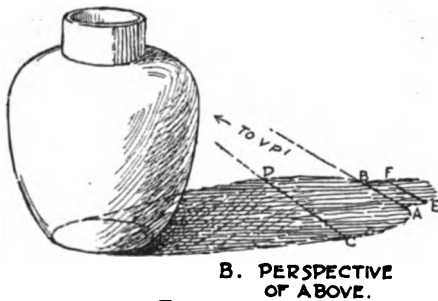
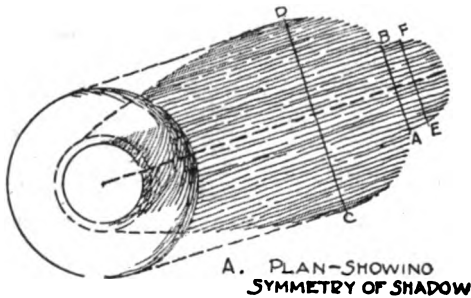


Fig. 232

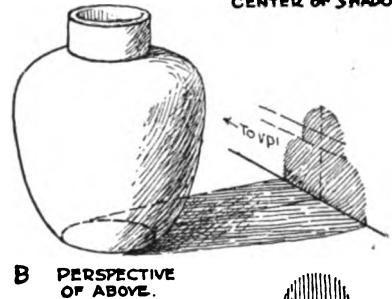
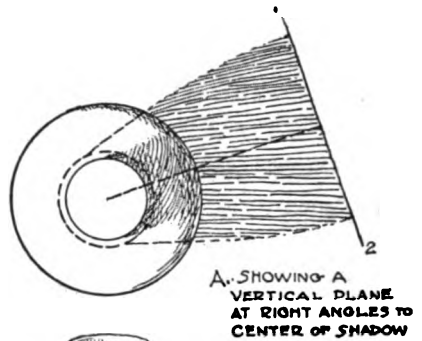


Fig. 233

ing on the back of the box is not a horizontal curve. To understand this, we will begin with the shadow of any vertical cylindrical object on a horizontal surface, as in Fig. 232. It will be found actually symmetrical. In perspective it will be foreshortened (B in Fig. 232); and lines marking its horizontal details (as AB, CD, and EF) will vanish, as would any parallel horizontal lines. If now we move this object toward a vertical surface, *placed so that, viewed from above it makes right angles with the light rays* (as shown in A, Fig. 233), *the shadow on the vertical surface*

## SHADOWS

also will be actually symmetrical; though it may appear fore-shortened, as in this case.

Now if the receiving surface be turned so it is *not* at right angles (viewed from above) with the light (Fig. 234), we get what we observed in Fig. 228, — an *actually one-sided shadow*. The reason for this distortion is made clear from the plan in Fig. 234. The descending light-ray from *y* has farther to travel before striking the receiving surface, hence its shadow, *y*, is lower than the shadow from *z*. Such variations of original shapes are of the same nature in producing beauty (and consequent enjoyment) as theme variations in music. Thus the bottle with shoulders (Fig. 235) acquires a charm from the proximity of its interestingly altered shadow-self which it cannot have alone.

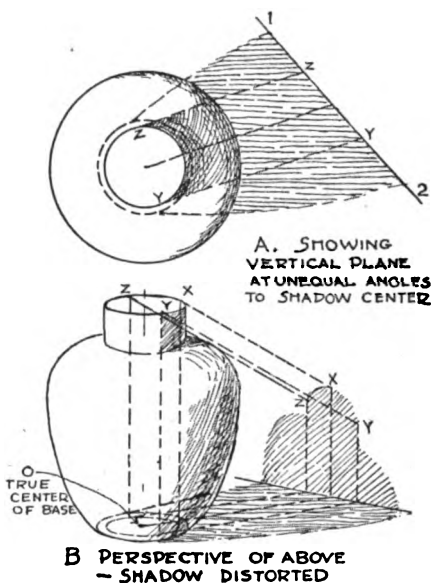


FIG. 234



FIG. 235

of points is seldom needed.

So far the shadows have fallen on flat surfaces, but the shadow of the vertical box edge in Fig. 228 falls partly on the curved book back; and on this it forms a vertical curve — that is, with its ends in a vertical line. The curve is sketched by the

# FREEHAND PERSPECTIVE

eye, though it could be constructed by points. In Fig. 229 the shadow on the book back is cast by a horizontal edge and is therefore an oblique curve. In this case its upper point (M) is found by imagining the book cover continued until it cuts the back of the box in a line from N vanishing with the long box edges. Where the shadow line HI cuts this line (point *o*) will be the farther end of the line on the book cover. This shadow will vanish in VP1, and where it cuts the upper edge of the book back will be M, the upper end of the curve.

The book in Fig. 236 shows the use of points *when the edge casting the shadow is itself oblique*. A vertical line from D to the

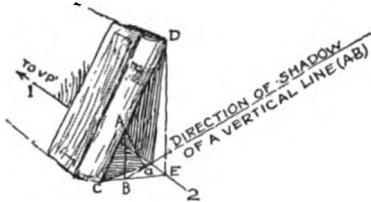


FIG. 236

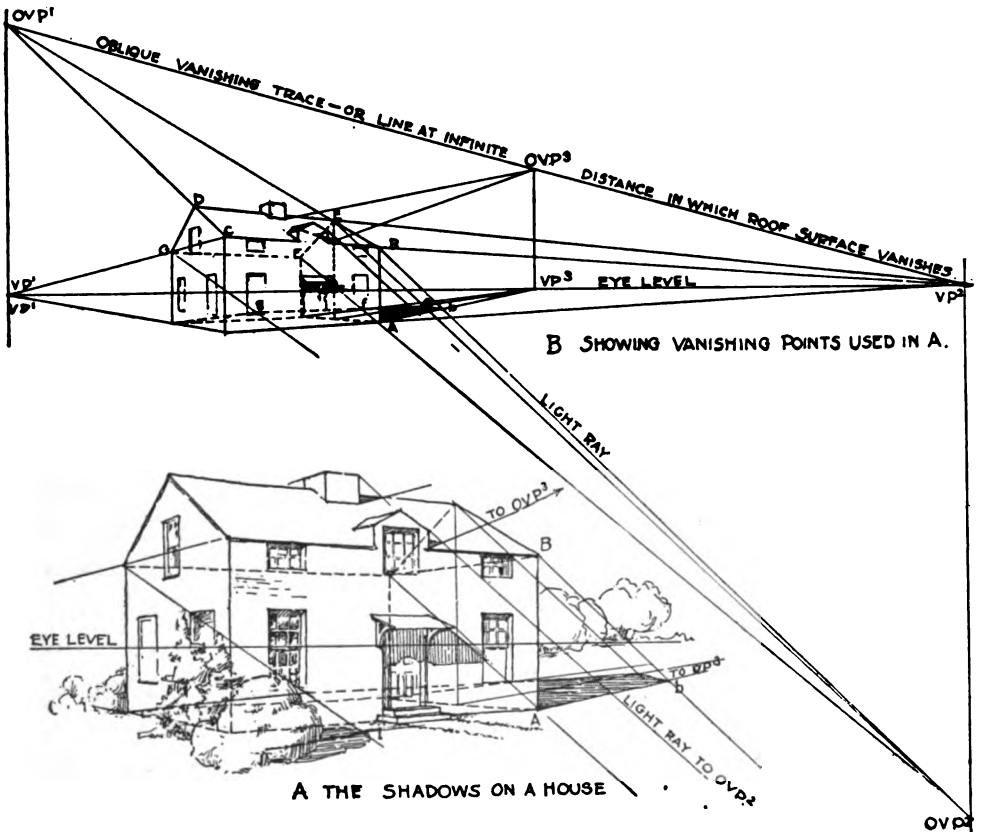


FIG. 237  
150

## SHADOWS

edge 1-2, and a line from that point (E) to C, constructs one vertical plane. The light-ray from point A cuts the shadow-direction of AB at *a*. The shadow of CD travels from C through *a* to the edge 1-2, and from there to D.

**Shadows on a House.** — The truths thus developed apply to out-of-door work, as shown in the house (Fig. 237). Here one new condition is met, — the shadow of the vertical dormer edge falls on the oblique surface of the roof, and hence has an oblique vanishing point. This vanishing point is easily found, as we already have two points in the vanishing trace of the roof, — OVP1 and VP2. The line containing these

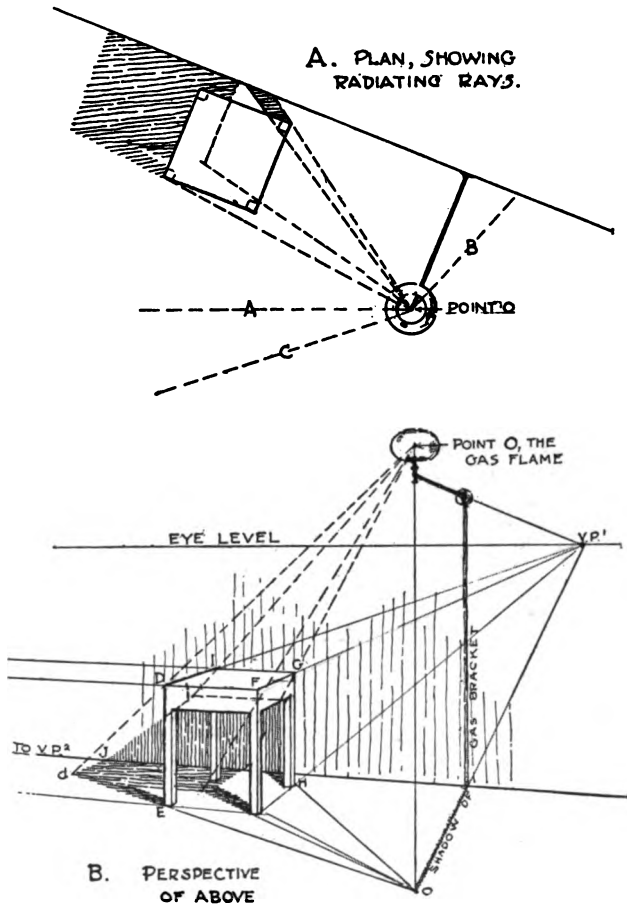


Fig. 238

points is the vanishing trace, not only of the roof, but of the infinite plane containing the roof. Hence the line can be drawn as long as needed — it is really infinite in length. So we have only to draw the trace from OVP1 to VP2, and mark OVP3 on it, vertically over VP2, exactly as we marked OVP1 over VP1.

The shadow of the bush is an instance of the ease with which shadow laws are applied to natural objects. The shadow is sketched

## FREEHAND PERSPECTIVE

freehand; but with much greater certainty for knowing that its center must fall on the ground in the direction of VP3, and that it can extend no farther than its meeting with the ray of light, HI.

**Shadows from a Lamp.**— The radiating rays from an artificial light can all be contained in an infinite number of radiating vertical planes through the light itself. Some of these radiating planes are seen in the plan (OA, OB and others in Fig. 238).




FIG. 239

E). The shadow of  $Gh$  falls on the floor in the direction of  $o-H$  till it reaches the wall. On the vertical wall, the shadow of the vertical  $GH$  is also vertical. It is ended by the light-ray from  $O$  through  $G$ . The shadow of the edge  $GI$  will be parallel to it, and like it will appear as a vanishing line to  $VP1$ . The near part ( $d-j$ ) of the shadow of  $DI$  will be parallel to  $DI$ , and will vanish to  $VP1$  till it reaches the wall at  $J$ . A line from  $J$  to  $I$  completes the shadow of  $DI$ .

**Shadows in an Interior.**— These are partly like the lamp shadows. For instance the shadow on the couch in Fig. 239

## SHADOWS

extends in an almost opposite direction from that of the chair. These shadows are produced by the diffused daylight radiating from the window. On the other hand a patch of sunlight falling through the window would follow the laws of sunlight generally. The edges  $a-b$  and  $c-d$  vanish with AB and CD, while points  $a$  and  $b$  are marked by the meeting of light-rays from A and B with shadows of verticals from A and B. In this case the light comes from beyond the window, hence the light-rays recede up, and appear to converge or vanish in that direction.



## Chapter XLV

### OUT-OF-DOORS WORK

**A**LTHOUGH the same perspective principles apply to out-of-doors work the conditions of the study vary, and some cases need explanation.

**Vanishing Points.**— In drawing the house (Ch. XXII), we placed ourselves proportionately in relation to the small cube as we should naturally be in relation to the real house. Thus the sixteen inches of distance from the eye, or four times the

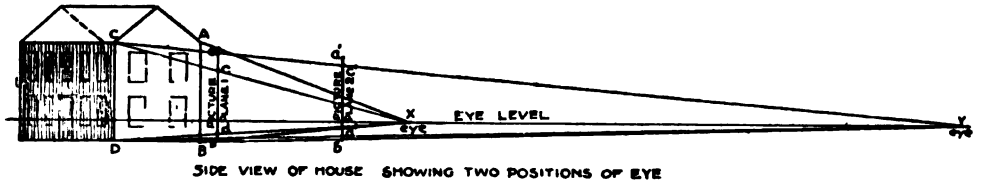


Fig. 240

height of the cube, was equivalent to only four times the height of a twenty-foot house, or eighty feet—less than five rods. At this short distance the vanishing of the lines is very decided; but at a half mile from the same house, those lines appear nearly horizontal. The reason for it is seen in Fig. 240. When the eye is near the house (at  $x$ ) the apparent difference in length between the edges  $AB$  and  $CD$  is greater than when the eye is at  $y$ . This is shown on picture plane 1 by  $ab$  and  $cd$ , and on picture plane 2 by  $a'o'$  and  $c'd'$ . The horizontal edges of the house as seen by the eye from  $x$  would therefore vanish more steeply, causing the vanishing point to fall nearer, as shown in A, Fig. 241. As seen from  $y$ , the horizontal edges are less steep; therefore in B the vanishing points fall much farther away.

It follows, therefore, that *the greater the distance of the eye*

## OUT-OF-DOORS WORK

from an object, the farther to right and left will the vanishing points fall. When the house is a half mile away they fall so far to left and right that its horizontal lines appear almost level. Hence the beginner in landscape work, accustomed only to near objects, is sometimes puzzled, because distant houses seem to have no perspective. And the landscape artist who has "no




FIG. 241

trouble with houses" in the distance may shrink from attempting them in the foreground.

**Size of Objects Seen.**—The image formed on the retina of the eye is always exceedingly small, and with distant objects becomes microscopic. All mental picturing of the size of objects proceeds from our mental *knowledge* of their actual dimensions. Size judged from seeing alone can be but a matter of comparison. This is easily proved by asking two persons how large the moon appears to them. Here we have an object whose real size and distance are so great as to be no guide in comparison with other objects and it will probably appear of a different size to each person. There is consequently no such thing as the drawing of objects "the size they appear." *Size in drawing is merely relative; and the scale on which a drawing is made is wholly a matter of choice.* We may choose to make a drawing what is termed "actual size," but this means that we regulate its size by a mental knowledge obtained either from measuring in the ordinary way, or by putting our sketch back by the object to compare them by the eye.

The absolute size of objects varies so much, also, that unless the picture contains something the size of which is well known

## FREEHAND PERSPECTIVE

and but little variable, we cannot be sure of the sizes represented. The human figure serves best for such a standard, but some objects always adjusted to the human figure in size, as steps, and often doors, will answer in its place.



FIG. 242

directly under it to the eye level will contain between them his height above the water all the way to their vanishing point. If we wish to know, for instance, whether the door on the left is large enough, we have only to draw horizontal lines from its top and from a point directly under it on the plane of the water continued. Where this water line would cut the water line from



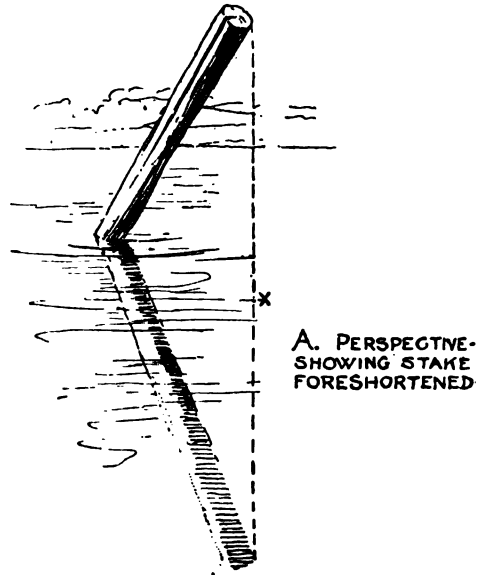


FIG. 243

## OUT-OF-DOORS WORK

the figure to the vanishing point a vertical line is erected, on which the two heights can be compared.

**Reflections.** — If a mirror be laid on a table, and a cup placed on it (Fig. 243), the reflection will appear precisely like the cup reversed, with its bottom resting against the bottom of the real cup. The reflection will not present to the eye the same shape as the real cup, for besides being reversed it is farther below the eye, making its inside invisible while its base is covered by that of the real cup. We can also see farther around on its flaring



B. SIDE VIEW OF STAKE - SHOWING HOW ITS FORESHORTENING OCCURS.

FIG. 244

surface, because its decrease of diameter is toward the eye level, while in the actual object it is away from the eye level.

Now since it is like the cup reversed we see that any point (as A) in the cup, must be reflected directly under itself. So a stake, thrust into a pool of still water (Fig. 244), will produce a reflection like itself reversed;<sup>1</sup> and each point in the reflection will be directly under the same point in the real stake.

<sup>1</sup> In this case *appearing longer* than the real stake, as explained a few pages later.

## FREEHAND PERSPECTIVE

It is therefore evident that *in case of reflections on a horizontal surface, the image formed must be vertically under the reality.*



WRONG. REFLECTIONS NOT VERTICALLY UNDER OBJECTS REFLECTED. WATER APPEARS SLOPING—NOT LEVEL.

FIG. 245

Consequently, as long as the reflecting surface remains horizontal, reflections on it cannot be thrown to one side, but must be shown directly under the real objects, even if the reflecting surface be broken (as in Fig. 242). And if in drawing reflections we represent them out of the vertical (Fig. 245) the reflecting surface (in this case the water) appears to be sloping, like rapids in a river. We may therefore take as our rule that *reflections are invariably like the reflected object reversed on the reflecting plane.*

**When the Object is Separated from the Reflecting Surface. —** In Fig. 246 the bungalow is separated from the reflecting




FIG. 246

## OUT-OF-DOORS WORK

surface (the water) by a high bank. But by using a water line of the boathouse (which stands parallel to it and directly on the water), the points (A, B, and C) where the bungalow edges continued would strike the plane of the water can be closely approximated. From there the points (*a*, *b*, *c*, and *d*) for the reflection of the bungalow are measured vertically.

Even if we had not the boathouse to give parallel vanishing lines on the water, the necessary points (A, B, and C) could be estimated with sufficient accuracy after a little experience. The main thing to remember is that it is on the reflecting surface *or on its plane continued* that the object is reversed in its reflection.

**Reflections on Vertical Surfaces.** — With reflections on vertical surfaces the problem is very simple. In Fig. 247 the box appears reversed as far back of the mirror surface (the thickness of its frame) as it actually stands in front of it.

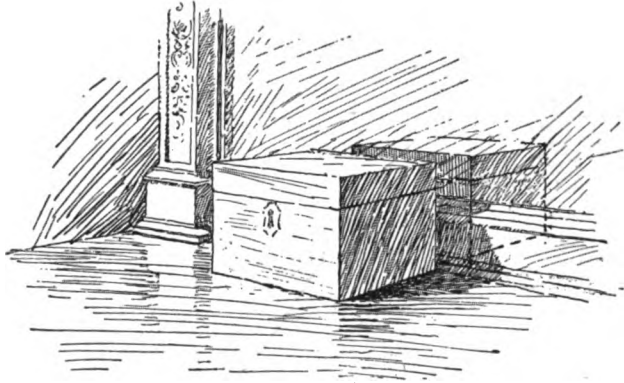


FIG. 247

**Length of the Reflection.** — The vertical length of the reflection, while the reflecting surface is unbroken (as in Fig. 243) is actually the

same as that of the real subject. This does not mean that the reflection will always *appear* of the same vertical length as the object, as that depends on its position and on the location of the point from which it is viewed. In Fig. 244 the stake is seen from a higher point and leans toward the beholder. It is consequently seen foreshortened, as the roundness of its top indicates. The reflection, being reversed, appears practically in its true length. A point (*x*) on the surface of the water directly under the top, appears lower than where the stake enters the water, because nearer the eye. Cases like the familiar "silver

## FREEHAND PERSPECTIVE

path" of the moon in rippling water, or like Fig. 242, where the reflections of upright objects appear lengthened vertically as well as broken, are caused by the many curved surfaces of the waves on which successive bits of the reflection fall.

**Use of the Finder.** — Nowhere will the finder (Ch. VIII) be of more use than in out-of-doors work. The difference in distance between the near and far objects in a landscape is so great, that the beginner finds it hard to realize how much difference he must make in size. The finder serves as a measuring unit for these differences, besides being invaluable as an aid in selection.

# SOLUTIONS OF PROBLEMS

## CHAPTER XI

### THE CYLINDER CONE AND BALL

**T**HE Cone. — After the cylinder is drawn, the base of the cone is next placed. This is actually a circle, and of the same size as the cylinder base. Its position will be clear from the plan (Fig.

249). In perspective it is best placed by its true center. If the cone were moved on the ground around and touching the cylinder, this center would describe a circle, twice the diameter of the cylinder base, and equally distant at every point from the cylinder. This circle is sketched in perspective (Fig. 250) as an ellipse (see Chs. IV and XX). The true center for the base of the cone is placed on this ellipse (at O). From this true center a ver-

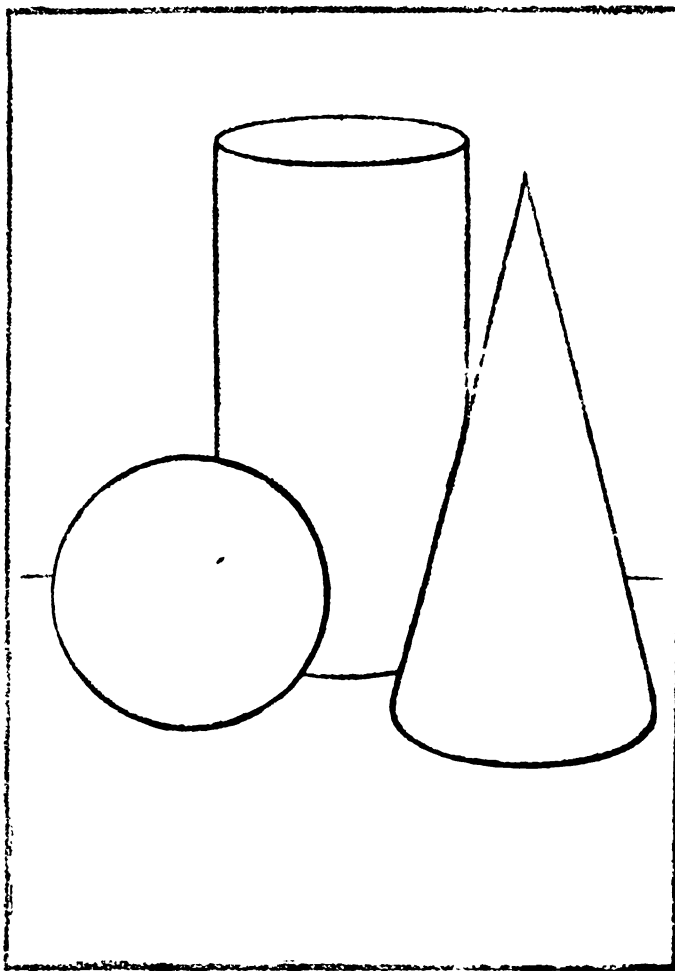


FIG. 248



## FREEHAND PERSPECTIVE

tical line of indefinite length may be erected, on which to set off the axis of the cone. Its height, being actually the same as that of the cylinder, will appear slightly greater because nearer the eye. At the

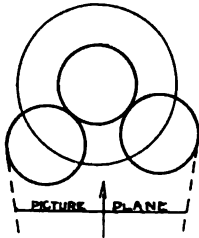


FIG. 249

same time its apex (F), being nearer, cannot appear quite so high on the paper as even the nearest edge of the cylinder top.<sup>1</sup> Through its lower end (O) the real diameter of its circular base passes. Being at the same distance into the picture as the axis, and like it parallel with the picture plane, it appears in its true proportion to the axis (one half). It is therefore so set off, equally on each side of O, giving AB. The base of the cone, though actually of the same size as the cylinder, will *appear* a little larger (and also a little rounder), because nearer. The short diameter of this base (CD) is therefore set off greater than that of the cylinder base, remembering that as O is the *real* center, DO must be larger than CO. The ellipse is then sketched through the four points A, B, C, and D, taking care to have it touch the base of the cylinder, and to make the greatest length *not* on AB, but at a point a little in front, *on the apparent middle from front to back* — that is, on the long diameter (the light line in front of AB). The cone is completed by drawing its sides from the apex tangentially to this elliptical base.

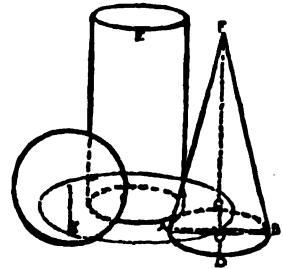


FIG. 250

**The Ball.** — If the ball be rolled about and touching the cylinder it will follow the same path as the center of the cone base, so that its resting point will always be somewhere in the ellipse representing that path (its center being always vertically above the resting point). We should therefore mark some point in the large ellipse (in this case *x*) for the resting point of the ball. If we stoop to bring the eye nearly

<sup>1</sup> Being *actually* of the same height, they lie in the same horizontal plane. This plane, being below the level of the eye, appears to recede upward, as the table does. This will be better understood if a sheet of paper is laid on the tops of the two objects, when it can be seen that it appears to recede upward. The following chapter will further illustrate this truth.

## SOLUTIONS OF PROBLEMS

to the table level, and look at the ball, we shall see it resting on this spot. But if we return to the point from which the group was to be viewed, we shall find this point hidden by the projecting mass of the ball. The circle which represents the boundary of the ball is therefore drawn with its lower edge a little below  $x$ , and its center vertically over that point.

### CHAPTER XV

#### THE CYLINDER AND THE RECTANGULAR BLOCK

**The Block.** — This should be drawn first. Since its front face is parallel with the picture plane, it will appear in its true shape, and the block ends will vanish in VP1 like the book ends in Chapter XII. In setting off the apparent width of the top, we remember that it is actually narrower in proportion than the book cover.

**The Cylinder.** — The cylinder rests against this block (side view, Fig. 252), so we can measure the height of its back (AB, Fig. 253) actually, making it twice the height of the block

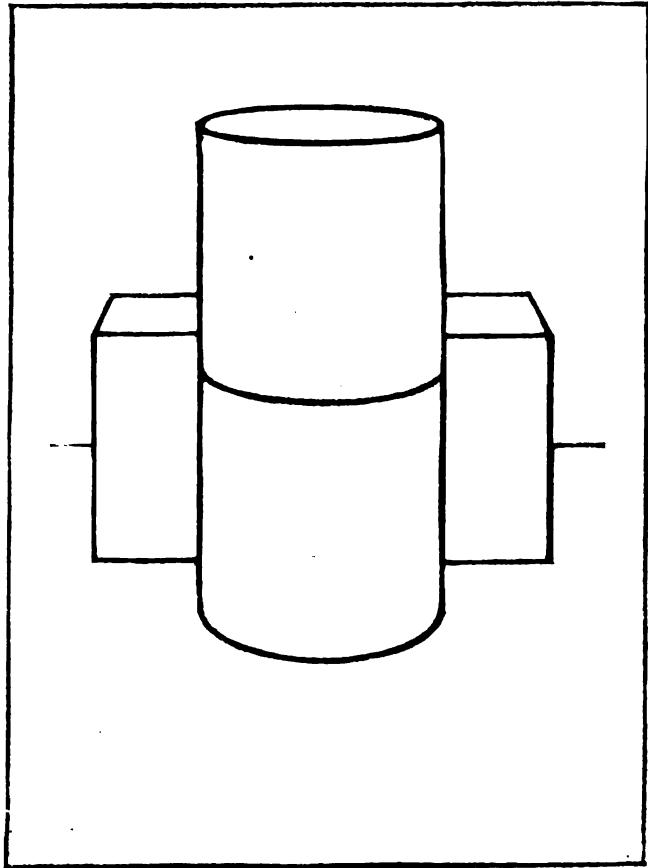
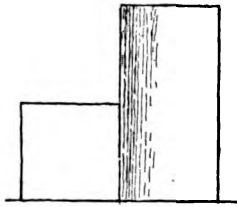


FIG. 251

## FREEHAND PERSPECTIVE

front. The lower base is actually the same in width as the block, but being nearer the eye it will appear larger. Just how much can be easily determined. Draw the invisible lines of the block (the dotted lines in



SIDE VIEW OF GROUP.  
FIG. 252

Fig. 253), and carry the diagonal of one half ( $x$ ) forward in a line of indefinite length. Cut this by line  $y$  of the invisible edge of the block. From the point ( $C$ ) so found draw line  $z$  to the right, to cut another invisible edge continued. This constructs another rectangle the actual size of the side of the block, but nearer, hence appearing larger.<sup>1</sup> The middle of the front of this rectangle (point  $D$ ) will be the front of the base of the cylinder. Its back

will be  $A$ , and its long diameter,  $EF$ , can be set off on a line sketched half way between this front and back, marking  $E$  and  $F$  half way between  $AD$  and the ends of the construction rectangle. Through these four points the bottom ellipse is drawn.

For the top ellipse a similar rectangle can be constructed directly above it. This will give a much more foreshortened ellipse, as would be expected. The back and front of the middle ellipse are drawn as directed in Chapter IV.

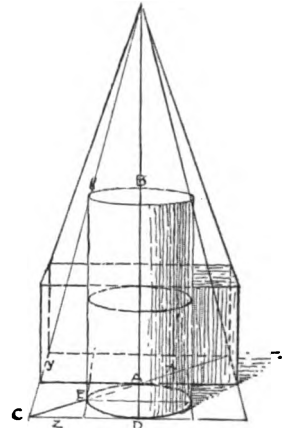


FIG. 253

## CHAPTER XXVI

### THE SQUARE FRAME LEANING ON A RECTANGULAR BLOCK

**The Rectangular Block.** — This solid is drawn in the same manner as the book similarly placed. Recall that it is equal to two cubes, as shown in Fig. 255. Here a diagonal of the first cube measures the

<sup>1</sup> This use of the diagonal for measuring will be found in Chapters XXII, XXV, and others.





## SOLUTIONS OF PROBLEMS

ward of the corners indefinitely for a short distance. The foreshortening of these edges (actually one sixth of the long edges of the square) will be much greater than that of the long edges; and one may be set off accordingly, as at I. From this corner a horizontal edge vanishes to VP2, and a long oblique one to OVP1, giving points J and K where they cross the thickness edges. From K the other horizontal edge vanishes again to VP2 and from J the other long oblique one to OVP1, completing the square.

**The Inner Square.** — On this we may draw the inner square and its thickness as in Chapter XXIV, remembering that the sixths to be measured on IK are *perspective* sixths; and that since IK does not vanish much, the difference in their apparent size is very slight.

### CHAPTER XL

**The Triangular Prism.** — This solid is easily constructed by the use of the cube (see dotted lines). The length of AC is found by the diagonal (ED) of one side of this imaginary cube, DF being made equal to DG (p. 165). The steps in Chapter XXII illustrate this method. The end view shows how the triangle is related in shape to the square face of the cube. Its vertical center line is located by the diagonals of the square, and the height of its apex is measured to  $x$  on the near vertical edge of the cube (AE).

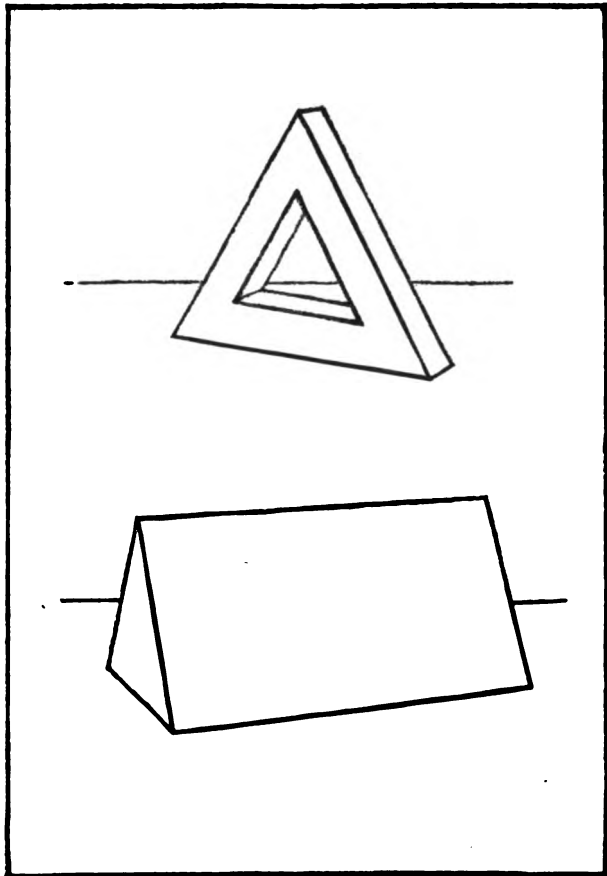


FIG. 260



# INDEX

- AIMS of perspective, drawing objects as they appear, 140**  
learning to see, xii  
to acquire artistic judgment, 80, 83, 120
- Apparent size of objects, according to distance, xi, 156**  
in out-of-door work, 155  
in relation to other parts of picture, 108  
relative only, 6, 155
- Arch, errors in drawing, 99**  
pointed and other forms, 104  
round, 99, 103-104
- Artistic judgment, 80, 83, 120**
- Artistic rendering, book, 59**  
buildings, 83  
glass, 25, 28, 30  
rose jar, 17
- BACKGROUND, subordination of objects in, fan, 33**  
leaning bowl, 26  
plate, 30
- Bases of cylindrical objects, see Foot**  
always partly visible, 47  
location on horizontal surfaces, 29, 30, 32, 161-162
- Benefit of perspective study, acquiring of artistic judgment, 80, 83, 120**  
learning to see correctly, xii
- Book, artistic rendering of, 59**  
at angles to picture plane, 58-60  
back of, 44  
clasp of, 44  
cover thickness, 44  
in two positions, 43, 44  
margins, 40, 41  
projection of covers, 44  
use of pencils to show convergence of lines, 37  
use of strings, 38, 39  
vertical edges, 60  
with back parallel to face, 38-42  
with cylindrical object, 46-47
- Books, two, at different angles to the picture plane, 61, 62**  
with a cylindrical object, 67, 68
- Boundary, movable, 16, 17, 21**  
tangential to ellipses, 13, 17
- Buildings, camera distortions in, 139, 142**  
few vanishing points for, 84  
from photograph or print, 81  
house, the, 69-80; *see* House  
round arch, the, 99, 103  
round window, the, 100, 101  
spire or tower, 90  
type forms useful in, 85, 88
- CAMERA distortions, 139, 142**
- Carrying lines "around a corner," 86, 130**
- Central direction of seeing, alluded to, 10, 140**  
explained, 6  
moves with changed picture center, 46
- Chair, the study of, 118-120**
- Circle, actual center of, 63; see Ellipse**  
concentric circles, 14, 63-66  
location of its center in ellipse, 15, 65  
only position in which seen as circle, xii  
seen obliquely, 9
- Circular frame within square frame, 96-99**  
application of its principles, 99; *see* Cylindrical objects not vertical
- Clock, 102**
- Color, in buildings, 83**  
of book, 59  
on rose jar, 17
- Composition, cylinder and cylindrical object, 12**  
cylindrical objects grouped, 26; with books, 68  
in selecting from interior, 112, 115; from photograph of building, 81
- Concentric circles, 14**  
with square, 63-66
- Cone model, 18**
- Cone principle, 19**
- Cover of teapot, 28**



## INDEX

- Cream jug, foot, 22  
 handle, 20  
 ornament, 23  
 spout, 22  
 study of, 20-23
- Cube, at 45° with picture plane, 53, 56  
 at 30° and 60° with picture plane, 56  
 making the drawing, 54  
 order of drawing edges, 54  
 proportions used in estimating other  
 objects, 51, 86, 129, 164-165,  
 167-168  
 recession of horizontal surfaces to eye  
 level, 51  
 relation of foreshortening to vanish-  
 ing of edges, 50, 51  
 study of, 48-52  
 taking direction of edges with pencil,  
 55  
 tests of vanishing lines by string and  
 by eye, 56; on blackboard, 57
- Cylinder, errors in ellipses of, 14  
 hollow, the, 14, 15  
 inner cylinder, 14  
 models for, 8, 14  
 perspectively equal divisions, 15  
 position of model, 13  
 roundness of ellipses, 14-16  
 sides tangential to ellipses, 13  
 study of, 12-15  
 symmetry of ellipses, 15  
 true diameter of circle, 15
- Cylindrical objects grouped, 26-28
- Cylindrical objects not vertical, 92-94  
 application of principle, 94  
 other examples, button on cord, 19;  
 circular frame, 96-99; clock,  
 102; flower pots, 95; leaning  
 bowl, 27; luncheon carrier, 32;  
 round arches, 99, 103-104; round  
 window, 100, 101  
 symmetry of appearance, 93-94  
 test for drawing of, 94, 95
- Cylindrical objects with fruit, 29, 30
- Cylindrical picture plane, 140-141
- DIAGONALS**, use for measuring, concentric  
 circles, 65, 66  
 door in room, 108  
 square frame, 86  
 square plinth, 89
- Drawing from a description, xii; *see* Prob-  
 lems
- EARS** of teapot, 28
- Ellipse, at right angles to axis in cylindrical  
 objects, 93-94  
 common errors in, 14  
 diameters of, 9, 15  
 drawn entire first, 14, 15  
 from concentric circles, 14, 63-66  
 measurement on its diameters, 14, 15  
 position of hand in drawing, 11  
 practicing, 10, 11  
 roundness according to position, 9, 10,  
 13-15  
 study of, 8-11  
 symmetry, 9, 15  
 tangential to boundary lines, 13, 15, 17  
 test of shape, 9  
 true diameter of circle, 15  
 varying curvature of boundary line, 9
- Exceptions to the use of the flat picture  
 plane, 139-142  
 cylindrical picture plane, 140-141  
 spherical picture plane, 141-142
- Eye level, explained, 52  
 finding, 39, 40  
 importance, 40  
 way of using 39
- FAN**, 33
- Finder, 26, 67, 160
- Flower pots, 95
- Foot of cylindrical objects, at least partly  
 visible, 47  
 of cream jug, 22, 23  
 of rose jar, 16, 17
- Foreshortening, xi, 10
- Freehand sketching defined, xii
- Freehand work entirely, 3
- Fruit grouped with cylindrical objects, 29-  
 30
- Foundation truths of perspective, two, xi
- GEOMETRIC** solids, omitted at the teacher's  
 discretion, 85, *note*
- Geometric measurements, obtained per-  
 spectively, 66, 108
- Glass, bowl, 25  
 pitcher, 30
- HANDLE**, cream jug, 20-22
- Hexagonal plinth, application of study,  
 126-127  
 test for, 124-125  
 two positions, 121-125

## INDEX

- Hexagonal prism and frame, 128-130  
 estimating length of prism, 129
- Horizontal surfaces foreshortened, 37, 40, 41
- Horizontal surfaces recede to eye level, 51
- Horizontal vanishing edges, 37-39, 50
- House, 69-80  
 chimney, 76  
 dormer window, 79  
 eaves projections, 74  
 "L" part, 75  
 model, 69  
 porch, 75  
 roof, 70-73  
 steps, 78  
 windows and doors, 75-76
- How much to include in the picture, 112
- INTERIORS, at angles to picture plane, 110-113  
 ceiling, little or none shown, 115  
 door in an interior, 107  
 from memory, 106 and *note*  
 further studies of, 114-116  
 lines must not point to corners, 109, 116  
 parallel to picture plane, 105-109, 132, 133  
 picture on wall, 106  
 relation of subject-space to picture plane, 111  
 selection of subject-space, 110  
 stool, 108  
 with tiled floor, 126-127
- KNOB of teapot cover, 28
- LAMP shade, 18, 19
- Line, directions for drawing, 1, 2  
 expressive, 17  
 texture of, 1
- Lines of the picture must not make equal angles, 115  
 nor run to corners of margin, 109, 116
- MARGIN of picture, 1, 13  
 cutting the group, 27, *illus.*, 28, 30  
 moving, to improve picture, 116  
 partial, 116
- Margins, of the book, 40, 41
- Materials, pencil and paper, 1  
 models, 2; *see* Models
- Measuring, by the diagonal, 65, 86, 89, 107-108  
 distance into the picture, 65-66  
 height within the picture, 90, 108  
 only relative, 6, 66
- Measurements obtained geometrically can be so obtained perspectively, 66, 107-108, 122-123, 164-165, 167-168
- Mechanical perspective, value alluded to, 140  
 errors of, 139  
 correction of, 140  
 limitations of, 142
- Memory work, conditions of, 31  
 from interiors, 106  
 group of objects from, 31-32  
 less laborious, *note*, 106  
 necessity for, xii  
 specially advised, 43, 53, 58, 67
- Methods, their subsequent use in practical work, xii, 101
- Models, in general, 2  
 making, cone, 18, 19; cylinder, 8; cube, 49; rectangular block, 48; hexagonal plinth, 121; triangular prism, 131  
 position for drawing, 2
- OBLIQUE vanishing lines, chair, 119  
 dormer, 80  
 hexagonal frame, 129, 130  
 light rays, 147  
 roof of house, 72  
 shadow on roof, 151
- Obstacle to mastery of perspective, xii
- Ornament, constructive principles of, 23  
 on Japanese luncheon carrier, 32, 33  
 rendering of, 17  
 use in composition, 13
- Out-of-doors work, 154-160  
 greater distance of vanishing points, 154-155  
 reflections, 156-160; *see* Reflections  
 size of objects, 155
- PARALLEL retreating lines, convergence of, 40, 50
- Parallel retreating horizontal lines, meeting at eye level, 50, 93
- Parallel perspective, bureau, 134  
 interiors, 105-109, 132-133  
 street, 134, 136-137  
 term "parallel" unsatisfactory, 135, *note*

## INDEX

- Pencil measurement, difficulties of, 6  
essential requirements for, 6  
gives relative size only, 6  
of a door, 7  
of the book, 39, 40  
of the cube, 55, 56  
of the ellipse, 13  
on a window-pane, 5  
on the picture plane, 7  
study of, 4-7
- Picture plane, different for each picture, 46, 113  
exceptions to use of flat picture plane, 139-142  
method of using, 7  
position relative to central direction of seeing, 6  
relation to group of objects, 46  
relation to subject in drawing interior, 110-112  
study of, 4-7
- Position, for drawing, 1  
of hand for ellipses, 11; for lines, 1-2  
of models, 2
- Practical use of methods, xii, 101.
- Practice, of ellipses, 11  
of lines, 1, 2
- Principles of perspective, two foundation, xi
- Problems, clock, 102  
conditions, general, 34; special, 102  
cylinder, cone and ball, 34, 161-163  
reasons for giving, xii  
rectangular block and cylinder, 48, 163  
square frame leaning on block, 91, 164  
triangular prism and frame, 131, 167
- Profile lines, 21, 22
- QUATREFOIL, 101
- RAILROAD track, illustrates vanishing lines, 41, 42
- Reflections, lengthened by waves, 160  
length of vertical, 159, 160  
on a horizontal surface, 156-158  
on a vertical surface, 159  
when separated from reflecting surface, 158
- Rose jar, artistic rendering, 17  
foot, 16, 17  
ornament on, 17
- shoulders, 16  
study of, 15-16  
tangential joinings, 17
- Round arch, 99, 103
- Round window, 100-101
- SAN' APOLLINARE, Church of, 81  
Selection for picture, from photograph, 81;  
*see* Composition  
from interior, 112, 115
- Shadows, 143-153  
cast by an oblique edge, 150-151  
cast by parallel rays (sun, moon), 144-151  
cast by rays from lamp, 143, 152  
distorted, 148-149  
in an interior, 152-153  
in a shadow-box, 144-150  
located by imaginary vertical planes, 147  
located by two points, 148  
of a cube, 147  
of curves, 149  
of natural objects, 151-152  
on an oblique surface, 151  
on a house, 151  
on curved surfaces, 149-150  
vanishing of light rays, 146-147  
vanishing of shadow-directions, 145-146
- Shoulders of cylindrical objects, 16; relation to cone principle, 19
- Solutions of problems, 161-168  
cylinder and rectangular block, 163  
cylinder, cone and ball, 161  
square frame leaning on rectangular block, 164  
triangular prism and frame, 167
- Spherical picture plane, 141-142
- Spout, of cream jug, 22
- Square frame, 85-87  
test of, 87  
application of study, 87  
leaning on rectangular block, 91, 164
- TABLE line, explained, 3  
high enough on paper, 43  
position with plate on edge, 30  
significance in composition, 13  
subordination of, 44
- Taking direction of vanishing edges with pencil, 55

## INDEX

- Teapot, cover, 28; ears, 28  
  knob, 28  
  study, 26-28
- Tests, by blackboard for vanishing lines,  
  57  
  by eye, for vanishing lines, 56  
  cylindrical objects not vertical, 95  
  hexagonal plinth, 124  
  square frame, 87  
  the ellipse, 9  
  the eye a final test, xii, 142
- Thumb-nail sketches, interiors, 115  
  still-life objects, 26, 68
- Tiled floor, 109, 126
- Time study, glass bowl, 24, 25
- Triangular prism and frame, 131, 167
- Two books, at different angles, 61-62  
  with cylindrical object, 67-68
- VANISHING lines, "converging," 37-38  
  example of, railroad, 41-42  
  oblique, 73; *see* Oblique vanishing  
  lines  
  taking direction of, with pencil, 55  
  tests of, 56, 57
- Vanishing of parallel planes, 51, 73-74,  
  162, *note*
- Vanishing points, abbreviation of, 44  
  numbering, 50  
  oblique, 73; *see* Oblique vanishing  
  lines  
  use without marking, 56, 80, 124
- Vanishing traces, 73, 151
- Vertical lines drawn vertical, 60
- Vignetting, 116.



